



**Staff Selection Commission**  
(Government Of India)

**REGISTRATION NUMBER :** [www.Qmaths.in](http://www.Qmaths.in)

**EXAM DATE :** 27-October-2016

**EXAM NAME :** SSC Examination 2016 TOTAL

**MARKS :** 200

**CANDIDATE NAME :** [www.Qmaths.in](http://www.Qmaths.in)

**EXAM START TIME :** 15:00:00

**EXAM DURATION :** 01:15 Hrs

**TOTAL NO OF QUESTIONS :** 100

Question 1. Select the related word/letters/numbers from the given alternatives:

दिये गये विकल्पों में से संबंधित शब्द/अक्षरों/संख्या को चुनिए।

Yesterday : Tomorrow :: March : ?

कल (विगत) : कल (भावी) :: मार्च : ?

**Options:**

1) April

अप्रैल

2) May

मई

3) January

जनवरी

4) June

जून

**Correct Answer:** May

मई

**Candidate Answer:** April

अप्रैल

Question 2. Select the related word/letters/numbers from the given alternatives:

दिये गये विकल्पों में से संबंधित शब्द/अक्षरों/संख्या को चुनिए।

BFG : EIJ :: RVW : ?

**Options:**

1) UWY

2) UYZ

3) SWX

4) QUV

**Correct Answer:** UYZ

**Candidate Answer:** UYZ

Question 3. Select the related word/letters/numbers from the given alternatives:

दिये गये विकल्पों में से संबंधित शब्द/अक्षरों/संख्या को चुनिए।

54 : 90 :: 134 : ?

**Options:**

1) 206

2) 202

3) 208

4) 186

**Correct Answer:** 186

**Candidate Answer:** 206

**Visit [www.qmaths.in](http://www.qmaths.in) for tons of free study materials and latest exam updates.**

Question 4.

**For the following questions**

Find the odd word/letters/number from the given alternatives.

दिए गए विकल्पों में से विषम शब्द/अक्षर/संख्या को चुनिए

**Options:**

1) Quadrilateral

चतुर्भुज

2) Cube

घन

3) Square

वर्ग

4) Triangle

त्रिभुज

**Correct Answer:** Cube

घन

**Candidate Answer:** Cube

घन

Question 5.

**For the following questions**

Find the odd word/letters/number from the given alternatives.

दिए गए विकल्पों में से विषम शब्द/अक्षर/संख्या को चुनिए

**Options:**

1) BEG

2) KMO

3) QTV

4) GJL

**Correct Answer:** KMO**Candidate Answer:** KMO

Question 6.

**For the following questions**

Find the odd word/letters/number from the given alternatives.

दिए गए विकल्पों में से विषम शब्द/अक्षर/संख्या को चुनिए ?

**Options:**

1) 248

2) 3612

3) 4810

4) 51020

**Correct Answer:** 4810**Candidate Answer:** 4810

Question 7. Arrange the following words as per order in the dictionary.

निम्नलिखित शब्दों को शब्दकोश में दिए गए क्रम के अनुसार लिखिए ?

1. Brittle 2. Brisk 3. Bright 4. Bride

**Options:**

1) 4, 3, 2, 1

2) 1, 2, 3, 4

3) 2, 3, 4, 1

4) 4, 2, 1, 3

**Correct Answer:** 3Visit [www.Qmaths.in](http://www.Qmaths.in) for tons of free study materials and latest exam updates.

Candidate Answer: 4, 3, 2, 1

Question 8. A series is given, with one term missing. Choose the correct alternative from the given ones that will complete the series.

निम्नलिखित प्रश्न में एक अनुक्रम दिया गया है, जिसमें एक पद लुप्त है। दिए गए विकल्पों में से वह सही विकल्प चुनिए जो अनुक्रम को पूरा करे

ZWT, VSP, ROL, ?

**Options:**

1) QNL

2) MPK

3) NKH

4) PLI

**Correct Answer:** NKH**Candidate Answer:** NKH

Question 9. A series is given, with one term missing. Choose the correct alternative from the given ones that will complete the series.

निम्नलिखित प्रश्न में एक अनुक्रम दिया गया है, जिसमें एक पद लुप्त है। दिए गए विकल्पों में से वह सही विकल्प चुनिए जो अनुक्रम को पूरा करे

1, 6, 15, ?, 45, 66

**Options:**

1) 26

2) 24

3) 28

4) 23

**Correct Answer:** 28**Candidate Answer:** 28

Question 10. Pointing to a man in a photograph a woman said, "He is the only son of my mother's father." How is the woman related to the man in the photograph?

एक फोटोग्राफ में एक व्यक्ति की ओर इशारा करके महिला ने कहा, "वह मेरी मां के पिता का इकलौता पुत्र है।" फोटोग्राफ के उस व्यक्ति से महिला का क्या संबंध है ?

**Options:**

1) Niece

भांजी

2) Sister

बहन

3) Daughter

पुत्री

4) Grand-daughter

पोत्री

**Correct Answer:** Niece

भांजी

**Candidate Answer:** Niece

भांजी

Question 11. If Seshan is taller than Ammu but shorter than Raju and Ammu is just as tall as Nitin but taller than Kishore, then Nitin is

यदि शेषन अम्मू से लंबा है लेकिन राजू से छोटा है और अम्मू की लंबाई नितिन जितनी है लेकिन किशोर से अधिक है, तो नितिन की लंबाई कितनी है ?

**Options:**

1) Just as tall as Seshan

शेषन जितनी लंबाई

2) Shorter than Ammu

अम्मू से कम लंबाई

3) Taller than Raju

राजू से अधिक लंबाई

4) Shorter than Seshan

शेषन से कम लंबाई

**Correct Answer:** Shorter than Seshan

शेषन से कम लंबाई

**Candidate Answer:** Shorter than Seshan

शेषन से कम लंबाई

Question 12. From the given alternative words, select the word which cannot be formed using the letters of the given word:

निम्नलिखित विकल्पों में से वह शब्द चुनिए जो दिए गए शब्द के अक्षरों का प्रयोग करके नहीं बनाया जा सकता ?

FOUNDATION

**Options:**

1) DONATION

2) DATE

3) FOOD

4) VIVID

**Visit [www.qmaths.in](http://www.qmaths.in) for tons of free study materials and latest exam updates.**

**Correct Answer:** DATE**Candidate Answer:** DATE

Question 13.If WING is written as \*£?= and THEN as @\$©? then how will NITE be written?

यदि WING को \*£?= और THEN को @\$©? लिखा जाता है, तो उसी कोड में NITE को कैसे लिखा जाएगा ?

**Options:**

1) ?\*@©

2) ?£@©

3) ?£\$©

4) ?£@\$

**Correct Answer:** ?£@©**Candidate Answer:** ?£@©

Question 14.If '+' stands for multiplication , '-' stands for addition, 'x' stands for division and '÷' stands for subtraction, then which one of the following equation is correct?

यदि '+' का अर्थ गुणा है, '-' का अर्थ जोड़ है, 'x' का अर्थ भाग है, और '÷'; का अर्थ घटा है तो कौन-'सा समीकरण सही है ?

**Options:**1)  $9 + 8 - 4 \times 2 \div 18 = 56$ 2)  $9 \times 8 + 4 \div 2 - 18 = 26$ 3)  $9 \times 8 \div 4 + 2 - 18 = 200$ 4)  $9 - 8 \times 4 + 2 \div 18 = 203$ **Correct Answer:**  $9 + 8 - 4 \times 2 \div 18 = 56$ **Candidate Answer:**  $9 + 8 - 4 \times 2 \div 18 = 56$ 

Question 15.In this question, some equations are solved on the basis of a certain system. On the same basis find out the correct answer from amongst the four alternatives for the unsolved equation.

कुछ समीकरण एक निश्चित प्रणाली से हल किए गए हैं। उसी आधार पर दिए गए विकल्पों में से सही उत्तर चुनकर लिखिए

$8 + 5 - 5 = 45$

$12 + 6 - 5 = 77$

$14 + 5 - 10 = ?$

**Options:**

1) 60

2) 80

3) 58

4) 76

**Correct Answer:** 80**Candidate Answer:** 80

Question 16.Select the missing numbers from the given alternatives

दिए गए विकल्पों में से लुप्त संख्या ज्ञात कीजिए

6	18	15
3	2	5
4	3	?
8	27	9

**Options:**

1) 11

2) 6

3) 3

4) 2

**Correct Answer:** 3**Candidate Answer:** 3**Visit [www.qmaths.in](http://www.qmaths.in) for tons of free study materials and latest exam updates.**

Question 17. Kishore starts from a point and walks 6 kms towards East and turning to his left he moves 3 kms. After this, he again turns to his left and moves 6 kms. Now, how far is he from his starting point?

किशोर एक स्थान से पूर्व की ओर 6 कि.मी. चलता है और अपने बाएं मुड़कर 3 कि.मी. चलता है। उसके बाद वह फिर बाएं मुड़कर 6 कि.मी. चलता है। इस समय वह अपने शुरुआती स्थान से कितनी दूर है ?

**Options:**

- 1) 3 kms  
3 कि.मी.
- 2) 2 kms  
2 कि.मी.
- 3) 4 kms  
4 कि.मी.
- 4) 5 kms  
5 कि.मी.

**Correct Answer:** 3 kms  
3 कि.मी.

**Candidate Answer:** 3 kms  
3 कि.मी.

Question 18. Consider the given statement/s to be true and decide which of the given conclusions/assumptions can definitely be drawn from the given statement.

Statements: 1. All goats are cows.

2. All cows are animals

Conclusions: I. All goats are animals.

II. All animals are goats.

निम्नलिखित प्रश्न में एक या दो वक्तव्य दिये गये हैं, जिसके आगे दो निष्कर्ष/मान्यताएं, I और II निकाले गये हैं। आपको विचार करना है कि वक्तव्य सत्य है चाहे वह सामान्यतः शर्त तथ्यों से भिन्न प्रतीत होता हो। आपको निर्णय करना है कि दिए गए वक्तव्य में से कौन-सा निश्चित रूप से सही निष्कर्ष/मान्यता निकाला जा सकता है ?

वक्तव्य : 1. सभी बकरियां गाय हैं।

2. सभी गायें जानवर हैं।

निष्कर्ष : I. सभी बकरियां जानवर हैं।

II. सभी जानवर बकरियां हैं।

**Options:**

1) Only conclusion I follows

केवल निष्कर्ष I सही है।

2) Only conclusion II follows

केवल निष्कर्ष II सही है।

3) Both conclusion I and conclusion II follow

निष्कर्ष I और II दोनों सही हैं।

4) Neither conclusion I nor conclusion II follows

ना तो निष्कर्ष I सही है और ना ही निष्कर्ष II सही है।

**Correct Answer:** Only conclusion I follows


केवल निष्कर्ष I सही है।

**Candidate Answer:** Only conclusion I follows

केवल निष्कर्ष I सही है।

Question 19. How many triangles are there in the given diagram?

दी गई आकृति में कितने त्रिभुज हैं ?



**Options:**

1) 6

2) 10

3) 12

4) 14

**Correct Answer:** 14

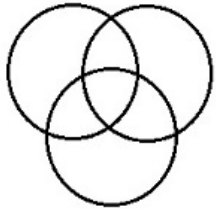
**Candidate Answer:** 10

Question 20. Which of the diagrams given below correctly represents the relation stated among Ballpoint pen, Sketch pen, Pens

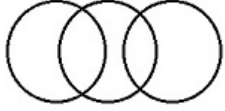
दिए गए विकल्पों में से कौन-सा आरेख निम्नलिखित के बीच सही संबंध को दर्शाता है ? बॉल प्वाइंट पेन, स्केच पेन, पेन

Options:

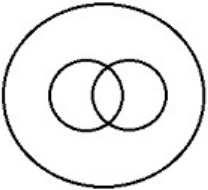
1)



2)



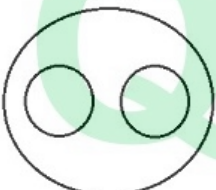
3)



4)



Correct Answer:

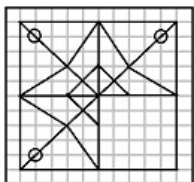


Candidate Answer:



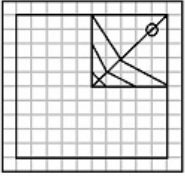
Question 21. Which answer figure will complete the pattern in the question figure?

कौन-सी उत्तर आकृति प्रश्न आकृति के प्रतिरूप को पूरा करेगी ?

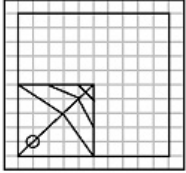


Options:

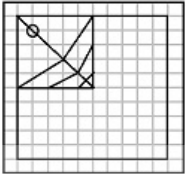
1)



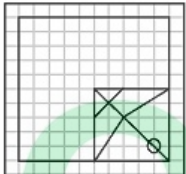
2)



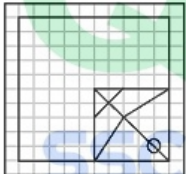
3)



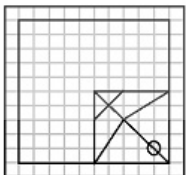
4)



Correct Answer:

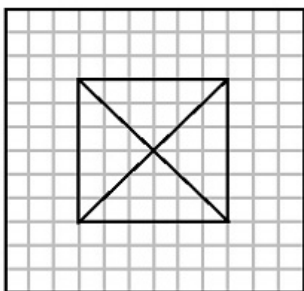


Candidate Answer:



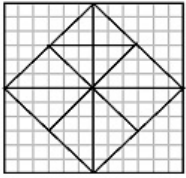
Question 22. Select the answer figure in which the question figure is hidden.

दी गई उत्तर आकृतियों में से उस उत्तर आकृति को चुनिए जिसमें प्रश्न आकृति निहित है ?

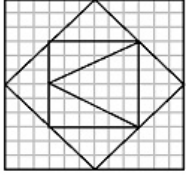


Options:

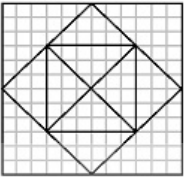
1)



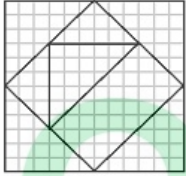
2)



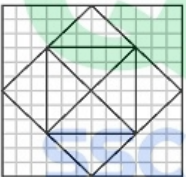
3)



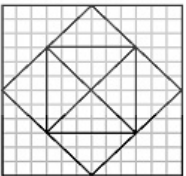
4)



Correct Answer:

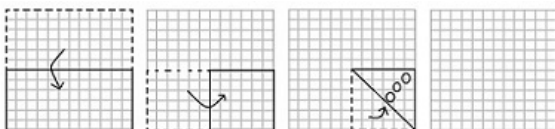


Candidate Answer:



Question 23. A piece of paper is folded and cut as shown below in the question figures. From the given answer figures, indicate how it will appear when opened.

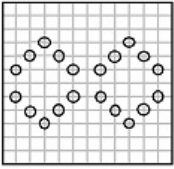
यदि किसी कागज को, नीचे प्रश्न आकृतियों में दिखाए अनुसार मोड़कर काटा जाए तो खोलने के बाद वह किस उत्तर आकृति जैसा दिखाई देगा ?



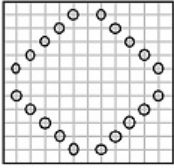


Options:

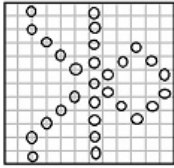
1)



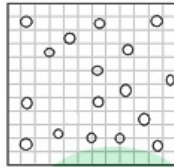
2)



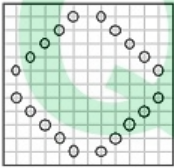
3)



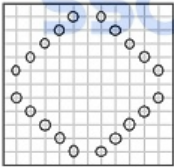
4)



Correct Answer:



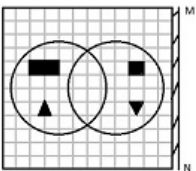
Candidate Answer:



Qmaths.in | IBPS | RAILWAYS | LIC | SIDBI

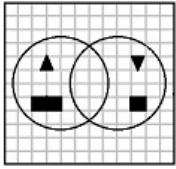
Question 24.If a mirror is placed on the line MN, then which of the answer figures is the right image of the given figure?

यदि एक दर्पण को MN रेखा पर रखा जाए तो दी गई उत्तर आकृतियों में से कौन-सी आकृति प्रश्न आकृति का सही प्रतिबिम्ब होगी ?

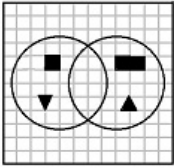


Options:

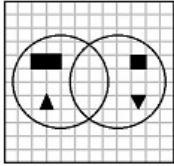
1)



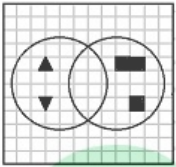
2)



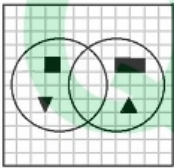
3)



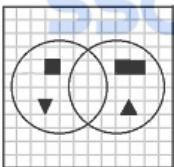
4)



Correct Answer:



Candidate Answer:



Question 25. In the question, a word is represented by only one set of numbers as given in any one of the alternatives. The sets of numbers given in the alternatives are represented by two classes of alphabets as in two matrices given below. The columns and rows of Matrix I are numbered from 0 to 4 and that of Matrix II are numbered from 5 to 9. A letter from these matrices can be represented first by its row and next by its column, e.g., 'A' can be represented by 03, 55, etc., and 'P' can be represented by 44, etc.

Similarly you have to identify the set for the word 'TOWN'

निम्नलिखित प्रश्न में विकल्पों में दिए गए संख्या-समूह, अक्षरों के दो वर्गों द्वारा दर्शाए गए हैं, जैसे कि नीचे दिए गए दो आव्यूहों में हैं। आव्यूह I के स्तम्भ और पंक्ति की संख्या 0 से 4 तक दी गई है, और आव्यूह II के 5 से 9 तक, इन आव्यूहों से एक अक्षर को पहले उसकी पंक्ति और बाद में स्तम्भ संख्या द्वारा दर्शाया जा सकता है। उदाहरण के लिए, A को 03, 55, आदि द्वारा दर्शाया जा सकता है तथा P को 44 आदि द्वारा दर्शाया जा सकता है। इसी तरह से आपको दिए शब्द 'TOWN' के लिए समूह को पहचानना है।

MATRIX - I

	0	1	2	3	4
0	K	G	E	A	S
1	P	V	H	R	Y
2	N	U	N	R	K
3	W	S	B	O	J
4	T	U	A	I	P

MATRIX - II

	5	6	7	8	9
5	A	H	U	W	N
6	Y	R	B	T	V
7	O	I	H	B	Q
8	V	O	E	I	S
9	E	T	K	W	P

Visit [www.qmaths.in](http://www.qmaths.in) for tons of free study materials and latest exam updates.

**Options:**

- 1) 40, 86, 03, 59
- 2) 68, 75, 30, 43
- 3) 68, 76, 58, 21
- 4) 40, 33, 58, 22

**Correct Answer:** 40, 33, 58, 22**Candidate Answer:** 40, 33, 58, 22

Question 26. Which among the following is a tax levied by Centre and not shared with States?

निम्नलिखित विकल्पों में से कौन सा कर केंद्र द्वारा लगाया जाता है और राज्यों के साथ नहीं बाँटा जाता है?

**Options:**

- 1) Sales Tax  
बिक्री कर
- 2) Excise Duty  
उत्पाद शुल्क
- 3) Corporation Tax  
निगम कर
- 4) Income Tax  
आय कर

**Correct Answer:** Corporation Tax

निगम कर

**Candidate Answer:** Income Tax

आय कर

Question 27. Which of the following is the right expansion of GATT?

निम्नलिखित में से GATT का सही विस्तृत रूप कौन सा है ?

**Options:**

- 1) Government Agreement on Trade and Tax  
गवर्नमेंट एग्रीमेंट ऑन ट्रेड एंड टैक्स
- 2) General Agreement on Trade and Tariffs  
जनरल एग्रीमेंट ऑन ट्रेड एंड टेरिफ
- 3) Government Agreement on Trade and Tariffs  
गवर्नमेंट एग्रीमेंट ऑन ट्रेड एंड टेरिफ
- 4) General Agreement on Trade and Tax  
जनरल एग्रीमेंट ऑन ट्रेड एंड टैक्स

**Correct Answer:** General Agreement on Trade and Tariffs

जनरल एग्रीमेंट ऑन ट्रेड एंड टेरिफ

**Candidate Answer:** Government Agreement on Trade and Tax

गवर्नमेंट एग्रीमेंट ऑन ट्रेड एंड टैक्स

Question 28. The President of India is :

भारत के राष्ट्रपति हैं

**Options:**

- 1) The Head of State  
देश के प्रमुख
- 2) The Head of Government  
सरकार के प्रमुख
- 3) The Head of State and Government  
देश और सरकार के प्रमुख
- 4) The Head of Parliament  
संसद (पार्लियामेंट) के प्रमुख

**Correct Answer:** The Head of State

देश के प्रमुख

**Candidate Answer:** The Head of State

देश के प्रमुख

Question 29. What is true about origin of Naxalism?

नक्सलवाद के जन्म के बारे में क्या सही है ?

**Options:**

- 1) A peasant revolt which began from Naxalbari village of West Bengal  
किसान विद्रोह जो पश्चिम बंगाल के नक्सलबाड़ी गाँव से शुरू हुआ।
- 2) It was led by Charu Mazumdar, Kanu Sanyal and Jungal Santhal.  
इसका नेतृत्व चारु मजूमदार, कनु सानयाल और जुंगल संथाल ने किया था।
- 3) It was inspired by the Marxism - Leninism - Maoism  
यह मार्क्सवाद-लेनिनिवाद -माओवाद से प्रेरित था
- 4) All of the above  
सभी विकल्प सही हैं।

**Correct Answer:** All of the above

सभी विकल्प सही हैं।

**Candidate Answer:** All of the above

सभी विकल्प सही हैं।

**Visit [www.qmaths.in](http://www.qmaths.in) for tons of free study materials and latest exam updates.**

Question 30. Which city is known as 'Electronic City'?

कौन - सा शहर इलेक्ट्रॉनिक सिटी के नाम से जाना जाता है ?

**Options:**

1) Gurugram

गुरुग्राम

2) Bengaluru

बंगलुरु

3) Jaipur

जयपुर

4) Salem (Tamil Nadu)

(सेलम) तमिल नाडू

**Correct Answer:** Bengaluru

बंगलुरु

**Candidate Answer:** Salem (Tamil Nadu)

(सेलम) तमिल नाडू

Question 31. Who was known as the 'Father of Indian Renaissance'?

भारतीय पुनर्जागरण का जनक किसे कहते हैं ?

**Options:**

1) Vivekananda

विवेकानन्द

2) Bal Gangadhar Tilak

बाल गंगाधर तिलक

3) Raja Ram Mohan Roy

राजा राम मोहन राय

4) Surendranath Banerjee

सुरेन्द्रनाथ बनर्जी

**Correct Answer:** Raja Ram Mohan Roy

राजा राम मोहन राय

**Candidate Answer:** Raja Ram Mohan Roy

राजा राम मोहन राय

Question 32. In which of its sessions did the Indian National Congress declare 'Purna Swaraj' as its specific goal?

भारतीय राष्ट्रीय कांग्रेस ने अपने किस सत्र में पूर्ण स्वराज को अपना विशिष्ट लक्ष्य घोषित किया ?

**Options:**

1) Lahore Session, 1929

लाहौर सत्र, 1929

2) Tripuri Session, 1939

त्रिपुरी सत्र, 1939

3) Surat Session, 1905

सूरत सत्र, 1905

4) Special Session in Calcutta, 1920

कोलकत्ता में विशेष सत्र, 1920

**Correct Answer:** Lahore Session, 1929

लाहौर सत्र, 1929

**Candidate Answer:** Tripuri Session, 1939

त्रिपुरी सत्र, 1939

Question 33. Motilal Nehru and C.R. Das were the founders of a party known as the

मोती लाल नेहरू और सी.आर. दास किस पार्टी के संस्थापक थे ?

**Options:**

1) Gadar Party

गदर पार्टी

2) Forward Bloc

फारवर्ड ब्लॉक

3) Swarajya Party

स्वराज्य पार्टी

4) Socialist Congress

सोशलिस्ट कांग्रेस

**Correct Answer:** Swarajya Party

स्वराज्य पार्टी

**Candidate Answer:** Socialist Congress

सोशलिस्ट कांग्रेस

Question 34. Cooperative farming has been most successful in which country.

'को-ऑपरेटिव फार्मिंग' किस देश में सबसे सफल हुई है ?

**Options:**

1) India

भारत

2) Denmark

डेनमार्क

3) USA

यू.एस.ए

4) Russia

रूस

Visit [www.qmaths.in](http://www.qmaths.in) for tons of free study materials and latest exam updates.

**Correct Answer:** Denmark  
डेनमार्क

**Candidate Answer:** India  
भारत

Question 35. Solar energy is converted into chemical energy during

सौर ऊर्जा, रासायनिक ऊर्जा में किस समय बदलती है ?

**Options:**

1) combustion

ज्वलन

2) transition

संक्रमण

3) photosynthesis

प्रकाश संश्लेषण

4) fusion

विलयन

**Correct Answer:** photosynthesis

प्रकाश संश्लेषण

**Candidate Answer:** photosynthesis

प्रकाश संश्लेषण

Question 36. Which one of the following is not the excretory organ?

निम्नलिखित में से कौन - सा उत्सर्जन अंग नहीं है ?

**Options:**

1) Kidneys

गुर्दे

2) Liver

कलेजा

3) Lungs

फेफड़े

4) Spleen

प्लीहा

**Correct Answer:** Spleen

प्लीहा

**Candidate Answer:** Lungs

फेफड़े

Question 37. Mechanism preventing interbreeding is called \_\_\_\_\_.

अंतःप्रजनन को रोकने वाली प्रक्रिया को क्या कहते हैं ?

**Options:**

1) Adaptation

अनुकूलन

2) Isolation

विलगन

3) Reproduction

पुनःप्रजनन

4) Recombination

पुनर्संयोजन

**Correct Answer:** Isolation

विलगन

**Candidate Answer:** Isolation

विलगन

Question 38. The Solar energy produced by

सौर ऊर्जा किसके द्वारा उत्पन्न होती है ?

**Options:**

1) Fusion reaction

संलयन प्रक्रिया

2) Fission reaction

विखंडन प्रक्रिया

3) Combustion reaction

दाहन प्रक्रिया

4) None

इन में से कोई नहीं

**Correct Answer:** Fusion reaction

संलयन प्रक्रिया

**Candidate Answer:** Fusion reaction

संलयन प्रक्रिया

Question 39. On a cold day when the room temperature is 15°C, the metallic cap of a pen becomes much colder than its plastic body, though both are at the same temperature of 15°C, because

किसी ऐसे ठंडे दिन में जब कक्ष का तापमान 15<sup>0</sup> से. होता है, पेन की धातु

की कैप प्लास्टिक की तुलना में अधिक ठंडी क्यों हो जाती है भले ही दोनों 15<sup>0</sup> से. के समान तापमान में रखे हों ?

Visit [www.qmaths.in](http://www.qmaths.in) for tons of free study materials and latest exam updates.

**Options:**

- 1) metals have higher thermal capacity than plastics  
धातु में प्लास्टिक से अधिक ताप क्षमता होती है।
- 2) plastics have a lower density than metals  
प्लास्टिक में धातु से कम घनत्व होता है।
- 3) metals are good conductors of heat  
धातु उष्मा का सुचालक है।
- 4) plastics have a higher thermal conductivity than metals  
प्लास्टिक में धातु से अधिक ताप चालकता होती है।

**Correct Answer:** metals are good conductors of heat  
धातु उष्मा का सुचालक है।

**Candidate Answer:** plastics have a higher thermal conductivity than metals  
प्लास्टिक में धातु से अधिक ताप चालकता होती है।

Question 40.Cache memory acts between \_\_\_\_\_

कैश मेमोरी किन के बीच क्रिया करती है ?

**Options:**

- 1) CPU and RAM  
CPU और RAM
- 2) CPU and ROM  
CPU और ROM
- 3) RAM and ROM  
RAM और ROM
- 4) CPU and Hard disk  
CPU और हार्ड डिस्क

**Correct Answer:** CPU and RAM  
CPU और RAM

**Candidate Answer:** RAM and ROM  
RAM और ROM

Question 41.Suez Canal is located in which of the following countries

स्वेज नहर किस देश में स्थित है ?

**Options:**

- 1) Sudan  
सुडान
- 2) Saudi Arabia  
सऊदी अरबिया
- 3) Egypt  
ईजिप्ट
- 4) Jordan  
जोर्डन

**Correct Answer:** Egypt  
ईजिप्ट

**Candidate Answer:** Egypt  
ईजिप्ट

Question 42.\"Globalisation of Indian Economy\" denotes

भारतीय अर्थव्यवस्था का वैश्वीकरण क्या प्रदर्शित करता है :

**Options:**

- 1) increase of external borrowings  
बाह्य ऋण में वृद्धि
- 2) having minimum intervention in economic relations with other countries  
दूसरे देशों के साथ आर्थिक सम्बन्ध में कम से कम हस्तक्षेप करना
- 3) starting of new business units abroad  
विदेश में नया व्यापार शुरू करना
- 4) relaxing the programmes of import substitution  
आयात प्रतिस्थापन के लिए सरल योजनाएँ लाना

**Correct Answer:** having minimum intervention in economic relations with other countries  
दूसरे देशों के साथ आर्थिक सम्बन्ध में कम से कम हस्तक्षेप करना

**Candidate Answer:** relaxing the programmes of import substitution  
आयात प्रतिस्थापन के लिए सरल योजनाएँ लाना

Question 43.Ozone layer is formed due to reactions of

ओजोन परत किस-किसकी प्रतिक्रिया से बनती है ?

**Options:**

- 1) Oxygen and Ultraviolet rays  
ऑक्सीजन और पराबैंगनी किरणों
- 2) Carbon dioxide and layers of atmosphere  
कार्बन - डाइ ऑक्साइड और वायुमण्डल की परतों
- 3) Cosmic rays and layers of atmosphere  
अंतरिक्ष किरणों और वायुमंडल की परतों
- 4) Infrared rays and Ultraviolet rays  
अवरक्त किरणों और परा-बैंगनी किरणों

**Correct Answer:** Oxygen and Ultraviolet rays  
ऑक्सीजन और पराबैंगनी किरणों

Visit [www.qmaths.in](http://www.qmaths.in) for tons of free study materials and latest exam updates.

**Candidate Answer:** Oxygen and Ultraviolet rays  
ऑक्सीजन और पराबैंगनी किरणों

Question 44. Biodegradable wastes can usually be converted into useful substances with the help of

जैव अवक्रमणीय अवशिष्ट को किसकी सहायता से उपयोगी पदार्थों में बदला जा सकता है ?

**Options:**

1) Bacteria

जीवाणु

2) Nuclear proteins

न्यूक्लियर प्रोटीन्स

3) Radioactive substances

रेडियोधर्मी पदार्थ

4) Viruses

विषाणु

**Correct Answer:** Bacteria

जीवाणु

**Candidate Answer:** Bacteria

जीवाणु

Question 45. 'Pradhan Mantri Jan-Dhan Yojana' has been launched for \_\_\_\_\_

प्रधान मंत्री जन धन योजना का उद्देश्य क्या है ?

**Options:**

1) Promoting financial inclusion in the country

देश में वित्तीय समावेश को बढ़ावा देना

2) Providing loans to poorest people in the country

देश के गरीब लोगों को ऋण दिलाना

3) Providing financial help to the marginalised community

निर्वाचित समूह को वित्तीय सहायता उपलब्ध कराना

4) Promoting women in backward areas

पिछड़े क्षेत्रों की महिलाओं को प्रोत्साहित करना

**Correct Answer:** Promoting financial inclusion in the country

देश में वित्तीय समावेश को बढ़ावा देना

**Candidate Answer:** Promoting financial inclusion in the country

देश में वित्तीय समावेश को बढ़ावा देना

Question 46. The first woman ruler in Indian history was

भारतीय इतिहास में प्रथम महिला शासक कौन थी ?

**Options:**

1) Razia Sultan

रज़िया सुल्तान

2) Hamida Begum

हामिदा बेगम

3) Mehrunnissa

मेहरुनिसा

4) Hazrat Mahal

हज़रत महल

**Correct Answer:** Razia Sultan

रज़िया सुल्तान

**Candidate Answer:** Razia Sultan

रज़िया सुल्तान

Question 47. Which of the following princely states did not accede to the Indian Union after independence?

निम्नलिखित में से कौन सा राजवाड़ा स्वतन्त्रता के बाद भारतीय संगठन में सम्मिलित नहीं हुआ ?

**Options:**

1) Hyderabad

हेदराबाद

2) Junagarh

जुनागढ़

3) Kashmir

कश्मीर

4) Jodhpur

जोधपुर

**Correct Answer:** Jodhpur

जोधपुर

**Candidate Answer:** Hyderabad

हेदराबाद

Question 48. Which of the following books is not written by Munshi Premchand?

निम्नलिखित में से कौन सी किताब मुंशी प्रेमचन्द के द्वारा नहीं लिखी गई ?

**Options:**

- 1) Gaban  
गबन
- 2) Godan  
गोदान
- 3) Guide  
गाईड
- 4) Nirmala  
निर्मला

**Correct Answer:** Guide

गाईड

**Candidate Answer:** Guide

गाईड

Question 49. Economic Survey in India is published officially, every year by the

भारत में आर्थिक सर्वेक्षण सरकारी स्तर पर प्रति वर्ष कौन प्रकाशित करता है ?

**Options:**

- 1) Reserve Bank of India  
भारतीय रिजर्व बैंक
- 2) NITI Aayog  
नीति आयोग
- 3) Ministry of Finance  
वित्त मंत्रालय
- 4) Ministry of Commerce  
वाणिज्य मंत्रालय

**Correct Answer:** Ministry of Finance

वित्त मंत्रालय

**Candidate Answer:** Reserve Bank of India

भारतीय रिजर्व बैंक

Question 50. Copper wires are generally used for electrical power transmission instead of iron wire because

बिजली संचरण के लिए लोहे के तारों के बजाय प्रायः तांबे के तार प्रयुक्त होते हैं, क्योंकि \_

**Options:**

- 1) Copper is cheaper than iron  
तांबा लोहे की अपेक्षा सस्ता होता है।
- 2) Copper is lighter than iron  
तांबा लोहे की तुलना में हल्का होता है।
- 3) Copper is a better conductor of electricity than iron  
लोहे की अपेक्षा तांबा बेहतर बिजली सुचालक होता है।
- 4) Copper can take higher power than iron  
लोहे की अपेक्षा तांबा ज्यादा विद्युत ले जा सकता है।

**Correct Answer:** Copper is a better conductor of electricity than iron

लोहे की अपेक्षा तांबा बेहतर बिजली सुचालक होता है।

**Candidate Answer:** Copper is a better conductor of electricity than iron

लोहे की अपेक्षा तांबा बेहतर बिजली सुचालक होता है।

Question 51. 15 men can finish a piece of work in 40 days . The days after which 5 men should leave the work so that the work is finished in 45 days altogether is .

15 आदमी किसी काम को 40 दिन में कर सकते हैं। 5 आदमी कितने दिन बाद काम छोड़कर जाए कि काम कुल 45 दिन में पूरा हो जाए ?

**Options:**

- 1) 10
- 2) 20
- 3) 30
- 4) 35

**Correct Answer:** 30**Candidate Answer:** 20

Question 52. Cost price of an article is Rs. 200. If 20% profit is made after giving 20% discount on marked price , the marked price is

किसी वस्तु का लागत मूल्य Rs. 200 है। यदि अंकित मूल्य पर 20% की छूट देने के बाद 20% लाभ प्राप्त हो तो अंकित मूल्य कितना है ?

**Options:**

- 1) Rs.300
- 2) Rs.320
- 3) Rs.420
- 4) Rs.450

**Correct Answer:** Rs.300**Candidate Answer:** Rs.300

Question 53. The sum of three numbers is 540 . The ratio of second to third is 9 : 13 and that of first to third is 2 : 7 . The third number is

तीन संख्याओं का योग 540 है। दूसरी और तीसरी संख्या का अनुपात 9:13 है और पहली और तीसरी का अनुपात 2:7 है, तो तीसरी संख्या क्या है ?

**Visit [www.qmaths.in](http://www.qmaths.in) for tons of free study materials and latest exam updates.**



**Options:**

- 1) 273
- 2) 280
- 3) 250
- 4) 286

**Correct Answer:** 273**Candidate Answer:** [ NOT ANSWERED ]

Question 54. An article is sold at a certain price . If it is sold at half of the previous selling price , then there is a loss of  $25\frac{1}{2}\%$  . The profit after selling the article at the previous selling price is

एक वस्तु को किसी निश्चित मूल्य पर बेचा जाता है। यदि उसे पूर्व बिक्री मूल्य से आधे पर बेचा जाये तो  $25\frac{1}{2}\%$  की हानि होती है। वस्तु को पूर्व बिक्री मूल्य पर बेचने के बाद लाभ प्रतिशत क्या होगा ?

**Options:**

- 1) 51%
- 2) 49%
- 3)  $12\frac{3}{4}\%$
- 4)  $24\frac{1}{2}\%$

**Correct Answer:** 49%**Candidate Answer:**  $12\frac{3}{4}\%$ 

Question 55. If A's salary is 30% more than that of B, then how much percent is B's salary less than that of A ?

यदि A का वेतन B के वेतन से 30% अधिक है, तो B का वेतन A से कितने प्रतिशत कम है ?

**Options:**

- 1) 13 . 01
- 2) 13 . 07
- 3) 23 . 07
- 4) 23 . 01

**Correct Answer:** 23 . 07**Candidate Answer:** 23 . 07

Question 56. A man travels for 14 hours, 40 minutes . He covers half of the journey by train at the rate of 60 kmph and rest half by road at the rate of 50 kmph . The distance travelled by him is

एक व्यक्ति 14 घंटे 40 मिनट यात्रा करता है। वह आधी यात्रा 60 कि.मी./घंटा की दर पर ट्रेन से करता है और शेष आधी यात्रा 50 कि.मी./घंटा की दर से बस से करता है। उसने कुल कितनी दूरी तय की ?

**Options:**

- 1) 720 km  
720 कि.मी.
- 2) 800 km  
800 कि.मी.
- 3) 960 km  
960 कि.मी.
- 4) 1000 km  
1000 कि.मी.

**Correct Answer:** 800 km

800 कि.मी.

**Candidate Answer:** 800 km

800 कि.मी.

Question 57. The rate of simple interest for which Rs. 6,000 will amount to Rs. 6,900 in 3 years is

साधारण ब्याज की वह दर क्या होगी जिस पर Rs. 6000 की राशि 3 वर्ष में Rs. 6900 हो जाएगी ?

**Options:**

- 1) 5%
- 2) 7%
- 3) 2%
- 4) 4%

**Correct Answer:** 5%**Candidate Answer:** 5%

Question 58. If  $(a + b)^2 = 100$  and  $(a - b) = 4$  , then ab equals to

यदि  $(a + b)^2 = 100$  और  $(a - b) = 4$  , तो ab कितना है ?

**Options:**

- 1) 116
- 2) 84
- 3) 21
- 4) 53

Visit [www.qmaths.in](http://www.qmaths.in) for tons of free study materials and latest exam updates.

**Correct Answer:** 21**Candidate Answer:** 21Question 59.If  $a + b = 3$  , then the value of  $a^3 + b^3 + 9ab$  is ?यदि  $a + b = 3$  , तो  $a^3 + b^3 + 9ab$  का मान क्या है ?**Options:**

1) 27

2) 9

3) 16

4) 81

**Correct Answer:** 27**Candidate Answer:** 27Question 60.In a triangle ABC , D and E are points on AC and BC respectively, AB & DE are perpendicular to BC . If  $AB = 9$  cm ,  $DE = 3$  cm and  $AC = 24$  cm then AD isएक त्रिभुज ABC में D और E क्रमशः AC और BC पर बिंदु है और AB और DE, BC के लम्ब है। यदि  $AB=9$  से.मी.,  $DE=3$ से.मी.,  $AC=24$  से.मी. है तो AD कितना है ?**Options:**

1) 32 cm

32 से.मी.

2) 16 cm

16 से.मी.

3) 8 cm

8 से.मी.

4) 4 cm

4 से.मी.

**Correct Answer:** 16 cm

16 से.मी.

**Candidate Answer:** 16 cm

16 से.मी.

Question 61.A chord of length 39 cm is at a distance of 10.4 cm from the centre of a circle . Find the radius of the circle

39 से.मी. लंबी एक जीवा एक वृत्त के केन्द्र से 10.4 से.मी. की दूरी पर है। वृत्त की त्रिज्या ज्ञात कीजिए ?

**Options:**

1) 19 . 5 cm (appr.)

19.5 से.मी. (लगभग)

2) 22 . 1 cm (appr.)

22.1 से.मी. (लगभग)

3) 28 . 6 cm (appr.)

28.6 से.मी. (लगभग)

4) 2 . 21 cm (appr.)

2.21 से.मी. (लगभग)

**Correct Answer:** 22 . 1 cm (appr.)

22.1 से.मी. (लगभग)

**Candidate Answer:** 22 . 1 cm (appr.)

22.1 से.मी. (लगभग)

Question 62.The value of  $\cot 10^\circ \cdot \cot 20^\circ \cdot \cot 60^\circ \cdot \cot 70^\circ \cdot \cot 80^\circ$  is $\cot 10^\circ \cdot \cot 20^\circ \cdot \cot 60^\circ \cdot \cot 70^\circ \cdot \cot 80^\circ$  का मान क्या है?**Options:**

1) 1

2) -1

3)  $\sqrt{3}$ 4)  $1/\sqrt{3}$ **Correct Answer:**  $1/\sqrt{3}$ **Candidate Answer:**  $1/\sqrt{3}$ 

Question 63.The largest number of four digits exactly divisible by 88 is :-

चार अंको की वह सबसे बड़ी संख्या कौन-सी है जो 88 से पूरी तरह विभाज्य हो जाए?

**Options:**

1) 9988

2) 9944

3) 8888

4) 9768

**Correct Answer:** 9944**Candidate Answer:** 9944**Visit [www.qmaths.in](http://www.qmaths.in) for tons of free study materials and latest exam updates.**

Question 64. The average age of the boys in a class is 18 years. The average age of the girls in that class is 12 years. If the ratio of the number of boys and girls in that class is 3 : 2 then the average age of the class is

एक कक्षा में लड़कों की औसत आयु 18 वर्ष है। उसी कक्षा में लड़कियों की औसत आयु 12 वर्ष है। यदि उस कक्षा में लड़कों और लड़कियों का अनुपात 3:2 हो, तो कक्षा की औसत आयु कितनी है ?

**Options:**

- 1) 15 . 6 years  
15 . 6 वर्ष
- 2) 16 . 5 years  
16 . 5 वर्ष
- 3) 15 years  
15 वर्ष
- 4) 16 years  
16 वर्ष

**Correct Answer:** 15 . 6 years

15 . 6 वर्ष

**Candidate Answer:** 15 . 6 years

15 . 6 वर्ष

Question 65.

If  $6x^2 - 12x + 1 = 0$ , then the value of  $27x^3 + \frac{1}{8x^3}$  is

यदि  $6x^2 - 12x + 1 = 0$  हो, तो  $27x^3 + \frac{1}{8x^3}$  का मान क्या होगा?

**Options:**

- 1) 162
- 2) 189
- 3) 207
- 4) 225

**Correct Answer:** 189

**Candidate Answer:** 162

Question 66.

If  $\frac{x^2+3x+1}{x^2-3x+1} = \frac{1}{2}$ . Then the value of  $x + \frac{1}{x}$  is

यदि  $\frac{x^2+3x+1}{x^2-3x+1} = \frac{1}{2}$ , हो तो  $x + \frac{1}{x}$  का मान क्या है?

**Options:**

- 1) 9
- 2) -9
- 3) 1
- 4) 2

**Correct Answer:** -9

**Candidate Answer:** 2

Question 67. I is the incentre of  $\Delta ABC$  and if  $\angle BAC = 70^\circ$  then  $\angle BIC$  is

I,  $\Delta ABC$  का अंतकेंद्र है और यदि  $\angle BAC = 70^\circ$  तो  $\angle BIC$  क्या है?

**Options:**

- 1)  $140^\circ$
- 2)  $55^\circ$
- 3)  $125^\circ$
- 4)  $35^\circ$

**Correct Answer:**  $125^\circ$

**Candidate Answer:**  $140^\circ$

Question 68. A chord of length 10 cm subtends an angle  $120^\circ$  at the centre of a circle . Distance of the chord from the centre is

10 सेमी लंबी जीवा  $120^\circ$  कोण को वृत्त के केन्द्र पर अंतरित करती है। केन्द्र से जीवा की दूरी कितनी है ?

**Options:**

- 1)  $5\sqrt{3}$
- 2)  $5\sqrt{3} / 2$
- 3)  $5/\sqrt{3}$
- 4) 5

Visit [www.qmaths.in](http://www.qmaths.in) for tons of free study materials and latest exam updates.

**Correct Answer:**  $5/\sqrt{3}$ **Candidate Answer:** 5Question 69. If  $7 \sin^2 \theta + 3 \cos^2 \theta = 4$ , and  $0^\circ < \theta < 90^\circ$  then the value oftan  $\theta$  isयदि  $7 \sin^2 \theta + 3 \cos^2 \theta = 4$ , और  $0^\circ < \theta < 90^\circ$  हो तो tan  $\theta$  का मान क्या

है ?

**Options:**

1)

 $1/\sqrt{2}$ 

2)

 $1/\sqrt{3}$ 

3)

 $\sqrt{\frac{3}{2}}$ 

4) 1

**Correct Answer:** $1/\sqrt{3}$ **Candidate Answer:** $1/\sqrt{3}$ 

Question 70. If the length and breadth of a rectangle are increased by 10% and 8% respectively, then the area of the rectangle increases by

यदि किसी आयत की लंबाई और चौड़ाई क्रमशः 10% और 8% बढ़ाई जाती है तो आयत का क्षेत्रफल कितना बढ़ जाएगा ?

**Options:**

1)

 $18\frac{7}{5}\%$ 

2)

 $18\frac{4}{5}\%$ 

3) 18 %

4)

 $18\frac{1}{5}\%$ **Correct Answer:** $18\frac{4}{5}\%$ **Candidate Answer:** $18\frac{4}{5}\%$ Question 71. A man standing on the bank of a river observes that the angle of elevation of the top of a tree just on the opposite bank is  $60^\circ$ . But angle of elevation is  $30^\circ$  from a point which is at a distance  $20\sqrt{3}$  ft from the bank. Then the height of the treeएक व्यक्ति नदी के किनारे खड़े होकर देखता है कि सामने के किनारे पर वृक्ष के शीर्ष का उन्नयन कोण  $60^\circ$  है। लेकिन किनारे से  $20\sqrt{3}$  फुट की दूरी पर स्थित बिन्दु से उन्नयन कोण  $30^\circ$  है। वृक्ष की ऊँचाई कितनी है ?**Options:**

1) 60 ft.

60 फुट

2) 45 ft.

45 फुट

3) 30 ft.

30 फुट

4) 15 ft.

15 फुट

**Correct Answer:** 30 ft.

30 फुट

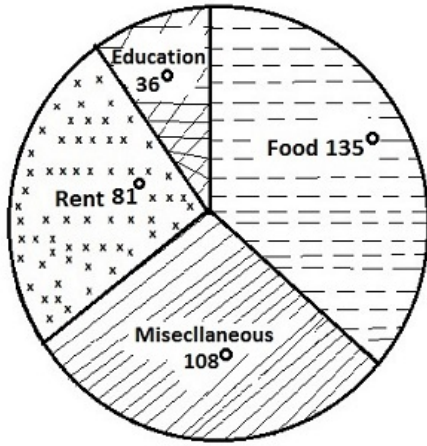
**Candidate Answer:** 30 ft.

30 फुट

**Visit [www.qmaths.in](http://www.qmaths.in) for tons of free study materials and latest exam updates.**

Question 72. The following pie- chart shows the monthly expenditure of a man on various items . If he spends ₹ 16,000 per month, answer the following questions :

निम्नलिखित पाई-चार्ट में एक व्यक्ति के विभिन्न मदों पर मासिक व्यय को दर्शाया गया है। यदि वह प्रति माह ₹ 16,000 की राशि खर्च करता है, तो निम्नलिखित प्रश्नों के उत्तर दीजिए।



If miscellaneous expenses be X% of the total expense, then value of X is

यदि विविध व्यय कुल व्यय का X% हो तो X का मान क्या है ?

**Options:**

1) 22 . 5

2) 37 . 5

3) 36

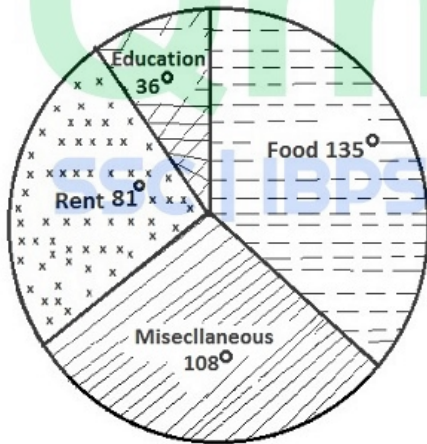
4) 30

**Correct Answer:** 30

**Candidate Answer:** 30

Question 73. The following pie- chart shows the monthly expenditure of a man on various items . If he spends ₹ 16,000 per month, answer the following questions :

निम्नलिखित पाई-चार्ट में एक व्यक्ति के विभिन्न मदों पर मासिक व्यय को दर्शाया गया है। यदि वह प्रति माह ₹ 16,000 की राशि खर्च करता है, तो निम्नलिखित प्रश्नों के उत्तर दीजिए।



The ratio of expenses of food and rent is

भोजन और किराये पर व्यय का अनुपात क्या है ?

**Options:**

1) 5:3

2) 3:5

3) 4:3

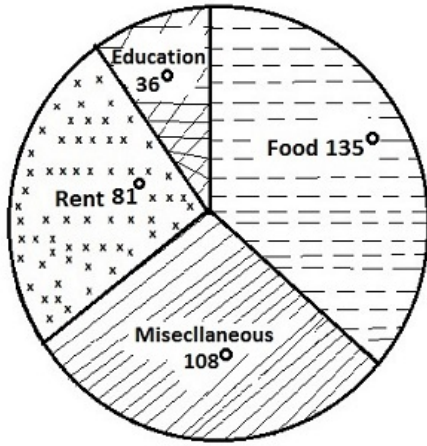
4) 3:4

**Correct Answer:** 5:3

**Candidate Answer:** 5:3

Question 74. The following pie-chart shows the monthly expenditure of a man on various items . If he spends ₹ 16,000 per month, answer the following questions :

निम्नलिखित पाई-चार्ट में एक व्यक्ति के विभिन्न मदों पर मासिक व्यय को दर्शाया गया है। यदि वह प्रति माह ₹ 16,000 की राशि खर्च करता है, तो निम्नलिखित प्रश्नों के उत्तर दीजिए।



The amount he spends on education is?

उसने शिक्षा पर कितनी राशि का व्यय किया ?

**Options:**

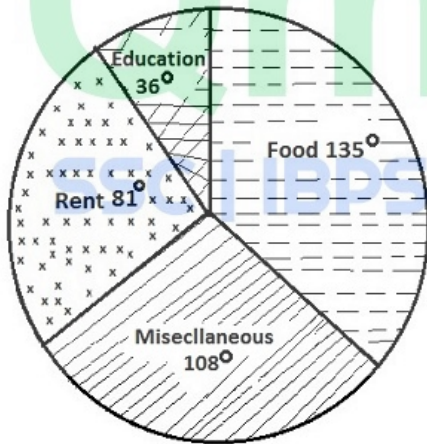
- 1) Rs.1200
- 2) Rs.1600
- 3) Rs.1800
- 4) Rs.2000

**Correct Answer:** Rs.1600

**Candidate Answer:** Rs.1600

Question 75. The following pie-chart shows the monthly expenditure of a man on various items . If he spends ₹ 16,000 per month, answer the following questions :

निम्नलिखित पाई-चार्ट में एक व्यक्ति के विभिन्न मदों पर मासिक व्यय को दर्शाया गया है। यदि वह प्रति माह ₹ 16,000 की राशि खर्च करता है, तो निम्नलिखित प्रश्नों के उत्तर दीजिए।



How much more does he spend on rent as compared to education?

वह शिक्षा की तुलना में किराये पर कितनी ज्यादा रकम खर्च करता है ?

**Options:**

- 1) Rs.2400
- 2) Rs.1800
- 3) Rs.3600
- 4) Rs.2000

**Correct Answer:** Rs.2000

**Candidate Answer:** Rs.2000

Question 76. In the following question, out of the four alternatives, choose the word which best expresses the meaning of the given word and click the button corresponding to it.

GARRULOUS

**Options:**

- 1) GENEROUS
- 2) RETICENT
- 3) TACITURN
- 4) VIBL

Visit [www.qmaths.in](http://www.qmaths.in) for tons of free study materials and latest exam updates.

**Correct Answer:** VOLUBLE**Candidate Answer:** GENEROUS

Question 77. In the following question, out of the four alternatives, choose the word which is opposite in meaning to the given word and click the button corresponding to it.

IMMENSE

**Options:**

- 1) HUGE
- 2) INNOCUOUS
- 3) TINY
- 4) GIGANTIC

**Correct Answer:** TINY**Candidate Answer:** TINY

Question 78. Four words are given, out of which only one word is spelt correctly. Choose the correctly spelt word and click the button corresponding to it.

**Options:**

- 1) Cocaphony
- 2) Cacophony
- 3) Cacaphony
- 4) Cocophony

**Correct Answer:** Cacophony**Candidate Answer:** Cacophony

Question 79. In the following questions, one part of the sentence may have an error. Find out which part of the sentence has an error and click the button corresponding to it. If the sentence is free from error, click the "No error" option.

Shahjahan was (A) / an heir at (B) / the Mughal throne (C) / No error (D)

**Options:**

- 1) A
- 2) B
- 3) C
- 4) D

**Correct Answer:** B**Candidate Answer:** B

Question 80. In the following questions, one part of the sentence may have an error. Find out which part of the sentence has an error and click the button corresponding to it. If the sentence is free from error, click the "No error" option.

Even if he was (A) / a God, (B) / I would not trust him. (C) / No error (D)

**Options:**

- 1) A
- 2) B
- 3) C
- 4) D

**Correct Answer:** A**Candidate Answer:** A

Question 81. In the following questions, one part of the sentence may have an error. Find out which part of the sentence has an error and click the button corresponding to it. If the sentence is free from error, click the "No error" option.

Indian women (A) / are good (B) / in cooking (C) / No error (D)

**Options:**

- 1) A
- 2) B
- 3) C
- 4) D

**Correct Answer:** C**Candidate Answer:** D

Question 82. The sentences given with blanks are to be filled with an appropriate word(s). Four alternatives are suggested for each question. For each question, choose the correct alternative and click the button corresponding to it.

Virginia Woolf's novels continue to receive rave \_\_\_\_\_ .

**Options:**

- 1) purviews
- 2) feed-back
- 3) reviews
- 4) previews

**Correct Answer:** reviews**Candidate Answer:** reviews

**Visit [www.qmaths.in](http://www.qmaths.in) for tons of free study materials and latest exam updates.**

Question 83. The sentences given with blanks are to be filled with an appropriate word(s). Four alternatives are suggested for each question. For each question, choose the correct alternative and click the button corresponding to it.

His \_\_\_\_\_ gambling will ruin him.

**Options:**

- 1) passion in
- 2) passion for
- 3) passion with
- 4) passion of

**Correct Answer:** passion for

**Candidate Answer:** passion for

Question 84. The sentences given with blanks are to be filled with an appropriate word(s). Four alternatives are suggested for each question. For each question, choose the correct alternative and click the button corresponding to it.

Fortune \_\_\_\_\_ him very often, such was his ill luck.

**Options:**

- 1) grinned at
- 2) imposed on
- 3) eluded
- 4) grasped at

**Correct Answer:** eluded

**Candidate Answer:** eluded

Question 85. In each of the questions, four alternatives are given for the Idiom/Phrase. Choose the alternative which best expresses the meaning of the Idiom/Phrase and click the button corresponding to it.

To lose ground

**Options:**

- 1) Becoming less acceptable
- 2) Being exploited
- 3) Fully rejected
- 4) Finding supporters

**Correct Answer:** Becoming less acceptable

**Candidate Answer:** Becoming less acceptable

Question 86. In each of the questions, four alternatives are given for the Idiom/Phrase. Choose the alternative which best expresses the meaning of the Idiom/Phrase and click the button corresponding to it.

Every dark cloud has a silver lining

**Options:**

- 1) Every unpleasant situation has to wait
- 2) Every unpleasant situation has a positive side
- 3) Every dark cloud is upsetting
- 4) Cloud with dark and silver lining is good

**Correct Answer:** Every unpleasant situation has a positive side

**Candidate Answer:** Every unpleasant situation has a positive side

Question 87. In each of the questions, four alternatives are given for the Idiom/Phrase. Choose the alternative which best expresses the meaning of the Idiom/Phrase and click the button corresponding to it.

Alive and kicking

**Options:**

- 1) Playing football
- 2) Dying
- 3) Becoming old
- 4) In good health

**Correct Answer:** In good health

**Candidate Answer:** In good health

Question 88. Out of the four alternatives, choose the one which can be substituted for the given words/sentences and click the button corresponding to it.

A large enclosure or building for keeping birds.

**Options:**

- 1) Aviary
- 2) Effrontery
- 3) Augury
- 4) Apiary

**Correct Answer:** Aviary

**Candidate Answer:** Aviary

**Visit [www.qmaths.in](http://www.qmaths.in) for tons of free study materials and latest exam updates.**



Question 89. Out of the four alternatives, choose the one which can be substituted for the given words/sentences and click the button corresponding to it.

Printed notice of somebody's death.

**Options:**

- 1) Mourning
- 2) Obituary
- 3) Condolence
- 4) Commiseration

**Correct Answer:** Obituary

**Candidate Answer:** Obituary

Question 90. Out of the four alternatives, choose the one which can be substituted for the given words/sentences and click the button corresponding to it.

One who is not easily pleased by anything.

**Options:**

- 1) Fanatic
- 2) Fatalistic
- 3) Fastidious
- 4) Neurotic

**Correct Answer:** Fastidious

**Candidate Answer:** Fastidious

Question 91. A sentence/a part of the sentence is underlined. Four alternatives are given to the underlined part which will improve the sentence. Choose the correct alternative and click the button corresponding to it. In case no improvement is needed, click the button corresponding to "No improvement".

Honestly, we did not play well in the final.

**Options:**

- 1) To speak honestly
- 2) To admit honestly
- 3) To be honest
- 4) No improvement

**Correct Answer:** To be honest

**Candidate Answer:** No improvement

Question 92. A sentence/a part of the sentence is underlined. Four alternatives are given to the underlined part which will improve the sentence. Choose the correct alternative and click the button corresponding to it. In case no improvement is needed, click the button corresponding to "No improvement".

I would like to familiarize with the latest teaching methods.

**Options:**

- 1) familiarize myself with
- 2) familiarize oneself with
- 3) familiarize yourself with
- 4) No improvement

**Correct Answer:** familiarize myself with

**Candidate Answer:** familiarize myself with

Question 93. A sentence/a part of the sentence is underlined. Four alternatives are given to the underlined part which will improve the sentence. Choose the correct alternative and click the button corresponding to it. In case no improvement is needed, click the button corresponding to "No improvement".

I shall either go home to India or my family will come to England.

**Options:**

- 1) Either I shall go home
- 2) I shall go either home
- 3) Either I go home
- 4) No improvement

**Correct Answer:** No improvement

**Candidate Answer:** Either I shall go home

Question 94. A sentence/a part of the sentence is underlined. Four alternatives are given to the underlined part which will improve the sentence. Choose the correct alternative and click the button corresponding to it. In case no improvement is needed, click the button corresponding to "No improvement".

He always exaggerates; so take what he says with a dash of salt.

**Options:**

- 1) a pinch of salt
- 2) lots of salt
- 3) a pint of salt
- 4) No improvement

**Correct Answer:** a pinch of salt

**Candidate Answer:** a pinch of salt

**Visit [www.qmaths.in](http://www.qmaths.in) for tons of free study materials and latest exam updates.**

Question 95. A sentence/a part of the sentence is underlined. Four alternatives are given to the underlined part which will improve the sentence. Choose the correct alternative and click the button corresponding to it. In case no improvement is needed, click the button corresponding to "No improvement".

Learning is an ever going process.

**Options:**

- 1) ongoing
- 2) ever continuing
- 3) ever constant
- 4) No improvement

**Correct Answer:** ongoing

**Candidate Answer:** No improvement

Question 96. A passage is given with 5 questions following it. Read the passage carefully and choose the best answer to each question out of the four alternatives and click the button corresponding to it.

Newspapers sell because of news and editorial coverage but it gets more revenue from advertisements. News costs money, while advertisements fetch money. The economics of modern newspapers is such that it cannot run by just selling news. It has to depend on advertisements. The economics of newspaper publishing requires both subscribers who can afford to buy newspapers and businessmen who can afford to advertise in it. The growth of the Press depends on both. Therefore, in newspaper management neither aspect can be neglected.

Co-ordination among the various departments - editorial, circulation, advertising and production - is very essential for effective and better management. The heads of various departments must be part of the management of a newspaper. They must be aware of the goals set, policies and future plans of the management. They cannot afford to remain cut off from the mainstream of management function. In addition, each department should keep the other department managers informed of those of its activities that will be useful to them. This is a vital aspect of newspaper management.

The growth of a newspaper depends on

**Options:**

- 1) the editorial and news coverage
- 2) large scale subscribers
- 3) advertisers
- 4) subscribers and advertisers

**Correct Answer:** subscribers and advertisers

**Candidate Answer:** subscribers and advertisers

Question 97. A passage is given with 5 questions following it. Read the passage carefully and choose the best answer to each question out of the four alternatives and click the button corresponding to it.

Newspapers sell because of news and editorial coverage but it gets more revenue from advertisements. News costs money, while advertisements fetch money. The economics of modern newspapers is such that it cannot run by just selling news. It has to depend on advertisements. The economics of newspaper publishing requires both subscribers who can afford to buy newspapers and businessmen who can afford to advertise in it. The growth of the Press depends on both. Therefore, in newspaper management neither aspect can be neglected.

Co-ordination among the various departments - editorial, circulation, advertising and production - is very essential for effective and better management. The heads of various departments must be part of the management of a newspaper. They must be aware of the goals set, policies and future plans of the management. They cannot afford to remain cut off from the mainstream of management function. In addition, each department should keep the other department managers informed of those of its activities that will be useful to them. This is a vital aspect of newspaper management.

The main idea conveyed in the first paragraph of the passage is

**Options:**

- 1) the growth of press
- 2) news and editorial coverage
- 3) the economics of newspaper publishing
- 4) the importance of advertisements

**Correct Answer:** the economics of newspaper publishing

**Candidate Answer:** the economics of newspaper publishing

Question 98. A passage is given with 5 questions following it. Read the passage carefully and choose the best answer to each question out of the four alternatives and click the button corresponding to it.

Newspapers sell because of news and editorial coverage but it gets more revenue from advertisements. News costs money, while advertisements fetch money. The economics of modern newspapers is such that it cannot run by just selling news. It has to depend on advertisements. The economics of newspaper publishing requires both subscribers who can afford to buy newspapers and businessmen who can afford to advertise in it. The growth of the Press depends on both. Therefore, in newspaper management neither aspect can be neglected.

Co-ordination among the various departments - editorial, circulation, advertising and production - is very essential for effective and better management. The heads of various departments must be part of the management of a newspaper. They must be aware of the goals set, policies and future plans of the management. They cannot afford to remain cut off from the mainstream of management function. In addition, each department should keep the other department managers informed of those of its activities that will be useful to them. This is a vital aspect of newspaper management.

The main idea conveyed in the second paragraph of the passage is

**Options:**

- 1) the role of the heads of departments of a newspaper
- 2) the future of newspapers
- 3) how to sell newspapers
- 4) effective sales

**Correct Answer:** the role of the heads of departments of a newspaper

**Candidate Answer:** the role of the heads of departments of a newspaper

**Visit [www.qmaths.in](http://www.qmaths.in) for tons of free study materials and latest exam updates.**

Question 99. A passage is given with 5 questions following it. Read the passage carefully and choose the best answer to each question out of the four alternatives and click the button corresponding to it.

Newspapers sell because of news and editorial coverage but it gets more revenue from advertisements. News costs money, while advertisements fetch money. The economics of modern newspapers is such that it cannot run by just selling news. It has to depend on advertisements. The economics of newspaper publishing requires both subscribers who can afford to buy newspapers and businessmen who can afford to advertise in it. The growth of the Press depends on both. Therefore, in newspaper management neither aspect can be neglected.

Co-ordination among the various departments - editorial, circulation, advertising and production - is very essential for effective and better management. The heads of various departments must be part of the management of a newspaper. They must be aware of the goals set, policies and future plans of the management. They cannot afford to remain cut off from the mainstream of management function. In addition, each department should keep the other department managers informed of those of its activities that will be useful to them. This is a vital aspect of newspaper management.

The word 'goal' in the passage means

**Options:**

- 1) conclusion
- 2) aim
- 3) result
- 4) benefit

**Correct Answer:** aim

**Candidate Answer:** aim

Question 100. A passage is given with 5 questions following it. Read the passage carefully and choose the best answer to each question out of the four alternatives and click the button corresponding to it.

Newspapers sell because of news and editorial coverage but it gets more revenue from advertisements. News costs money, while advertisements fetch money. The economics of modern newspapers is such that it cannot run by just selling news. It has to depend on advertisements. The economics of newspaper publishing requires both subscribers who can afford to buy newspapers and businessmen who can afford to advertise in it. The growth of the Press depends on both. Therefore, in newspaper management neither aspect can be neglected.

Co-ordination among the various departments - editorial, circulation, advertising and production - is very essential for effective and better management. The heads of various departments must be part of the management of a newspaper. They must be aware of the goals set, policies and future plans of the management. They cannot afford to remain cut off from the mainstream of management function. In addition, each department should keep the other department managers informed of those of its activities that will be useful to them. This is a vital aspect of newspaper management.

Which of the following statements is false?

**Options:**

- 1) Selling news is not important.
- 2) Editorial coverage matters for sales.
- 3) Advertisements are needed for a paper to survive.
- 4) All departments have to be in touch with other departments.

**Correct Answer:** Selling news is not important.

**Candidate Answer:** Selling news is not important.

[www.Qmaths.in](http://www.Qmaths.in)  
SSC | IBPS | RAILWAYS | LIC | SIDBI