



Staff Selection Commission
(Government Of India)

REGISTRATION NUMBER : qmaths.in
EXAM DATE : 9-September-2016 EXAM
NAME : SSC Examination 2016 TOTAL
MARKS : 200

CANDIDATE NAME :qmaths.in
EXAM START TIME : 13:15:00
EXAM DURATION : 01:15 Hrs
TOTAL NO OF QUESTIONS : 100

Question 1. Select the related word/letters/numbers from the given alternatives:

दिये गये विकल्पों में से संबंधित शब्द/अक्षरों/संख्या को चुनिए।

Length: Meter :: Power: ?

लम्बाई : मीटर :: विद्युत शक्ति : ?

Options:

1) Calories

केलोरी

2) Degree

डिग्री

3) Watt

वाट

4) Kilogram

किलोग्राम

Correct Answer: Watt

वाट

Candidate Answer: Watt

वाट

Question 2. Select the related word/letters/numbers from the given alternatives:

दिये गये विकल्पों में से संबंधित शब्द/अक्षरों/संख्या को चुनिए।

ZXVT:YWUS::RPNL:?

Options:

1) XVTS

2) TSQP

3) SQPM

4) QOMK

Correct Answer: QOMK

Candidate Answer: QOMK

Question 3. Select the related word/letters/numbers from the given alternatives:

दिये गये विकल्पों में से संबंधित शब्द/अक्षरों/संख्या को चुनिए।

42:20::64:?

Options:

1) 31

2) 32

3) 33

4) 34

Correct Answer: 31

Candidate Answer: 31

Question 4.

For the following questions

Find the odd words/letter/number from the given alternatives:

दिये गए विकल्पों में से शब्द/ अक्षर/ संख्या छांटिए ?

Options:

1) A

2) U

3) T

4) O

Correct Answer: T**Candidate Answer:** T

Question 5.

For the following questions

Find the odd words/letter/number from the given alternatives:

दिये गए विकल्पों में से शब्द/ अक्षर/ संख्या छांटिए ?

Options:

1) January

जनवरी

2) April

अप्रैल

3) July

जुलाई

4) May

मई

Correct Answer: April

अप्रैल

Candidate Answer: July

जुलाई

Question 6.

For the following questions

Find the odd words/letter/number from the given alternatives:

दिये गए विकल्पों में से शब्द/ अक्षर/ संख्या छांटिए ?

Options:

1) 28-21

2) 31-38

3) 45-52

4) 64-71

Correct Answer: 28-21**Candidate Answer:** 28-21

Question 7. Arrange the following words as per order in the dictionary:

निम्नलिखित शब्दों को शब्दकोश में दिए गए क्रम के अनुसार व्यवस्थित कीजिए।

1. Zeal 2. Zebra 3. Zygote 4. Zinc 5. Zest

Options:

1) 1,2,5,3,4

2) 1,2,5,4,3

3) 1,5,2,4,3

4) 1,5,2,3,4

Correct Answer: 1,2,5,4,3**Candidate Answer:** 1,2,5,4,3

Question 8. A series is given, with one term missing. Choose the correct alternative from the given ones that will complete the series:

एक अनुक्रम दिया गया है, जिसमें एक पद लुप्त है। दिए गए विकल्पों में से वह सही विकल्प चुनिए जो अनुक्रम को पूरा करें।

ALZ,CJV,EHR,GFN,?

Options:

1) JDJ

2) IEK

3) IDJ

4) JEK

Correct Answer: IDJ**Candidate Answer:** IDJ

Question 9. A series is given, with one term missing. Choose the correct alternative from the given ones that will complete the series:

एक अनुक्रम दिया गया है, जिसमें एक पद लुप्त है। दिए गए विकल्पों में से वह सही विकल्प चुनिए जो अनुक्रम को पूरा करें।

8, 24, 12, ?, 18, 54

Options:

1) 48

2) 36

3) 29

4) 21

Correct Answer: 36**Candidate Answer:** 36

Question 10. Chanda is the wife of Bharat. Mohan is the son of Chanda. Ashish is the brother of Bharat and father of Dhruv. How is Mohan related to Dhruv?

चन्दा, भरत की पत्नी है। मोहन चन्दा का पुत्र है। आशिष भरत का भाई और ध्रुव का पिता है। मोहन का ध्रुव से संबंध बताएं ?

Options:

1) Sister

बहन

2) Cousin

चचेरा भाई

3) Brother

भाई

4) Mother

माँ

Correct Answer: Cousin

चचेरा भाई

Candidate Answer: Cousin

चचेरा भाई

Question 11. A, B, C, D, E, F are sitting on the round table with equal distances. F is sitting opposite to E and between A and D. C is sitting right side of E and opposite to A. Who are the neighbours of A?

A, B, C, D, E, F परस्पर बराबर की दूरी पर गोल मेज पर बैठे हैं। F, E के ठीक सामने और A और D के बीच में बैठा है। C, E के दाहिनी ओर और A के ठीक सामने बैठा है। A के साथ कौन-कौन बैठा है ?

Options:

1) F and D

F और D

2) E and F

E and F

3) E and C

E और C

4) B and F

B और F

Correct Answer: B and F

B और F

Candidate Answer: B and F

B और F

Question 12. From the given alternative words, select the word which cannot be formed using the letters of the given word:

निम्नलिखित विकल्पों में से वह शब्द चुनिए जो दिए गए शब्द के अक्षरों का प्रयोग करके नहीं बनाया जा सकता :

CONCENTRATION

Options:

1) CONCERN

2) CONTAINER

3) CONCERT

4) CENTRAL

Correct Answer: CENTRAL**Candidate Answer:** CENTRAL

Question 13.If 'WZB' stands for 'DAY', how will 'MONDAY' be coded?

Downloaded from www.qmaths.in

यदि 'WZB' कोड है 'DAY' का, तो 'MONDAY' का कोड क्या होगा ?

Options:

- 1) NLMWZB
- 2) PLOWZB
- 3) NMLWZB
- 4) PQRWZB

Correct Answer: NLMWZB

Candidate Answer: NLMWZB

Question 14.If '+' means '/', '/' means '-', '-' means 'x', 'x' means '+', then $24+8/2-6x6=?$

यदि '+' से आशय '/' से हो, '/' से आशय '-' से हो, '-' से आशय 'x' से हो, 'x' से आशय '+' से हो, तो $24+8/2-6x6=?$

Options:

- 1) -10
- 2) -3
- 3) 12
- 4) 21

Correct Answer: -3

Candidate Answer: -3

Question 15.In this question, some equations are solved on the basis of a certain system. On the same basis find out the correct answer from amongst the four alternatives for the unsolved equation.

कुछ समीकरण एक निश्चित प्रणाली से हल किए गए हैं। उसी आधार पर दिए गए विकल्पों में से सही उत्तर चुनकर लिखिए ?

$$7 \times 6 \times 8 = 678$$

$$8 \times 9 \times 7 = 987$$

$$6 \times 5 \times 7 = 567$$

$$5 \times 4 \times 6 = ?$$

Options:

- 1) 456
- 2) 564
- 3) 645
- 4) 654

Correct Answer: 456

Candidate Answer: 456

Question 16.Select the missing number from the given alternatives:

दिये गए विकल्पों में से संख्या ज्ञात कीजिए ?

7	9	8
8	9	?
4	9	6
60	90	70

Options:

- 1) 9
- 2) 8
- 3) 7
- 4) 6

Correct Answer: 8

Candidate Answer: 8

Question 17.A man starts from a point, walks 5 km towards East, turns right and walks 3 km, turns right again and walks. What is the direction he is facing now?

कोई व्यक्ति किसी बिंदू से चलना आरंभ करके पूर्व की ओर 5 कि.मी. चलता है, फिर दाएं मुड़कर 3 कि.मी. चलता है, पुनः दाहिने मुड़कर फिर चलता है। अब उसके मुख के सामने कौनसी दिशा है ?

Options:

- 1) North
उत्तर
- 2) South
दक्षिण
- 3) West
पश्चिम
- 4) South-west
दक्षिण-पश्चिम

Correct Answer: West
पश्चिम

Candidate Answer: West
पश्चिम

Question 18. Consider the given statement/s to be true and decide which of the given conclusions/assumptions can definitely be drawn from the given statement.

Statement 1: All animals are four-footed.

2. Dog has two legs.

Conclusion I: Dog is not an animal.

II. Dog is an animal.

निम्नलिखित प्रश्न में एक या दो वक्तव्य दिये गये हैं, जिसके आगे दो निष्कर्ष/मान्यताएं, I और II निकाले गये हैं। आपको विचार करना है कि वक्तव्य सत्य है चाहे वह सामान्यतः तथ्यों से भिन्न प्रतीत होता हो। आपको निर्णय करना है कि दिए गए वक्तव्य में से कौन-सा निश्चित रूप से सही निष्कर्ष/मान्यता निकाला जा सकता है ?

कथन I: सभी जानवरों की चार टांगें होती हैं।

II. कुत्ते की दो टांगें होती हैं।

निष्कर्ष 1. कुत्ता जानवर नहीं है।

2. कुत्ता जानवर है।

Options:

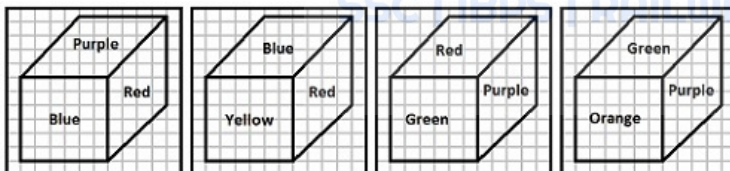
- 1) If only I follows
केवल I सही है
- 2) If only II follows
केवल II सही है
- 3) If neither I nor II follows
न I सही है न II
- 4) If both I and II follow
I और II दोनों सही हैं

Correct Answer: If only I follows
केवल I सही है

Candidate Answer: If only I follows
केवल I सही है

Question 19. In the give cubes, which colour is opposite to purple?

बैंगनी के सामने कौनसा रंग है ?

**Options:**

- 1) Violet
- 2) Red
- 3) Yellow
- 4) Blue

Correct Answer: Yellow

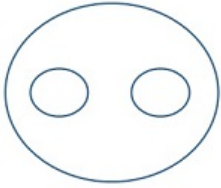
Candidate Answer: Yellow

Question 20. Which of the following diagrams correctly represents elephants, wolves, animals?

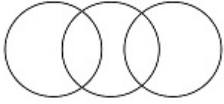
निम्नलिखित में से कौनसा आरेख हाथियों, भेड़ियों, जानवरों का सही-सही निरूपण करता है ?

Options:

1)



2)



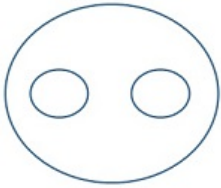
3)



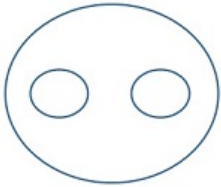
4)



Correct Answer:

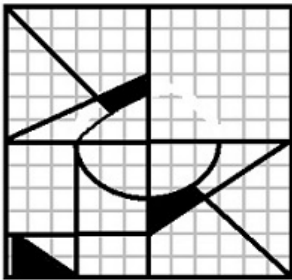
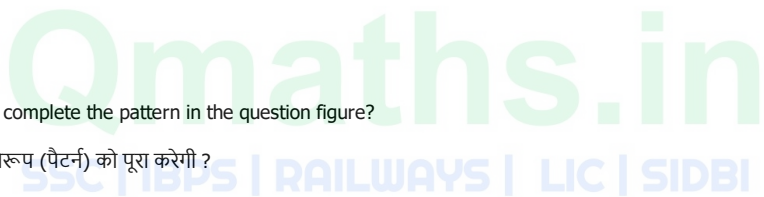


Candidate Answer:



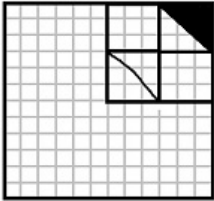
Question 21. which answer figure will complete the pattern in the question figure?

कौन-सी उत्तर-आकृति प्रश्न-आकृति के प्रतिरूप (पैटर्न) को पूरा करेगी ?

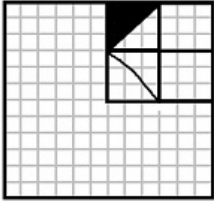


Options:

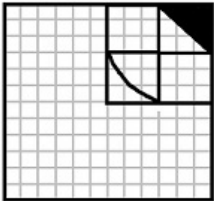
1)



2)



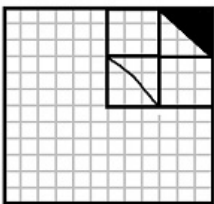
3)



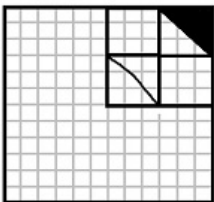
4)



Correct Answer:



Candidate Answer:



Qmaths.in
SSC | IBPS | RAILWAYS | LIC | SIDBI

Question 22. From the given answer figures, select the one in which the question figure is hidden/embedded.

दी गई उत्तर आकृतियों में से उस आकृति को चुनिए जिसमें प्रश्न आकृति निहित है।

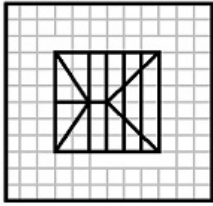


Options:

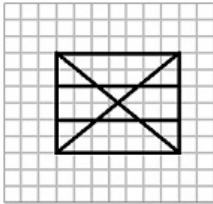
1)



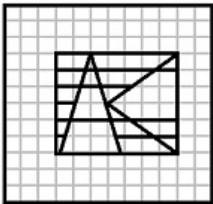
2)



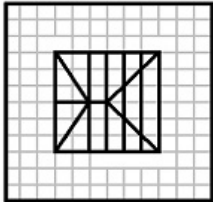
3)



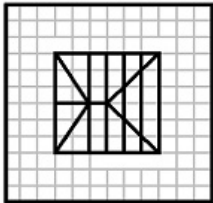
4)



Correct Answer:



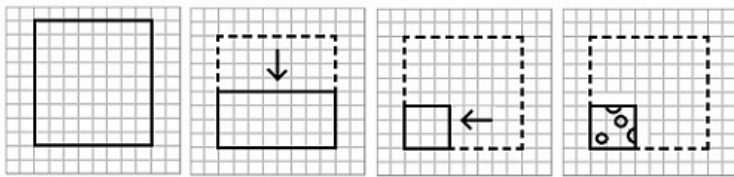
Candidate Answer:



Qmaths.in
SSC | IBPS | RAILWAYS | LIC | SIDBI

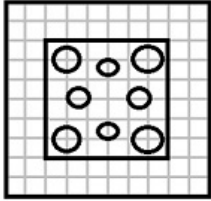
Question 23. A piece of paper is folded and cut as shown below in the question figures. From the given answer figures, indicate how it will appear when opened.

नीचे प्रश्न आकृतियों में दिखाए अनुसार कागज को मोड़कर काटने तथा खोलने के बाद वह किस उत्तर आकृति जैसा दिखाई देगा ?

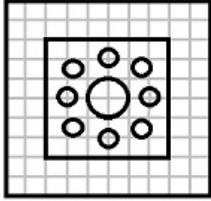


Options:

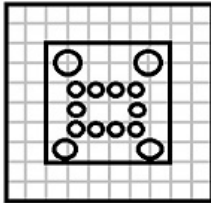
1)



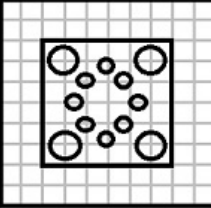
2)



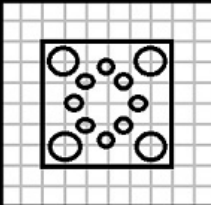
3)



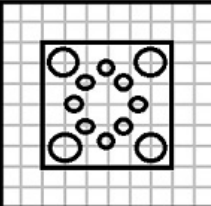
4)



Correct Answer:




Candidate Answer:



Qmaths.in
SSC | IBPS | RAILWAYS | LIC | SIDBI

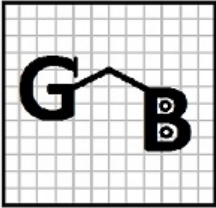
Question 24.If a mirror is placed on the line MN, then which of the answer figures is the right image of the given figure?

यदि एक दर्पण को MN रेखा पर रखा जाए तो दी गई उत्तर आकृतियों में से कौनसी आकृति प्रश्न आकृति का सही प्रतिबिम्ब होगी ?




Options:

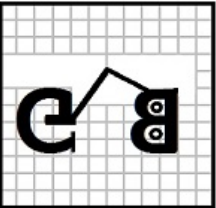
1)



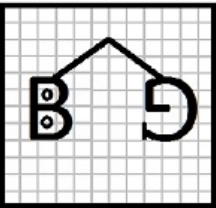
2)



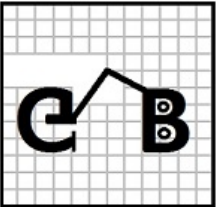
3)



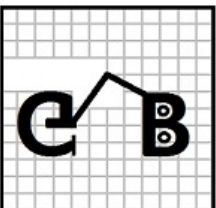
4)



Correct Answer:



Candidate Answer:



Qmaths.in
SSC | IBPS | RAILWAYS | LIC | SIDBI

Question 25. In the question, a word is represented by two classes of alphabets as in two matrices given below. The columns and rows of Matrix I are numbered from 0 to 4 and that of Matrix II are numbered from 5 to 9. A letter from these matrices can be represented first by its row and next by its column, e.g., 'A' can be represented by 01, 13, etc., and 'S' can be represented by 55, 66, etc. Similarly you have to identify the set for the word 'BOTH'

निम्नलिखित प्रश्न में विकल्पों में दिए गए संख्या-समूह, अक्षरों के दो वर्गों द्वारा दर्शाए गए हैं, जैसे कि नीचे दिए गए दो आव्यूहों में हैं। आव्यूह I के सतम्भ और पंक्ति की संख्या 0 से 4 तक दी गई है, और आव्यूह II के 5 से 9 तक, इन आव्यूहों से एक अक्षर को पहले उसकी पंक्ति और बाद में सतम्भ संख्या द्वारा दर्शाया जा सकता है। इन आव्यूहों से एक अक्षर को पहले उसकी पंक्ती और बाद में सतम्भ संख्या द्वारा दर्शाया जा सकता है। उदाहरण के लिए 'A' को 01, 13 आदि द्वारा दर्शाया जा सकता है तथा 'S' को 55, 66 आदि द्वारा दर्शाया जा सकता है। इसी तरह से आपको दिए हुए शब्द 'BOTH' के लिए समूह को पहचानना है।

MATRIX I

	0	1	2	3	4
0	F	A	N	O	I
1	I	O	F	A	N
2	A	N	O	I	F
3	O	F	I	N	A
4	N	I	A	F	O

MATRIX II

	5	6	7	8	9
5	S	E	H	B	T
6	H	S	E	T	B
7	B	T	S	E	H
8	E	H	T	B	S
9	T	S	E	H	B

Options:

1) 69,67,68,59

2) 75,22,76,79

3) 88,30,85,86

4) 58,02,68,65

Correct Answer: 75,22,76,79

Candidate Answer: 75,22,76,79

Question 26. A 'Market Economy' is one which

' बाजार अर्थव्यवस्था ' वह होती है जो -

Options:

1) is controlled by the Government

सरकार द्वारा नियंत्रित हो

2) is free from the Government control

सरकारी नियंत्रण से मुक्त हो

3) is influenced by international market forces

अन्तर्राष्ट्रीय बाजार की शक्तियों से प्रभावित हो

4) All of these

सभी सही हैं

Correct Answer: is free from the Government control

सरकारी नियंत्रण से मुक्त हो

Candidate Answer: in influenced by international market forces

अन्तर्राष्ट्रीय बाजार की शक्तियों से प्रभावित हो

Question 27. The novelist, poet and critic of which language has been conferred with Jnanpith Award for 2015?

वर्ष 2015 का ज्ञानपीठ पुरस्कार कौन-सी भाषा के उपन्यासकार, कवि और आलोचक को दिया गया है ?

Options:

1) Bengali

बांग्ला

2) Telugu

तेलुगु

3) Odia

उड़िया

4) Gujarati

गुजराती

Correct Answer: Gujarati

गुजराती

Candidate Answer: Gujarati

गुजराती

Question 28. The 'Cabinet Mission' of 1946 was led by

1946 के ' कैबिनेट मिशन ' का नेतृत्व किसके द्वारा किया गया ?

Options:

1) Lord Linlithgow

लॉर्ड लिनलिथगो

2) Lord Mountbatten

लॉर्ड माउन्टबैटन

3) Sir Pethic Lawrence

सर पैथिक लॉरेन्स

4) Sir Mountford

सर माउन्टफोर्ड

Correct Answer: Sir Pethic Lawrence

सर पैथिक लॉरेन्स

Candidate Answer: Sir Pethic Lawrence सर पैथिक लॉरेन्स

Downloaded from www.qmaths.in

Question 29. Mount Abu is a hill station located in _____ ranges.

माउन्ट आबू, जो एक पर्वतीय स्थल है, कौन सी पर्वत श्रृंखला पर स्थित है ?

Options:

- 1) Vindhya
विन्ध्या
- 2) Satpuda
सतपुड़ा
- 3) Aravalli
अरावली
- 4) Sahyadri
सहयाद्री

Correct Answer: Aravalli
अरावली

Candidate Answer: Aravalli
अरावली

Question 30. The only perennial river in Peninsular India is _____ .

प्रायद्वीपीय भारत की एकमात्र बारहमासी नदी कौन-सी है ?

Options:

- 1) Godavari
गोदावरी
- 2) Kaveri
कावेरी
- 3) Krishna
कृष्णा
- 4) Bhima
भीमा

Correct Answer: Kaveri
कावेरी

Candidate Answer: Kaveri
कावेरी

Question 31. Which one of the following forms the base of vegetable fibres?

निम्न में से कौन वनस्पति फाइबर का आधार है ?

Options:

- 1) Cellulose
सेलुलोज
- 2) Proteins
प्रोटीन
- 3) Fats
वसा
- 4) Oils
तेल

Correct Answer: Cellulose
सेलुलोज

Candidate Answer: Cellulose
सेलुलोज

Question 32. A particle is thrown vertically upward. When it reaches the highest point, it has _____

जब किसी कण को ऊर्ध्वाधर ऊपर की ओर फेंका जाता है और जब वह सबसे ऊँचे बिन्दु तक पहुँच जाता है तो उसका _____

Options:

- 1) a downward acceleration
त्वरण नीचे की ओर होता है
- 2) an upward acceleration
त्वरण उपर की ओर होता है
- 3) a downward velocity
वेग नीचे की ओर होता है
- 4) a horizontal velocity
वेग क्षैतिज होता है

Correct Answer: a downward acceleration
त्वरण नीचे की ओर होता है

Candidate Answer: an upward acceleration
त्वरण उपर की ओर होता है

Question 33. CPU Scheduler is also known as _____ .

सी.पी.यू. शिड्यूलर को और किस नाम से जाना जाता है ?

Options:

- 1) Job Scheduler
जॉब शिड्यूलर
- 2) Resource Scheduler
रिसोर्स शिड्यूलर
- 3) Short-term Scheduler
शार्ट-टर्म शिड्यूलर
- 4) Process Scheduler
प्रोसेस शिड्यूलर

Correct Answer: Short-term Scheduler
शार्ट-टर्म शिड्यूलर

Candidate Answer: Process Scheduler
प्रोसेस शिड्यूलर

Question 34. During fermentation of sugar, the compound which is always formed is

शक्कर के किण्वन के दौरान कौन-सा यौगिक हमेशा बनता है ?

Options:

- 1) Methyl Alcohol
मेथिल ऐल्कोहल
- 2) Ethyl Alcohol
इथाइल ऐल्कोहल
- 3) Acetic Acid
एसीटिक अम्ल
- 4) Ethylene
एथिलीन

Correct Answer: Ethyl Alcohol
इथाइल ऐल्कोहल

Candidate Answer: Methyl Alcohol
मेथिल ऐल्कोहल

Question 35. Which type of democracy do we follow in India?

भारत में किस प्रकार का लोकतन्त्र है ?

Options:

- 1) Direct
प्रत्यक्ष
- 2) Presidential
राष्ट्रपति का
- 3) Representative
प्रतिनिधियों का
- 4) Dictatorship
तानाशाही

Correct Answer: Representative
प्रतिनिधियों का

Candidate Answer: Representative
प्रतिनिधियों का

Question 36. Social activist Irom Chanu Sharmila, who has recently announced to end 16-year old hunger strike belongs to which State ?

सामाजिक कार्यकर्ता इरोम चानु शर्मिला, जिन्होंने हाल ही में अपनी 16 वर्ष पुरानी भूख हड़ताल खत्म की, कौन-से राज्य की है ?

Options:

- 1) Mizoram
मिज़ोरम
- 2) Manipur
मणिपुर
- 3) Uttar Pradesh
उत्तर प्रदेश
- 4) Maharashtra
महाराष्ट्र

Correct Answer: Manipur
मणिपुर

Candidate Answer: Manipur
मणिपुर

Question 37. The quality or tone of a musical sound produced by a stringed instrument depends on

किसी तार वाले वाद्य यन्त्र से पैदा हुई संगीत की ध्वनि की गुणवत्ता किस पर निर्भर करती है ?

Options:

- 1) frequency of vibration
कंपन की आवृत्ति
- 2) length of the strings in the instrument
वाद्य यन्त्र में तारों की लम्बाई
- 3) Amplitude of vibration
कंपन का आयाम
- 4) waveform of the sound
ध्वनि की तरंग का रूप

Correct Answer: waveform of the sound
ध्वनि की तरंग का रूप

Candidate Answer: frequency of vibration
कंपन की आवृत्ति

Downloaded from www.qmaths.in

Question 38. What did Gandhiji mean by 'Sarvodaya'?

गाँधीजी का ' सर्वोदय ' से क्या तात्पर्य था ?

Options:

1) Non-violence

अहिंसा

2) Upliftment of untouchables or dalits

अछूतों और दलितों का उत्थान

3) The birth of a new society based on ethical values

नैतिक मूल्यों पर आधारित एक नए समाज का सृजन

4) Satyagraha

सत्याग्रह

Correct Answer: The birth of a new society based on ethical values

नैतिक मूल्यों पर आधारित एक नए समाज का सृजन

Candidate Answer: Upliftment of untouchables or dalits

अछूतों और दलितों का उत्थान

Question 39. When does solar eclipse take place ?

सूर्यग्रहण कब होता है ?

Options:

1) When the sun is between the moon and earth

जब सूर्य, चन्द्रमा और पृथ्वी के बीच होता है

2) When the earth is between the moon and sun

जब पृथ्वी, चन्द्रमा और सूर्य के बीच होती है

3) When the moon is between the sun and earth

जब चन्द्रमा, सूर्य और पृथ्वी के बीच में होता है

4) When the moon does not lie on the line joining the sun and earth

जब चन्द्रमा, सूर्य और पृथ्वी को जोड़ने वाली रेखा पर नहीं होता है

Correct Answer: When the moon is between the sun and earth

जब चन्द्रमा, सूर्य और पृथ्वी के बीच में होता है

Candidate Answer: When the moon is between the sun and earth

जब चन्द्रमा, सूर्य और पृथ्वी के बीच में होता है

Question 40. Strait of Gibraltar connects which of the following?

गिब्राल्टर जलडमरूमध्य किन को जोड़ता है ?

Options:

1) Red Sea - Mediterranean Sea

लाल सागर - भूमध्य सागर

2) Red Sea - Arabian Sea

लाल सागर - अरब सागर

3) Atlantic Ocean - Mediterranean Sea

एटलाण्टिक महासागर - भूमध्य सागर

4) Mediterranean Sea - Black Sea

भूमध्य सागर - काला सागर

Correct Answer: Atlantic Ocean - Mediterranean Sea

एटलाण्टिक महासागर - भूमध्य सागर

Candidate Answer: Atlantic Ocean - Mediterranean Sea

एटलाण्टिक महासागर - भूमध्य सागर

Question 41. The largest solar power plant in India is located at

भारत के सबसे बड़ा सौर शक्ति संयंत्र कहाँ स्थित है ?

Options:

1) Nagercoil

नागर कॉयल

2) Jaisalmer

जयसलमेर

3) Madhapur

माधापुर

4) Rann of Kutch

कच्छ का रण

Correct Answer: Madhapur

माधापुर

Candidate Answer: Nagercoil

नागर कॉयल

Question 42. Regional Rural Banks are sponsored by

क्षेत्रीय ग्रामीण बैंक किसके द्वारा प्रायोजित होते हैं ?

Options:

- 1) Nationalised Commercial Bank
राष्ट्रीयकृत वाणिज्यिक बैंक
- 2) Reserve Bank of India
भारतीय रिजर्व बैंक
- 3) State Bank of India
स्टेट बैंक ऑफ इण्डिया
- 4) Government of India
भारत सरकार

Correct Answer: Nationalised Commercial Bank
राष्ट्रीयकृत वाणिज्यिक बैंक

Candidate Answer: Reserve Bank of India
भारतीय रिजर्व बैंक

Question 43. Removal of carbon particles from air involves the principle of

वायु में से कार्बन के कण निकालने के लिए कौन-से सिद्धान्त का प्रयोग किया जाता है ?

Options:

- 1) Precipitation
वर्षण
- 2) Filtration
निस्पंदन
- 3) Electrophoresis
वैद्युत कण संचालन
- 4) Sedimentation
अवसादन

Correct Answer: Electrophoresis
वैद्युत कण संचालन

Candidate Answer: Electrophoresis
वैद्युत कण संचालन

Question 44. Which light is least effective in photosynthesis?

प्रकाश-संश्लेषण में कौन-सा प्रकाश सबसे कम प्रभावी है ?

Options:

- 1) Blue light
नीला प्रकाश
- 2) Green light
हरा प्रकाश
- 3) Red light
लाल प्रकाश
- 4) Sunlight
सूर्य का प्रकाश

Correct Answer: Green light
हरा प्रकाश

Candidate Answer: Green light
हरा प्रकाश

Question 45. Which of the following acts as best adsorbent?

निम्नलिखित में से कौन-सा सबसे अच्छा अधिशोषक है ?

Options:

- 1) Charcoal
काष्ठ कोयला
- 2) Activated Charcoal
सक्रियित काष्ठ कोयला
- 3) Activated Coconut Charcoal
सक्रियित नारियल काष्ठ कोयला
- 4) Carbon black
कार्बन कज्जल

Correct Answer: Activated Coconut Charcoal
सक्रियित नारियल काष्ठ कोयला

Candidate Answer: Carbon black
कार्बन कज्जल

Question 46. The maximum fixation of solar energy is done by

सौर ऊर्जा का अधिकतम यौगिकीकरण किसके द्वारा होता है ?

Options:

- 1) Bacteria
बैक्टीरिया
- 2) Protozoa
प्रोटोजोआ
- 3) Fungi
फंजाई
- 4) Green plants
हरे पौधे

Correct Answer: Green plants
हरे पौधे

Candidate Answer: Green plants
हरे पौधे

Downloaded from www.qmaths.in

Question 47. Harsha moved his capital from _____ to _____ .

राजा हर्ष ने अपनी राजधानी _____ से _____ स्थानान्तरित की थी।

Options:

- 1) Thanesar , Kanauj
थानेसर, कन्नौज
- 2) Delhi , Deogiri
दिल्ली, देवगिरी
- 3) Kamboj , Kanauj
कम्बोज, कन्नौज
- 4) Valabhi , Delhi
वालाभी, दिल्ली

Correct Answer: Thanesar , Kanauj
थानेसर, कन्नौज

Candidate Answer: [NOT ANSWERED]

Question 48. Who is the Chief Economic Advisor to the Government of India?

भारत सरकार के मुख्य आर्थिक सलाहकार कौन है ?

Options:

- 1) Raghu Ram Rajan
रघुराम राजन
- 2) Arvind Subramanian
अरविन्द सुब्रह्मण्यन
- 3) Rajiv Mahirishi
राजीव महर्षि
- 4) Arvind Pangariya
अरविन्द पनगरिया

Correct Answer: Arvind Subramanian
अरविन्द सुब्रह्मण्यन

Candidate Answer: Arvind Subramanian
अरविन्द सुब्रह्मण्यन

Question 49. Which type of foreign investment is considered as unsafe?

किस प्रकार का विदेशी प्रत्यक्ष निवेश असुरक्षित माना जाता है ?

Options:

- 1) Foreign Direct Investment (FDI)
विदेशी प्रत्यक्ष निवेश

(एफ.डी.आई)

- 2) Portfolio investment
पोर्टफोलियो निवेश
- 3) NRI deposits
एन. आर. आई. जमा
- 4) External commercial borrowing
बाहरी वाणिज्यिक उधार

Correct Answer: Portfolio investment
पोर्टफोलियो निवेश

Candidate Answer: Portfolio investment
पोर्टफोलियो निवेश

Question 50. The Chairman of the Drafting Committee of the Constituent Assembly of India was

भारत की संविधान सभा की प्रारूप समिति के अध्यक्ष कौन थे ?

Options:

- 1) K.M. Munshi
के. एम. मुंशी
- 2) D.P. Khaitan
डी. पी. खेतन
- 3) Dr. B.R. Ambedkar
डॉ. बी. आर. अम्बेडकर
- 4) T.T. Krishnamachari
टी. टी. कृष्णमाचारी

Correct Answer: Dr. B.R. Ambedkar
डॉ. बी. आर. अम्बेडकर

Candidate Answer: Dr. B.R. Ambedkar
डॉ. बी. आर. अम्बेडकर

Question 51. A can do 1/3rd of a work in 5 days and B can do 2/5th of this work in 10 days. Both A and B, together can do the work in

A किसी काम का 1/3 भाग 5 दिन में कर सकता है और B उसी काम का 2/5 भाग 10 दिन में कर सकता है। A और B दोनों साथ में उस काम को कितने दिन में कर सकते हैं ?

Options:

1)

 $7\frac{3}{8}$ days $7\frac{3}{8}$ दिन

2)

 $8\frac{4}{5}$ days $8\frac{4}{5}$ दिन

3)

 $9\frac{3}{8}$ days $9\frac{3}{8}$ दिन

4) 10 days

10 दिन

Correct Answer: $9\frac{3}{8}$ days $9\frac{3}{8}$ दिन**Candidate Answer:** [NOT ANSWERED]

Question 52. The base area of a right pyramid is 57 sq. units and height is 10 units. Then the volume of the pyramid is

एक लम्ब पिरामिड के तल का क्षेत्रफल 57 वर्ग यूनिट है और ऊँचाई 10 यूनिट है। पिरामिड का आयतन कितना है ?

Options:

1) 190 c. units

190 घन यूनिट

2) 380 c. units

380 घन यूनिट

3) 540 c. units

540 घन यूनिट

4) 570 c. units

570 घन यूनिट

Correct Answer: 190 c. units

190 घन यूनिट

Candidate Answer: [NOT ANSWERED]

Question 53. The marked price of a ceiling fan is Rs. 1200 and the shopkeeper allows a discount of 5 % on it. Then selling price of the fan is

किसी पंखे का अंकित मूल्य Rs. 1200 है और दुकानदार उस पर 5% की छूट देता है। पंखे का बिक्री मूल्य कितना है ?

Options:

1) Rs. 1410

2) Rs. 1400

3) Rs. 1140

4) Rs. 1104

Correct Answer: Rs. 1140**Candidate Answer:** Rs. 1140

Question 54. If 35% of A's income is equal to 25% of B's income, then the ratio of A's income to B's income is

यदि A की 35% आय B की 25% आय के बराबर हो, तो A और B की आय का अनुपात क्या है ?

Options:

1) 7:5

2) 5:7

3) 4:7

4) 4:3

Correct Answer: 5:7**Candidate Answer:** [NOT ANSWERED]

Question 55. A and B invest Rs. 3000 and Rs. 2400 respectively in a business. If after one year there is a loss of Rs. 720, how much loss will B bear? (Loss or Profit is in proportion to their investments)

A और B किसी कारोबार में क्रमशः Rs. 3000 और Rs. 2400 का निवेश करते हैं। यदि एक वर्ष बाद Rs. 720 की हानि होती है, तो B को कितनी हानि होगी ? (हानि या लाभ उनके निवेश के अनुपात में है)

Options:

- 1) Rs. 72
- 2) Rs. 320
- 3) Rs..400
- 4) Rs. 360

Correct Answer: Rs. 320**Candidate Answer:** [NOT ANSWERED]

Question 56.

$$6\frac{1}{4}\% \text{ of } 1600 + 12\frac{1}{2}\% \text{ of } 800 \text{ equals}$$

$$6\frac{1}{4}\% \text{ of } 1600 + 12\frac{1}{2}\% \text{ of } 800 \text{ किसके बराबर है?}$$

Options:

- 1) 100
- 2) 200
- 3) 300
- 4) 400

Correct Answer: 200**Candidate Answer:** 300

Question 57. At an average of 80 km/hr Shatabdi Express reaches Ranchi from Kolkata in 7 hrs. Then the distance between Kolkata and Ranchi is

80 कि.मी./घण्टा की औसत गति से शताब्दी एक्सप्रेस कोलकाता से राँची 7 घण्टे में पहुँचती है, तो कोलकाता और राँची के बीच कितनी दूरी है ?

Options:

- 1) 560 Km
560 कि.मी.
- 2) 506 Km
506 कि.मी.
- 3) 560 m
560 मी.
- 4) 650 m
650 मी.

Correct Answer: 560 Km

560 कि.मी.

Candidate Answer: 560 m

560 मी.

Question 58. If $a^3 - b^3 = 56$ and $a - b = 2$ then what is the value of $a^2 + b^2$?यदि $a^3 - b^3 = 56$ और $a - b = 2$ हो, तो $a^2 + b^2$ का मान क्या होगा ?**Options:**

- 1) 12
- 2) 20
- 3) 28
- 4) 32

Correct Answer: 20**Candidate Answer:** [NOT ANSWERED]

Question 59.

$$\text{If } x^2 - 3x + 1 = 0, (x \neq 0), \text{ then the value of } x + \frac{1}{x} \text{ is}$$

$$\text{यदि } x^2 - 3x + 1 = 0, (x \neq 0), \text{ तो } x + \frac{1}{x} \text{ का मान क्या है?}$$

Options:

- 1) 1
- 2) 0
- 3) 3
- 4) 2

Correct Answer: 3**Candidate Answer:** [NOT ANSWERED]

Question 60. X and Y are the mid points of sides AB and AC of a triangle ABC. If $BC+XY=12$ units, then $BC-XY$ is

X और Y त्रिभुज ABC की भुजाएँ AB और AC के मध्य बिन्दु है। यदि $BC+XY = 12$ यूनिट हो, तो $BC-XY$ कितने यूनिट है ?

Options:

- 1) 8 units
8 यूनिट्स
- 2) 4 units
4 यूनिट्स
- 3) 6 units
6 यूनिट्स
- 4) 2 units
2 यूनिट्स

Correct Answer: 4 units

4 यूनिट्स

Candidate Answer: [NOT ANSWERED]

Question 61. The length of the base of an isosceles triangle is $2x-2y+4z$, and its perimeter is $4x-2y+6z$. Then the length of each of the equal sides is

यदि एक समद्विबाहु त्रिभुज के आधार की लम्बाई $2x-2y+4z$ हो और उसका परिमाप $4x-2y+6z$ हो, तो प्रत्येक समभुजा की लम्बाई कितनी होगी ?

Options:

- 1) $x+y$
- 2) $x+y+z$
- 3) $2(x+y)$
- 4) $x+z$

Correct Answer: $x+z$

Candidate Answer: [NOT ANSWERED]

Question 62.

If $\theta > 0$, be an acute angle, then the value of θ in degrees satisfying

$$\frac{\cos^2\theta - 3\cos\theta + 2}{\sin^2\theta} = 1 \text{ is}$$

यदि $\theta > 0$, एक न्यून कोण है, तो $\frac{\cos^2\theta - 3\cos\theta + 2}{\sin^2\theta} = 1$ को करने वाले θ का मान कितने डिग्री का है?

Options:

- 1) 90°
- 2) 30°
- 3) 45°
- 4) 60°

Correct Answer: 60°

Candidate Answer: [NOT ANSWERED]

Question 63.

If the numbers $\sqrt[3]{9}$, $\sqrt[4]{20}$, $\sqrt[6]{25}$

are arranged in ascending order, then the right arrangement is

यदि संख्याओं $\sqrt[3]{9}$, $\sqrt[4]{20}$, $\sqrt[6]{25}$, को आरोहि क्रम में रख जाता है, तो सही व्यवस्था क्या होगी?

Options:

1) $\sqrt[6]{25} < \sqrt[4]{20} < \sqrt[3]{9}$

2) $\sqrt[3]{9} < \sqrt[4]{20} < \sqrt[6]{25}$

3) $\sqrt[4]{20} < \sqrt[6]{25} < \sqrt[3]{9}$

4) $\sqrt[6]{25} < \sqrt[3]{9} < \sqrt[4]{20}$

Correct Answer:

$$\sqrt[4]{25} < \sqrt[3]{9} < \sqrt[4]{20}$$

Candidate Answer: [NOT ANSWERED]

Question 64. Visitors to a show were charged Rs. 15 each on the first day, Rs. 7.50 on the second day, Rs. 2.50 on the third day and total attendance on three days were in the ratio 2:5:13 respectively. The average charge per person for the entire three days is

एक शो के दर्शकों से पहले दिन प्रति व्यक्ति Rs. 15, दूसरे दिन प्रति व्यक्ति Rs. 7.50, तीसरे दिन Rs. 2.50 वसूल किए गये और तीन दिनों की कुल उपस्थिति क्रमशः 2:5:13 के अनुपात में थी। पूरे तीन दिनों के लिए प्रति व्यक्ति औसत वसूली कितने रूपये थी ?

Options:

- 1) Rs. 5
- 2) Rs. 5.50
- 3) Rs. 6
- 4) Rs. 7

Correct Answer: Rs. 5**Candidate Answer:** [NOT ANSWERED]

Question 65.

If $\frac{2+a}{a} + \frac{2+b}{b} + \frac{2+c}{c} = 4$, then the value of

$$\frac{ab+bc+ca}{abc}$$
 is

यदि $\frac{2+a}{a} + \frac{2+b}{b} + \frac{2+c}{c} = 4$, तो $\frac{ab+bc+ca}{abc}$ का मान क्या है?

Options:

- 1) 2
- 2) 1
- 3) 0
- 4) $\frac{1}{2}$

Correct Answer: $\frac{1}{2}$ **Candidate Answer:** [NOT ANSWERED]

Question 66.

If $x + y + z = 1$, $\frac{1}{x} + \frac{1}{y} + \frac{1}{z} = 1$ and $xyz = -1$, then

$$x^3 + y^3 + z^3$$
 is equal to

यदि $x + y + z = 1$, $\frac{1}{x} + \frac{1}{y} + \frac{1}{z} = 1$ और $xyz = -1$, तो $x^3 + y^3 + z^3$ का मान क्या है?

Options:

- 1) -1
- 2) 1
- 3) -2
- 4) 2

Correct Answer: 1**Candidate Answer:** [NOT ANSWERED]

Question 67. In ΔPQR , L and M are two points on the sides PQ and PR respectively such that $LM \parallel QR$. If $PL=2\text{cm}$; $LQ=6\text{cm}$ and $PM=1.5\text{ cm}$, then MR in cm is

In ΔPQR में L और M भुजाएँ PQ और PR पर क्रमशः दो बिंदु इस प्रकार हैं कि $LM \parallel QR$ है। यदि $PL=2$ से.मी., $LQ=6$ से.मी. और $PM=1.5$ से.मी. हो तो MR कितने से.मी. होगा ?

Options:

- 1) 0.5
- 2) 4.5
- 3) 9
- 4) 8

Correct Answer: 4.5**Candidate Answer:** [NOT ANSWERED]

Question 68. The length of the radius of a circle is 5 cm and the length of the chord AB is 6 cm. The distance of the chord AB from the point O is

O केन्द्र वाले वृत्त की त्रिज्या की लम्बाई 5 से.मी. है और जीवा AB की लम्बाई 6 से.मी. है। जीवा AB की O से दूरी कितनी है ?

Options:

- 1) 2 cm
- 2 से.मी
- 2) 3 cm
- 3 से.मी
- 3) 4 cm
- 4 से.मी
- 4) 15 cm
- 15 से.मी

Correct Answer: 3 cm

3 से.मी

Candidate Answer: 3 cm

3 से.मी

Question 69. The upper part of a tree broke at a certain height makes an angle of 60° with the ground at a distance of 10 m. from its feet. The original height of the tree was

कुछ ऊँचाई पर टूटे वृक्ष का ऊपरी भाग अपने पाद से 10 मी. की दूरी पर जमीन के साथ 60° का कोण बनाता है। वृक्ष की मूल लम्बाई कितनी थी ?

Options:

- 1) $20\sqrt{3}$ m.
- $20\sqrt{3}$ मी.
- 2) $10\sqrt{3}$ m.
- $10\sqrt{3}$ मी.
- 3) $10(2+\sqrt{3})$ m.
- $10(2+\sqrt{3})$ मी.
- 4) $10(2-\sqrt{3})$ m.
- $10(2-\sqrt{3})$ मी.

Correct Answer: $10(2+\sqrt{3})$ m.

$10(2+\sqrt{3})$ मी.

Candidate Answer: [NOT ANSWERED]

Question 70. What would be the compound interest of Rs. 25000 for 2 yrs. at 5% per annum

5% वार्षिक दर पर Rs. 25000 का 2 वर्ष का चक्रवृद्धि ब्याज कितना होगा ?

Options:

- 1) 2500
- 2) 2562.5
- 3) 2425.25
- 4) 5512.5

Correct Answer: 2562.5

Candidate Answer: [NOT ANSWERED]

Question 71.

The value of $\cot 17^\circ (\cot 73^\circ \cos^2 22^\circ + \frac{1}{\cot 17^\circ \sec^2 68^\circ})$ is

$\cot 17^\circ (\cot 73^\circ \cos^2 22^\circ + \frac{1}{\cot 17^\circ \sec^2 68^\circ})$ का मान क्या है?

Options:

- 1) 0
- 2) 1
- 3) 2
- 4) $\sqrt{3}$

Correct Answer: 1

Candidate Answer: [NOT ANSWERED]

Question 72. Study the following histogram of data related to literate people of different age groups

विभिन्न आयु वर्ग के साक्षर लोगों से सम्बन्धित जानकारी पर आधारित निम्नलिखित हिस्टोग्राफ का अध्ययन कीजिए और प्रश्नों के उत्तर दीजिए।



Total number of literate people in the age group 15 to 45 years is

15 से 45 वर्ष के आयु वर्ग में साक्षर लोगों की संख्या कितनी है ?

Options:

1) 2800

2) 3700

3) 4050

4) 2350

Correct Answer: 3700**Candidate Answer:** 3700

Question 73. Study the following histogram of data related to literate people of different age groups

विभिन्न आयु वर्ग के साक्षर लोगों से सम्बन्धित जानकारी पर आधारित निम्नलिखित हिस्ट्रोग्राफ का अध्ययन कीजिए और प्रश्नों के उत्तर दीजिए।



Number of people literate in the age group of 20 to 35 years is

20 से 35 वर्ष के आयु वर्ग में साक्षर लोगों की संख्या कितनी है ?

Options:

1) 2050

2) 1250

3) 2150

4) 1700

Correct Answer: 2050**Candidate Answer:** 2050

Question 74. Study the following histogram of data related to literate people of different age groups

विभिन्न आयु वर्ग के साक्षर लोगों से सम्बन्धित जानकारी पर आधारित निम्नलिखित हिस्ट्रोग्राफ का अध्ययन कीजिए और प्रश्नों के उत्तर दीजिए।



Percentage of the literate people in the age group 30-45 years is

30 से 45 वर्ष के आयु वर्ग में साक्षर लोगों का प्रतिशत कितना है ?

Options:

1) 39%

2) 33.33%

3) 46.25%

4) 66.66%

Correct Answer: 33.33%**Candidate Answer:** 33.33%

Question 75. Study the following histogram of data related to literate people of different age groups

विभिन्न आयु वर्ग के साक्षर लोगों से सम्बन्धित जानकारी पर आधारित निम्नलिखित हिस्ट्रोग्राफ का अध्ययन कीजिए और प्रश्नों के उत्तर दीजिए।



Ratio of literate people in the age group of 20-35 years to that in the age group of 30-45 years is

20 से 35 वर्ष के आयु वर्ग और 30 से 45 वर्ष के आयु वर्ग में साक्षर लोगों का अनुपात कितना है ?

Options:

1) 40:20

2) 27:41

3) 41:27

4) 42:26

Correct Answer: 41:27**Candidate Answer:** 41:27

Question 76. In the following question, out of the four alternatives, choose the word which best expresses the meaning of the given word and click the button corresponding to it.

PROFLIGATE

Options:

1) TALKATIVE

2) INTELLIGENT

3) UNCONVENTIONAL

4) WASTEFUL

Correct Answer: WASTEFUL**Candidate Answer:** [NOT ANSWERED]

Question 77. In the following question, out of the four alternatives, choose the word which is opposite in meaning to the given word and click the button corresponding to it.

CONTEMPLATIVE

Options:

- 1) WISTFUL
- 2) UNREFLECTIVE
- 3) NUMBED
- 4) AROUSED

Correct Answer: UNREFLECTIVE

Candidate Answer: [NOT ANSWERED]

Question 78. Four words are given, out of which only one word is spelt correctly. Choose the correctly spelt word and click the button corresponding to it.

Options:

- 1) RECONAISSANCE
- 2) RECONAISANCE
- 3) RECONNAISSANCE
- 4) RECONNAISANCE

Correct Answer: RECONNAISSANCE

Candidate Answer: RECONNAISSANCE

Question 79. In the following questions, one part of the sentence may have an error. Find out which part of the sentence has an error and click the button corresponding to it. If the sentence is free from error, click the "No error" option.

One (A) / should keep (B) / his word. (C) / No Error (D)

Options:

- 1) A
- 2) B
- 3) C
- 4) D

Correct Answer: C

Candidate Answer: C

Question 80. In the following questions, one part of the sentence may have an error. Find out which part of the sentence has an error and click the button corresponding to it. If the sentence is free from error, click the "No error" option.

If you turn the corner, (A) / you will find a house (B) / built of stone. (C) / No Error (D)

Options:

- 1) A
- 2) B
- 3) C
- 4) D

Correct Answer: B

Candidate Answer: A

Question 81. In the following questions, one part of the sentence may have an error. Find out which part of the sentence has an error and click the button corresponding to it. If the sentence is free from error, click the "No error" option.

His appearance bears (A) / a striking resemblance (B) / to your cousin. (C) / No Error (D)

Options:

- 1) A
- 2) B
- 3) C
- 4) D

Correct Answer: D

Candidate Answer: C

Question 82. The sentences given with blanks are to be filled with an appropriate word(s). Four alternatives are suggested for each question. For each question, choose the correct alternative and click the button corresponding to it.

The director congratulated Mr. Varma _____ his success.

Options:

- 1) on
- 2) for
- 3) at
- 4) about

Correct Answer: on

Candidate Answer: on

Question 83. The sentences given with blanks are to be filled with an appropriate word(s). Four alternatives are suggested for each question. For each question, choose the correct alternative and click the button corresponding to it.

The boys were _____ to hear that we were going to build a bridge.

Options:

- 1) delight
- 2) delights
- 3) delighted
- 4) delighting

Correct Answer: delighted

Candidate Answer: delighted

Downloaded from www.qmaths.in

Question 84. The sentences given with blanks are to be filled with an appropriate word(s). Four alternatives are suggested for each question. For each question, choose the correct alternative and click the button corresponding to it.

The revolting players and the game's administrators held _____ discussions to resolve the payment dispute.

Options:

- 1) unnecessary
- 2) obligatory
- 3) preliminary
- 4) silent

Correct Answer: preliminary**Candidate Answer:** unnecessary

Question 85. In each of the questions, four alternatives are given for the Idiom/Phrase. Choose the alternative which best expresses the meaning of the Idiom/Phrase and click the button corresponding to it.

Wild goose chase

Options:

- 1) An admirable enterprise
- 2) An honest effort
- 3) A foolish, unprofitable adventure
- 4) A powerful effort

Correct Answer: A foolish, unprofitable adventure**Candidate Answer:** A foolish, unprofitable adventure

Question 86. In each of the questions, four alternatives are given for the Idiom/Phrase. Choose the alternative which best expresses the meaning of the Idiom/Phrase and click the button corresponding to it.

Smell a rat

Options:

- 1) Detect bad smell
- 2) Suspect a trick or deceit
- 3) Misunderstand
- 4) See hidden meaning

Correct Answer: Suspect a trick or deceit**Candidate Answer:** Suspect a trick or deceit

Question 87. In each of the questions, four alternatives are given for the Idiom/Phrase. Choose the alternative which best expresses the meaning of the Idiom/Phrase and click the button corresponding to it.

A live wire

Options:

- 1) Industrious and brilliant
- 2) Lively and active
- 3) Sincere and intelligent
- 4) Sincere and efficient

Correct Answer: Lively and active**Candidate Answer:** Industrious and brilliant

Question 88. Out of the four alternatives, choose the one which can be substituted for the given words/sentences and click the button corresponding to it.

The ceremony of crowning a sovereign

Options:

- 1) Felicitation
- 2) Promotion
- 3) Coronation
- 4) Installation

Correct Answer: Coronation**Candidate Answer:** Coronation

Question 89. Out of the four alternatives, choose the one which can be substituted for the given words/sentences and click the button corresponding to it.

One who tends to patronize, rebuff or ignore people regarded as social inferiors and imitate, admire people regarded as social superiors

Options:

- 1) Snob
- 2) Fob
- 3) Dandy
- 4) Freak

Correct Answer: Snob**Candidate Answer:** Freak

Question 90. Out of the four alternatives, choose the one which can be substituted for the given words/sentences and click the button corresponding to it.

A room where dead bodies are kept until burial

Options:

- 1) Grave
- 2) Cemetery
- 3) Mortuary
- 4) Pyre

Correct Answer: Mortuary**Candidate Answer:** Cemetery

Question 91. A sentence/a part of the sentence is underlined. Four alternatives are given to the underlined part which will improve the sentence. Choose the correct alternative and click the button corresponding to it. In case no improvement is needed, click the button corresponding to "No improvement".

Any able-bodied man is eligible for the job.

Options:

- 1) Each able-bodied man is
- 2) Any able-bodied men have been
- 3) Any able-bodied men are
- 4) No improvement

Correct Answer: No improvement**Candidate Answer:** Each able-bodied man is

Question 92. A sentence/a part of the sentence is underlined. Four alternatives are given to the underlined part which will improve the sentence. Choose the correct alternative and click the button corresponding to it. In case no improvement is needed, click the button corresponding to "No improvement".

She found a wooden broken table in the room.

Options:

- 1) wooden and broken table
- 2) broken wooden table
- 3) broken and wooden table
- 4) No improvement

Correct Answer: broken wooden table**Candidate Answer:** broken wooden table

Question 93. A sentence/a part of the sentence is underlined. Four alternatives are given to the underlined part which will improve the sentence. Choose the correct alternative and click the button corresponding to it. In case no improvement is needed, click the button corresponding to "No improvement".

The truck rumbled to a halt and a man got out and ran.

Options:

- 1) shrieked at
- 2) screeched to
- 3) screamed at
- 4) No improvement

Correct Answer: screeched to**Candidate Answer:** No improvement

Question 94. A sentence/a part of the sentence is underlined. Four alternatives are given to the underlined part which will improve the sentence. Choose the correct alternative and click the button corresponding to it. In case no improvement is needed, click the button corresponding to "No improvement".

The Professor asked the intruder who was he and why was he in his lecture.

Options:

- 1) who he was and why he was
- 2) who he was and why was he
- 3) who he had been and why he had been
- 4) No improvement

Correct Answer: who he was and why he was**Candidate Answer:** who he was and why he was

Question 95. A sentence/a part of the sentence is underlined. Four alternatives are given to the underlined part which will improve the sentence. Choose the correct alternative and click the button corresponding to it. In case no improvement is needed, click the button corresponding to "No improvement".

My uncle goes to office on bicycle or by foot.

Options:

- 1) by bicycle or by foot
- 2) by bicycle or on foot
- 3) on bicycle or on foot
- 4) No improvement

Correct Answer: by bicycle or on foot**Candidate Answer:** No improvement

Question 96. A passage is given with 5 questions following it. Read the passage carefully and choose the best answer to each question out of the four alternatives and click the button corresponding to it.

We set out for the gallows. Two warders marched on either side of the prisoner, with their rifles at the slope; two others marched close against him, gripping him by his arm and shoulder, as though, at once pushing and supporting him. The rest of us, magistrates and the like, followed behind. Suddenly, when we had gone ten yards, the procession stopped short without any order or warning. A dreadful thing had happened - a dog, come goodness knows whence, had appeared in the yard. It came bounding among us with a loud volley of barks, and leapt round us wagging its whole body, wild with glee at finding so many human beings together. It was a large woolly dog, half Airedale, half Pariah. For a moment, it pranced round us, and then, before anyone could stop it, it had made a dash for the prisoner, and jumping up tried to lick his face. Everyone stood aghast, too taken aback even to grab at the dog.

What was the tone of the essay at the beginning?

Options:

- 1) Celebrative
- 2) Emotionally charged
- 3) Gloomy
- 4) Light-hearted

Correct Answer: Gloomy**Candidate Answer:** Gloomy

Question 97. A passage is given with 5 questions following it. Read the passage carefully and choose the best answer to each question out of the four alternatives and click the button corresponding to it.

We set out for the gallows. Two warders marched on either side of the prisoner, with their rifles at the slope; two others marched close against him, gripping him by his arm and shoulder, as though, at once pushing and supporting him. The rest of us, magistrates and the like, followed behind. Suddenly, when we had gone ten yards, the procession stopped short without any order or warning. A dreadful thing had happened - a dog, come goodness knows whence, had appeared in the yard. It came bounding among us with a loud volley of barks, and leapt round us wagging its whole body, wild with glee at finding so many human beings together. It was a large woolly dog, half Airedale, half Pariah. For a moment, it pranced round us, and then, before anyone could stop it, it had made a dash for the prisoner, and jumping up tried to lick his face. Everyone stood aghast, too taken aback even to grab at the dog.

How did the arrival of the dog change the atmosphere of the event?

Options:

- 1) It caused the people to scatter
- 2) It allowed the prisoner to escape
- 3) It saddened the prisoner even more
- 4) It stunned everyone present there

Correct Answer: It stunned everyone present there**Candidate Answer:** It stunned everyone present there

Question 98. A passage is given with 5 questions following it. Read the passage carefully and choose the best answer to each question out of the four alternatives and click the button corresponding to it.

We set out for the gallows. Two warders marched on either side of the prisoner, with their rifles at the slope; two others marched close against him, gripping him by his arm and shoulder, as though, at once pushing and supporting him. The rest of us, magistrates and the like, followed behind. Suddenly, when we had gone ten yards, the procession stopped short without any order or warning. A dreadful thing had happened - a dog, come goodness knows whence, had appeared in the yard. It came bounding among us with a loud volley of barks, and leapt round us wagging its whole body, wild with glee at finding so many human beings together. It was a large woolly dog, half Airedale, half Pariah. For a moment, it pranced round us, and then, before anyone could stop it, it had made a dash for the prisoner, and jumping up tried to lick his face. Everyone stood aghast, too taken aback even to grab at the dog.

What was the emotion displayed by the dog?

Options:

- 1) Fear
- 2) Joy
- 3) Anger
- 4) Alarm

Correct Answer: Joy**Candidate Answer:** Fear

Question 99. A passage is given with 5 questions following it. Read the passage carefully and choose the best answer to each question out of the four alternatives and click the button corresponding to it.

We set out for the gallows. Two warders marched on either side of the prisoner, with their rifles at the slope; two others marched close against him, gripping him by his arm and shoulder, as though, at once pushing and supporting him. The rest of us, magistrates and the like, followed behind. Suddenly, when we had gone ten yards, the procession stopped short without any order or warning. A dreadful thing had happened - a dog, come goodness knows whence, had appeared in the yard. It came bounding among us with a loud volley of barks, and leapt round us wagging its whole body, wild with glee at finding so many human beings together. It was a large woolly dog, half Airedale, half Pariah. For a moment, it pranced round us, and then, before anyone could stop it, it had made a dash for the prisoner, and jumping up tried to lick his face. Everyone stood aghast, too taken aback even to grab at the dog.

What was surprising about the actions of the dog?

Options:

- 1) It ran up and down the path
- 2) It bit the guards
- 3) It barked at the magistrates
- 4) It licked the prisoner's face

Correct Answer: It licked the prisoner's face**Candidate Answer:** It licked the prisoner's face

Question 100. A passage is given with 5 questions following it. Read the passage carefully and choose the best answer to each question out of the four alternatives and click the button corresponding to it.

We set out for the gallows. Two warders marched on either side of the prisoner, with their rifles at the slope; two others marched close against him, gripping him by his arm and shoulder, as though, at once pushing and supporting him. The rest of us, magistrates and the like, followed behind. Suddenly, when we had gone ten yards, the procession stopped short without any order or warning. A dreadful thing had happened - a dog, come goodness knows whence, had appeared in the yard. It came bounding among us with a loud volley of barks, and leapt round us wagging its whole body, wild with glee at finding so many human beings together. It was a large woolly dog, half Airedale, half Pariah. For a moment, it pranced round us, and then, before anyone could stop it, it had made a dash for the prisoner, and jumping up tried to lick his face. Everyone stood aghast, too taken aback even to grab at the dog.

How did the author respond to the appearance of the dog?

Options:

- 1) He jumped at the dog and collared it
- 2) He ignored the dog and pretended it was not there
- 3) He was taken aback as the others
- 4) He yelled at the dog to silence its barking

Correct Answer: He was taken aback as the others

Candidate Answer: He was taken aback as my wife

Downloaded from www.qmaths.in

