



**Staff Selection Commission**  
(Government Of India)

**REGISTRATION NUMBER : qmaths.in**  
**EXAM DATE : 30-August-2016**  
**EXAM NAME : SSC Examination 2016**  
**TOTAL MARKS : 200**

**CANDIDATE NAME : qmaths.in**  
**EXAM START TIME : 10:00:00**  
**EXAM DURATION : 01:15 Hrs**  
**TOTAL NO OF QUESTIONS : 100**

Question 1. Select the related word/letters/number from the given alternatives.

दिये गये विकल्पों में से संबंधित शब्द/अक्षरों/संख्या को चुनिए।

Flow : River :: Stagnant : ?

बहाव : नदी :: स्थिर : ?

**Options:**

1) Pond

तालाब

2) Rain

वर्षा

3) Stream

सरिता

4) Canal

नहर

**Correct Answer:** Pond

तालाब

**Candidate Answer:** Pond

तालाब

Question 2. Select the related word/letters/number from the given alternatives.

दिये गये विकल्पों में से संबंधित शब्द/अक्षरों/संख्या को चुनिए।

AEIM : BFJN :: CGKO : ?

**Options:**

1) DHLI

2) ZVRP

3) BC DK

4) MPQR

**Correct Answer:** DHLI

**Candidate Answer:** DHLI

Question 3. Select the related word/letters/number from the given alternatives.

दिये गये विकल्पों में से संबंधित शब्द/अक्षरों/संख्या को चुनिए।

24 : 60 :: 210 : ?

**Options:**

1) 348

2) 336

3) 340

4) 326

**Correct Answer:** 336

**Candidate Answer:** 336

Qmaths.in  
SSC | IBPS | RAILWAYS | LIC | SIDBI

Question 4.

**For the following questions**

Find the odd word/letters/number pair from the given alternatives.

दिये गये विकल्पों में से विषम शब्द/अक्षर/संख्या को चुनिए।

**Options:**

1) Shimla

शिमला

2) Ooty

ऊटी

3) Darjeeling

दार्जिलिंग

4) Agra

आगरा

**Correct Answer:** Agra

आगरा

**Candidate Answer:** Agra

आगरा

Question 5.

**For the following questions**

umber pair from the given alternatives.

दिये गये विकल्पों में से विषम शब्द/अक्षर/संख्या को चुनिए।

**Options:**

1) 64

2) 900

3) 343

4) 1000

**Correct Answer:** 900**Candidate Answer:** 900

Question 6.

**For the following questions**

Find the odd word/letters/number pair from the given alternatives.

दिये गये विकल्पों में से विषम शब्द/अक्षर/संख्या को चुनिए।

**Options:**

1) NSWX

2) KPSU

3) HMQR

4) EJNO

**Correct Answer:** KPSU**Candidate Answer:** KPSU

Question 7. Arrange the following words as per order in the dictionary

निम्नलिखित शब्दों को शब्दकोश में दिए गए क्रम के अनुसार लिखिए।

1. Maternity 2. Matriarchy

3. Matchbox 4. Matricide

Qmaths.in

SSC | IBPS | RAILWAYS | LIC | SIDBI

**Options:**

1) 3,1,2,4

2) 4,3,1,2

3) 3,4,1,2

4) 1,3,4,2

**Correct Answer:** 3,1,2,4**Candidate Answer:** 3,1,2,4

Question 8.A series is given, with one term missing. Choose the correct alternative from the given ones that will complete the series.

दिये गये प्रश्न में एक अनुक्रम दिया है, जिसमें एक पद लुप्त है। दिए गए विकल्पों में से वह सही विकल्प चुनिए जो अनुक्रम को पूरा करे।

EDBA, KJHG, QPNM, ?

**Options:**

1) WVTS

2) WXUV

3) WVST

4) WVTX

**Correct Answer:** WVTS**Candidate Answer:** WVTS

Question 9.A series is given, with one term missing. Choose the correct alternative from the given ones that will complete the series.

दिये गये प्रश्न में एक अनुक्रम दिया है, जिसमें एक पद लुप्त है। दिए गए विकल्पों में से वह सही विकल्प चुनिए जो अनुक्रम को पूरा करे।

463, 452, 439, 424, ?

**Options:**

1) 407

2) 413

3) 419

4) 411

**Correct Answer:** 407**Candidate Answer:** 407

Qmaths.in  
SSC | IBPS | RAILWAYS | LIC | SIDBI

Question 10.At present, the ratio between the ages of Arun and Deepak is 4:3 . After 6 years, Arun's age will be 26 years. What is the age of Deepak at present?

अरुण और दीपक की वर्तमान आयु का अनुपात 4:3 है। 6 साल बाद अरुण की आयु 26 साल होगी। दीपक की वर्तमान आयु बताइए ?

**Options:**

1) 12 years

12 वर्ष

2) 15 years

15 वर्ष

3) 19½ years

19½ वर्ष

4) 25 years

25 वर्ष

**Correct Answer:** 15 years

15 वर्ष

**Candidate Answer:** 15 years

15 वर्ष

Question 11.X is the husband of Y. W is the daughter of X. Z is the husband of W. N is the daughter of Z. What is the relationship of N to Y?

X, Y का पति है। W, X की पुत्री है। Z, W का पति है। N, Z की पुत्री है। N का Y से क्या सम्बन्ध है ?

**Options:**

- 1) Cousin  
चचेरा भाई / चचेरी बहन
- 2) Niece  
भानजी/भतीजी
- 3) Daughter  
पुत्री
- 4) Grand daughter  
पोती

**Correct Answer:** Grand daughter  
पोती

**Candidate Answer:** Grand daughter  
पोती

Question 12. From the given words, select the word which cannot be formed using the letters of the given word.

निम्नलिखित विकल्पों में से वह शब्द चुनिए जो दिए गए शब्द के अक्षरों के प्रयोग से नहीं बनाया जा सकता है।

DETERMINATION

**Options:**

- 1) DETENTION
- 2) DESTINATION
- 3) TERMINATE
- 4) DOMINATE

**Correct Answer:** DESTINATION

**Candidate Answer:** DESTINATION

Question 13. If GOODNESS is coded as HNPCODTR then GREATNESS will be coded as

यदि किसी कोड में 'GOODNESS' को 'HNPCODTR' लिखा जाता है, तो उस कोड में 'GREATNESS' को कैसे लिखा जायेगा ?

**Options:**

- 1) HQZFBMERT
- 2) HPFZUMERT
- 3) HQEZUMFTR
- 4) HQFZUMFRT

**Correct Answer:** HQFZUMFRT

**Candidate Answer:** HQFZUMFRT

Question 14. Complete the third equation on the basis of a certain system followed in the first two equations.

प्रथम दो समीकरणों के आधार पर तीसरे समीकरण को पूर्ण कीजिये ।

(1)  $5*4*2*1 = 1425$  (2)  $7*8*1*6 = 6817$  (3)  $9*3*7*5 = ?$

**Options:**

- 1) 3795
- 2) 5397
- 3) 5973
- 4) 5379

**Correct Answer:** 5379

**Candidate Answer:** 5379

Question 15. If '-' stands for division, '+' for multiplication, '÷' for subtraction and 'x' for addition, which one of the following equations is correct?

यदि '-' मतलब है भाग, '+' का मतलब है गुणा, '÷' का मतलब है घटाना और 'x' का मतलब है जोड़ना । तो निम्नलिखित में से कौन-सा समीकरण सही है ?

**Options:**

- 1)  $18 \div 3 \times 2 + 8 - 6 = 10$
- 2)  $18 - 3 + 2 \times 8 \div 6 = 14$
- 3)  $18 - 3 \div 2 \times 8 + 6 = 17$
- 4)  $18 \times 3 + 2 \div 8 - 6 = 15$

**Correct Answer:**  $18 - 3 + 2 \times 8 \div 6 = 14$

Candidate Answer:  $18 - 3 + 2 \times 8 \div 6 = 4$  **Downloaded from www.qmaths.in**

Question 16. Find missing pair of letters from given responses to replace ?

दिए गए विकल्पों में से अक्षरों का लुप्त जोड़ा ज्ञात कीजिए।

AZ	BY	CX
DW	EV	FU
GT	?	IR

Options:

1) HR

2) HS

3) HV

4) HU

Correct Answer: HS

Candidate Answer: HS

Question 17. X walked 20 feet from A to B in the East direction. Then X turned to the right and walked 6 feet. Again X turned to the right and walked 28 feet. How far is X from A ?

X पूर्व दिशा में A से B तक 20 फीट चला। फिर वह दायीं ओर मुड़कर 6 फीट चला। वह फिर दायीं ओर मुड़ा और 28 फीट चला। X अब A से कितनी दूरी पर है ?

Options:

1) 28

2) 9

3) 10

4) 27

Correct Answer: 10

Candidate Answer: 10

Question 18. Consider the given statement/s to be true and decide which of the given conclusions/assumptions can definitely be drawn from the given statement.

Statement: The situation calls for an immediate action

Assumptions: I. The situation is serious.

II. Immediate action is possible.

निम्नलिखित प्रश्न में एक या दो वक्तव्य दिये गये हैं, जिसके आगे दो निष्कर्ष/मान्यताएं, I और II निकाले गये हैं। आपको विचार करना है कि वक्तव्य सत्य है चाहे वह सामान्यतः शर्त तथ्यों से भिन्न प्रतीत होता हो। आपको निर्णय करना है कि दिए गए वक्तव्य में से कोन-सा निश्चित रूप से सही निष्कर्ष/मान्यता निकाला जा सकता है ?

वक्तव्य : स्थिति पर तुरन्त कार्यवाही की आवश्यकता है।

मान्यता -I : स्थिति गंभीर है।

II : तुरन्त कार्यवाही सम्भव है।

Options:

1) only I is an assumption

केवल निष्कर्ष I सही है।

2) only II is an assumption

केवल निष्कर्ष II सही है।

3) Both I and II are assumptions

दोनों निष्कर्ष I और II सही हैं।

4) Neither I or II is an assumption

ना तो निष्कर्ष I सही है और ना ही निष्कर्ष II

Correct Answer: Neither I or II is an assumption

ना तो निष्कर्ष I सही है और ना ही निष्कर्ष II

Candidate Answer: only II is an assumption

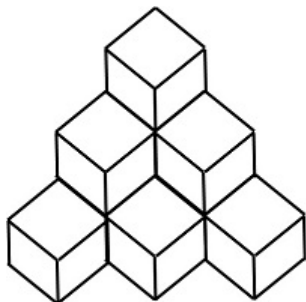
केवल निष्कर्ष II सही है।

Qmaths.in

IBPS | RAILWAYS | LIC | SBI

Question 19. How many cubes are there in the figure? **Downloaded from www.qmaths.in**

आकृति में कितने घन हैं ?



**Options:**

- 1) 10
- 2) 12
- 3) 8
- 4) 6

**Correct Answer:** 10

**Candidate Answer:** 12

Question 20. Identify the diagram that best represents the relationship among classes given below  
North America, United States of America, New York

वह आरेख चुनिए जो नीचे दिए गये वर्गों के बीच सम्बंध का सही निरूपण करता है।

उत्तर अमरीका, संयुक्त राज्य अमेरिका, न्यूयार्क

**Options:**

1)



2)



3)



4)



**Correct Answer:**



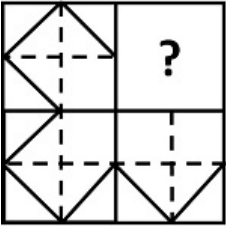
**Candidate Answer:**



**Qmaths.in**  
SSC | IBPS | RAILWAYS | LIC | SIDBI

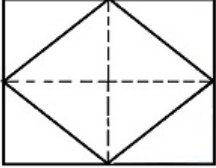
Question 21. Which answer figure will complete the series in the question figure. Downloaded from www.qmaths.in

कौन-सी उत्तर आकृति प्रश्न आकृति के प्रतिरूप को पूरा करेगी ?

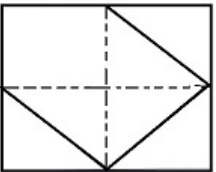


Options:

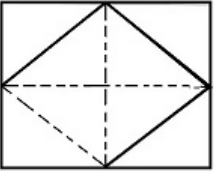
1)



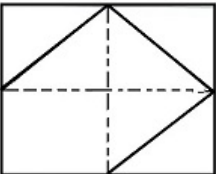
2)



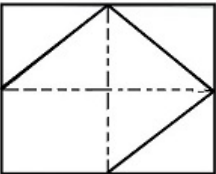
3)



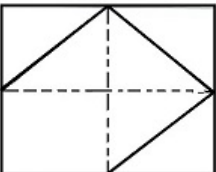
4)



Correct Answer:



Candidate Answer:



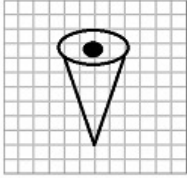
Qmaths.in

SSC | IBPS | RAILWAYS | LIC | SIDBI

Question 22. From the given answer figures, select the one in which the question figure is not embedded.

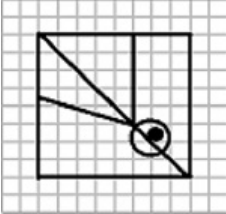
Downloaded from [www.qmaths.in](http://www.qmaths.in)

दी गई उत्तर आकृति को चुनिए जिसमें प्रश्न आकृति निहित है।

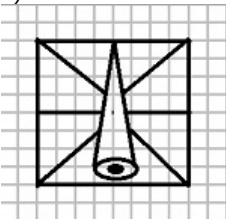


Options:

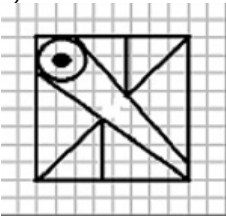
1)



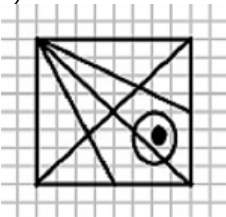
2)



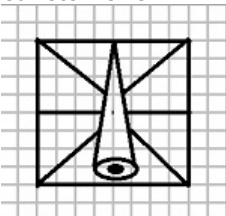
3)



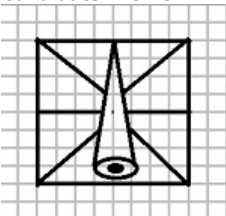
4)



Correct Answer:



Candidate Answer:

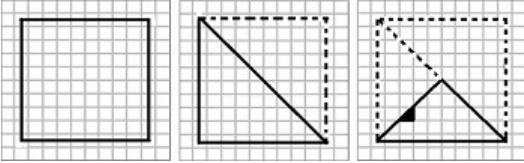


Qmaths.in  
SSC | IBPS | RAILWAYS | LIC | SIDBI



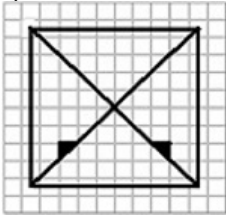
Question 23. A piece of paper is folded and cut as shown below in the question figure. From the given answer figures, indicate how it will appear when opened.

नीचे प्रश्न आकृतियों में चित्र अनुसार कागज को मोड़ने, काटने तथा खोलने के बाद वह किस उत्तर आकृति जैसा दिखाई देगा ?

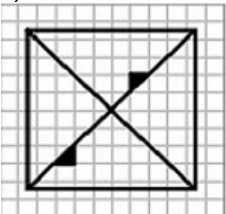


Options:

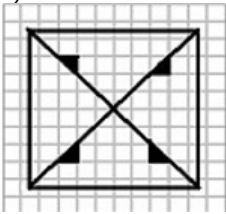
1)



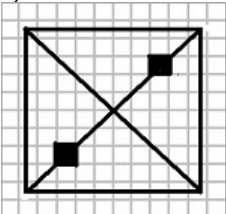
2)



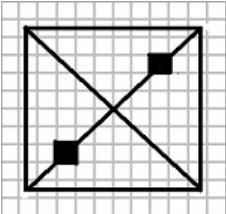
3)



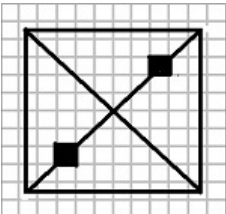
4)



Correct Answer:



Candidate Answer:

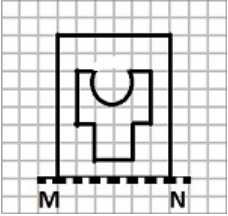


Qmaths.in  
SSC | IBPS | RAILWAYS | LIC | SIDBI

Question 24. If a mirror is placed on the line MN, then which of the answer figure is the mirror image of the given figure?

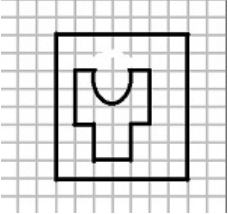
Downloaded from [www.qmaths.in](http://www.qmaths.in)

यदि एक दर्पण को MN रेखा पर रखा जाए तो दी गई उत्तर आकृतियों में से कौन-सी आकृति प्रश्न आकृति का सही प्रतिबिम्ब होगी ?

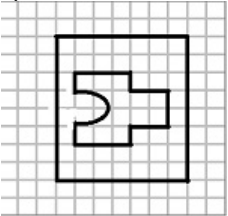


Options:

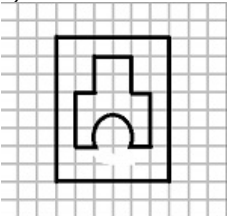
1)



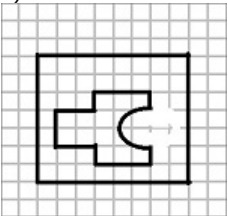
2)



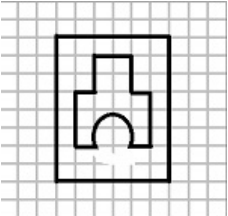
3)



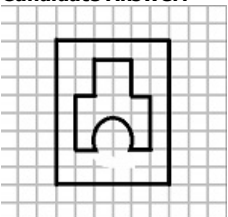
4)



Correct Answer:



Candidate Answer:



Qmaths.in  
SSC | IBPS | RAILWAYS | LIC | SIDBI

Question 25. In the question, a word is represented by two sets of numbers as given in the alternatives. The sets of numbers given in the alternatives are represented by two classes of alphabets as in two matrices given below. The columns and rows of Matrix I are numbered from 0 to 4 and that of Matrix II are numbered from 5 to 9. A letter from these matrices can be represented first by its row and next by its column, e.g., 'G' can be represented by 04, 40, etc., and 'K' can be represented by 56, 75, etc.

You have to identify the set for the word 'HILL'

निम्नलिखित प्रश्न में विकल्पों में दिए गए संख्या-समूह, अक्षरों के दो वर्गों द्वारा दर्शाए गए हैं, जैसे कि नीचे दिए गए दो आव्यूहों में हैं। आव्यूह I के सतम्भ और पंक्ति की संख्या 0 से 4 तक दी गई है, और आव्यूह II के 5 से 9 तक, इन आव्यूहों से एक अक्षर को पहले उसकी पंक्ति और बाद में स्तम्भ संख्या द्वारा दर्शाया जा सकता है। उदाहरण के लिए 'G' को 04, 40 आदि द्वारा दर्शाया जा सकता है तथा 'K' को 56, 75 आदि द्वारा दर्शाया जा सकता है। इसी तरह से आपको दिए हुए शब्द 'HILL' के लिए समूह को पहचानना है।

Matrix - I						Matrix - II					
	0	1	2	3	4		5	6	7	8	9
0	C	D	E	F	G	5	H	K	L	I	N
1	F	G	C	D	E	6	I	N	H	K	L
2	D	E	F	G	C	7	K	L	I	N	H
3	E	F	G	C	D	8	L	I	N	H	K
4	G	C	D	E	F	9	N	H	K	L	I

**Options:**

1) 56, 58, 03, 02

2) 55, 77, 69, 85

3) 56, 62, 03, 02

4) 57, 60, 10, 02

**Correct Answer:** 55, 77, 69, 85

**Candidate Answer:** 55, 77, 69, 85

Question 26. Who among the following is not a member of the National Development Council?

निम्नलिखित में से कौन राष्ट्रीय विकास परिषद का सदस्य नहीं है ?

**Options:**

1) The Prime Minister

प्रधानमंत्री

2) The Member of NITI Aayog

नीति आयोग का सदस्य

3) The Chief Ministers of States

राज्यों के मुख्य मंत्री

4) The President of India

भारत के राष्ट्रपति

**Correct Answer:** The President of India

भारत के राष्ट्रपति

**Candidate Answer:** The President of India

भारत के राष्ट्रपति

Question 27. The rate of tax increase as the amount of the tax base increases is called

टैक्स आधार में वृद्धि के अनुरूप कर की दर बढ़ने को क्या कहा जाता है ?

**Options:**

1) Proportional tax

समानुपाती कर

2) Progressive tax

प्रगतिशील कर

3) Regressive tax

प्रतिगामी कर

4) Degressive tax

हासमान कर

**Correct Answer:** Progressive tax

प्रगतिशील कर

**Candidate Answer:** Proportional tax

समानुपाती कर

Question 28. The supply-side economics lays greater emphasis on \_\_\_\_\_

आपूर्ति पक्ष का अर्थशास्त्र किस पर अधिक जोर देता है ?

Qmaths.in  
SSC | IBPS | RAILWAYS | LIC | SIDBI

**Options:**

1) Producer

निर्माता

2) Global economy

विश्व अर्थव्यवस्था

3) Consumer

उपभोक्ता

4) Middle Man

बिचौलिया

**Correct Answer:** Producer

निर्माता

**Candidate Answer:** Producer

निर्माता

Question 29.The founding father of "Theory of bureaucracy" was

"नौकरशाही के सिद्धान्त" के संस्थापक जनक कौन थे ?

**Options:**

1) F. W. Taylor

एफ.डब्ल्यू. टेलर

2) Max Weber

मैक्स वेबर

3) Elton Mayo

एल्टन मेयो

4) Herbert Simon

हर्बर्ट साइमन

**Correct Answer:** Max Weber

मैक्स वेबर

**Candidate Answer:** [ NOT ANSWERED ]

Question 30.The United Nations Organisation came into existence in

संयुक्त राष्ट्र संघ कब अस्तित्व में आया ?

**Options:**

1) 1947

2) 1950

3) 1945

4) 1946

**Correct Answer:** 1945**Candidate Answer:** 1946

Question 31.Abdul Fazal was the son of which Sufi saint?

अब्दुल फजल किस सूफी संत के पुत्र थे ?

**Options:**

1) Sheikh Mubarak

शेख मुबारक

2) Hazarat Kwaja

हजरत खवाजा

3) Nasiruddin Chirag

नसीरुद्दीन चिराग

4) Baba Qutubuddin Bakhtiyar Kaki

बाबा कुतुबुद्दीन बख्तियार काकी

**Correct Answer:** Sheikh Mubarak

शेख मुबारक

**Candidate Answer:** [ NOT ANSWERED ]

Question 32.French revolution broke out in the year :

फ्रांसीसी क्रान्ति किस वर्ष हुई थी?

**Options:**

1) 1917

2) 1911

3) 1789

4) 1790

**Correct Answer:** 1789**Candidate Answer:** 1917

Question 33. The song "Vande Mataram" occurs in the book \_\_\_\_\_

"वंदेमातरम" गीत किस पुस्तक से लिया गया है ?

**Options:**

1) Geetanjali

गीतांजली

2) Anandmath

आनन्द मठ

3) Indian People

इण्डियन पीपल

4) Poverty and Un - British Rule in India

पॉवर्टी एण्ड अन-ब्रिटिश रूल इन इण्डिया

**Correct Answer:** Anandmath

आनन्द मठ

**Candidate Answer:** Anandmath

आनन्द मठ

Question 34. Which mosquito is the carrier of Zika virus?

ज़ीका वायरस का वाहक कौन सा मच्छर है ?

**Options:**

1) Culex

क्यूलेक्स

2) Aedes

ऐडिस

3) Anopheles

एनोफीलिस

4) Culiseta

क्यूलिसीटा

**Correct Answer:** Aedes

ऐडिस

**Candidate Answer:** [ NOT ANSWERED ]

Question 35. Geothermal energy is maximum utilised in \_\_\_\_\_

भूतापीय ऊर्जा का अधिकतम उपयोग कहां होता है ?

**Options:**

1) Iceland

आइसलैण्ड

2) New Zealand

न्यूज़ीलैण्ड

3) Russia

रूस

4) Japan

जापान

**Correct Answer:** Iceland

आइसलैण्ड

**Candidate Answer:** Iceland

आइसलैण्ड

Question 36. Root cap is derived from

जड़ आवरण किससे प्राप्त होता है ?

**Options:**

- 1) Dermatogen  
डर्मटोजन
- 2) Calyptrogen  
कैलिप्ट्रोजन
- 3) Protoderm  
प्रोटोडर्म
- 4) Histogen  
हिस्टोजन

**Correct Answer:** Calyptrogen  
कैलिप्ट्रोजन

**Candidate Answer:** [ NOT ANSWERED ]

Question 37. The blotting technique used to identify the isolated protein is \_\_\_\_\_

विलगित प्रोटीन की पहचान हेतु शोषक तकनीक क्या है ?

**Options:**

- 1) Northern blotting  
उत्तरी शोषक
- 2) Western blotting  
पश्चिमी शोषक
- 3) Southern blotting  
दक्षिणी शोषक
- 4) Cloning  
क्लोनिंग

**Correct Answer:** Western blotting  
पश्चिमी शोषक

**Candidate Answer:** [ NOT ANSWERED ]

Question 38. Morphology of Chromosomes can be best studied at \_\_\_\_\_

गुणसूत्रों की आकृति विज्ञान का अच्छी तरह से अध्ययन किससे किया जा सकता है \_\_\_\_\_

**Options:**

- 1) Interphase  
अंतरावस्था में
- 2) Prophase  
पूर्वावस्था में
- 3) Metaphase  
मध्यावस्था में
- 4) Zygotene  
जाइगोटीन में

**Correct Answer:** Metaphase  
मध्यावस्था में

**Candidate Answer:** [ NOT ANSWERED ]

Question 39. The 'Choke' used with a tube light is basically \_\_\_\_\_

ट्यूब लाइट के साथ प्रयुक्त 'चोक' मूलतः क्या है ?

**Options:**

- 1) an inductor  
प्रेरक
- 2) a capacitor  
संधारक
- 3) a transformer  
परिणामित्र
- 4) a resistor  
प्रतिरोधक

**Correct Answer:** an inductor  
प्रेरक

**Candidate Answer:** a capacitor  
संधारक

Question 40. Curie is an unit of \_\_\_\_\_

क्यूरी किसकी यूनिट है ?

Qmaths.in  
SSC | IBPS | RAILWAYS | LIC | SIDBI

**Options:**

- 1) Radioactivity  
रेडियोधर्मिता
- 2) energy of Gamma rays  
गामा किरणों की ऊर्जा
- 3) intensity of Gamma rays  
गामा किरणों की तीव्रता
- 4) work function  
कार्य फलन

**Correct Answer:** Radioactivity  
रेडियोधर्मिता

**Candidate Answer:** Radioactivity  
रेडियोधर्मिता

Question 41. In Networks, WEP stands for

नेटवर्क में WEP का क्या अर्थ है ?

**Options:**

- 1) Wireless Equivalent Privacy
- 2) Wired Extra Privacy
- 3) Wired Equivalent Privacy
- 4) Wireless Embedded Privacy

**Correct Answer:** Wired Equivalent Privacy

**Candidate Answer:** Wireless Embedded Privacy

Question 42. For extinguishing fire, we use \_\_\_\_\_

अग्निशमन के लिए हम किसका प्रयोग करते हैं ?

**Options:**

- 1) Hydrogen  
हाइड्रोजन
- 2) Carbon Monoxide  
कार्बन-मोनो ऑक्साइड
- 3) Carbon Dioxide  
कार्बन डाई-ऑक्साइड
- 4) Marsh gas  
मार्श गैस

**Correct Answer:** Carbon Dioxide  
कार्बन डाई-ऑक्साइड

**Candidate Answer:** Carbon Dioxide  
कार्बन डाई-ऑक्साइड

Question 43. The chemical name of quartz is \_\_\_\_\_

क्वार्ट्ज का रासायनिक नाम क्या है ?

**Options:**

- 1) Calcium oxide  
कैल्शियम ऑक्साइड
- 2) Calcium phosphate  
कैल्शियम फॉस्फेट
- 3) Sodium phosphate  
सोडियम फॉस्फेट
- 4) Sodium silicate  
सोडियम सिलिकेट

**Correct Answer:** Sodium silicate  
सोडियम सिलिकेट

**Candidate Answer:** Sodium silicate  
सोडियम सिलिकेट

Question 44. Continuous chain of mountains that rise abruptly more or less parallel to the coastline of India is

पर्वतों की लगातार श्रृंखला कौन सी है, जिसकी उत्पत्ति भारत की समुद्री सीमा के लगभग समानान्तर है



**Options:**

- 1) Aravalli  
अरावली
- 2) Satpura  
सतपुड़ा
- 3) Eastern ghats  
पूर्वी घाट
- 4) Western ghats  
पश्चिमी घाट

**Correct Answer:** Western ghats  
पश्चिमी घाट

**Candidate Answer:** Western ghats  
पश्चिमी घाट

Question 45. The biggest reserves of Thorium are in \_\_\_\_

थोरियम का सबसे बड़ा भण्डार कहाँ है ?

**Options:**

- 1) China  
चीन
- 2) USA  
यू.एस.ए.
- 3) India  
भारत
- 4) France  
फ्रांस

**Correct Answer:** India  
भारत

**Candidate Answer:** India  
भारत

Question 46. Which of the following became the first country in the world to legalise euthanasia?

निम्नलिखित में से कौन सा देश इच्छामृत्यु को कानूनी बनाने वाला विश्व का प्रथम देश बना ?

**Options:**

- 1) Belgium  
बेल्जियम
- 2) Netherlands  
नीदरलैंड्स
- 3) Denmark  
डेनमार्क
- 4) Canada  
कनाडा

**Correct Answer:** Netherlands  
नीदरलैंड्स

**Candidate Answer:** Netherlands  
नीदरलैंड्स

Question 47. Which of the following countries won Euro Cup 2016 (football)?

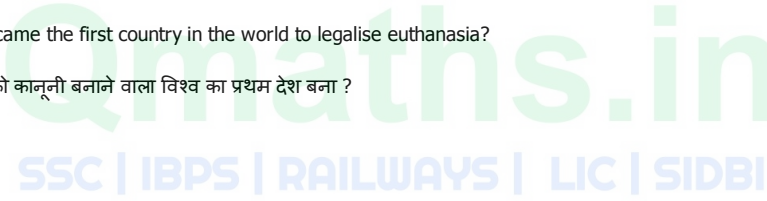
निम्नलिखित में से किस देश ने यूरो कप 2016 (फुटबाल) का खिताब जीता ?

**Options:**

- 1) France  
फ्रांस
- 2) Germany  
जर्मनी
- 3) Portugal  
पुर्तगाल
- 4) Iceland  
आइसलैंड

**Correct Answer:** Portugal  
पुर्तगाल

**Candidate Answer:** Germany  
जर्मनी





Question 48. Shivkumar Sharma is famous for playing the \_\_\_\_\_  
 Downloaded from [www.qmaths.in](http://www.qmaths.in)

शिव कुमार शर्मा किसके प्रसिद्ध वादक हैं ?

**Options:**

- 1) Sitar  
सितार
- 2) Flute  
बांसुरी
- 3) Santoor  
संतूर
- 4) Tabla  
तबला

**Correct Answer:** Santoor

संतूर

**Candidate Answer:** [ NOT ANSWERED ]

Question 49. Who among the following is popularly known as 'Blade Runner'?

निम्नलिखित में से 'ब्लेड रनर' के नाम से कौन जाना जाता है ?

**Options:**

- 1) Usain Bolt  
उसैन बोल्ट
- 2) Oscar Carl Pistorious  
ऑस्कर कार्ल पिस्टोरियस
- 3) Carl Lewis  
कार्ल ल्यूईस
- 4) Ben Johnson  
बैन जॉनसन

**Correct Answer:** Oscar Carl Pistorious

ऑस्कर कार्ल पिस्टोरियस

**Candidate Answer:** Oscar Carl Pistorious

ऑस्कर कार्ल पिस्टोरियस

Question 50. FCRA administered by the Ministry of Home Affairs stands for \_\_\_\_\_?

ग्रह मंत्रालय द्वारा संचालित FCRA का विस्तृत रूप क्या है ?

**Options:**

- 1) Foreign Currency Regulation Act
- 2) Foreign Contribution Regulation Act
- 3) Foreign Contract Regulation Act
- 4) Foreign Cartel Restriction Act

**Correct Answer:** Foreign Contribution Regulation Act

**Candidate Answer:** Foreign Contract Regulation Act

Question 51. The product of two positive integers is 2048 and one of them is twice the other. Then the small of the number is

दो धनात्मक पूर्णांकों का गुणनफल 2048 है और उनमें से एक संख्या दूसरी संख्या से दोगुनी है। तो बताइये कि उनमें से छोटी संख्या कौन-सी है ?

**Options:**

- 1) 32
- 2) 64
- 3) 16
- 4) 1024

**Correct Answer:** 32

**Candidate Answer:** 32

Question 52. A and B can do a work in 8 days, B and C can do the same work in 12 days. A, B and C together can finish it in 6 days. A and C together will do it in :

A और B मिलकर किसी काम को 8 दिन में पूरा कर सकते हैं। B और C उसी काम को 12 दिन में कर सकते हैं। A, B और C मिलकर उसी काम को 6 दिन में पूरा कर सकते हैं। बताइये कि A और C मिलकर उसी काम को कितने दिन में समाप्त करेंगे ?

Qmaths.in  
SSC | IBPS | RAILWAYS | LIC | SIDBI

**Options:**

- 1) 4 days  
4 दिन
- 2) 6 days  
6 दिन
- 3) 8days  
8 दिन
- 4) 12 days  
12 दिन

**Correct Answer:** 8days

8 दिन

**Candidate Answer:** 8days

8 दिन

Question 53.The diagonal of a cuboid of length 5 cm, width 4 cm and height 3cm is

5 से.मी. लंबाई, 4 से.मी. चौड़ाई और 4 से.मी. ऊँचाई के षट्फलक का विकर्ण कितना होगा ?

**Options:**

- 1)  
 $5\sqrt{2}cm.$

 $5\sqrt{2}$  से.मी.

2)

 $2\sqrt{5}cm.$  $2\sqrt{5}$  से.मी.

3) 12 cm.

12 से.मी.

4) 10 cm.

10 से.मी.

**Correct Answer:** $5\sqrt{2}cm.$  $5\sqrt{2}$  से.मी.**Candidate Answer:** $5\sqrt{2}cm.$  $5\sqrt{2}$  से.मी.

Question 54.An article marked at Rs. 540 is sold at Rs. 496.80 in an off-season offer. Then the rate of descount offered (in percent) is

Rs. 540 अंकित मूल्य की कोई वस्तु ऑफ सीजन ऑफर में Rs. 496.80 में बेची जाती है तो दी गई छूट की दर कितनी ( प्रतिशत में ) होगी ?

**Options:**

- 1) 7
- 2) 7.5
- 3) 8
- 4) 10

**Correct Answer:** 8**Candidate Answer:** 8

Question 55.Three numbers are in the ratio 5:7:12. If the sum of the first and the third is greater than the second by 50.The sum of the three numbers is

तीन संख्याएँ 5:7:12 के अनुपात में हैं। यदि उनमें से पहली तथा तीसरी संख्याओं का योग, दूसरी संख्या से 50 अधिक हो, तो तीनों संख्याओं का योग कितना होगा ?

Qmaths.in  
SSC | IBPS | RAILWAYS | LIC | SIDBI

**Options:**

- 1) 125
- 2) 120
- 3) 95
- 4) 85

**Correct Answer:** 120**Candidate Answer:** 120

Question 56. The average age of 10 children is 9 years 9 months. The average of 9 children is 8 years 11 months. What is the age of the tenth child ?

10 बच्चों की औसत आयु 9 वर्ष 9 माह है। 9 बच्चों की औसत आयु 8 वर्ष 11 माह है। दसवें बच्चे की आयु कितनी है ?

**Options:**

- 1) 17 years 3 months  
17 वर्ष 3 माह
- 2) 18 years 4 months  
18 वर्ष 4 माह
- 3) 17 years 5 months  
17 वर्ष 5 माह
- 4) 18 years 3 months  
18 वर्ष 3 माह

**Correct Answer:** 17 years 3 months

17 वर्ष 3 माह

**Candidate Answer:** 17 years 3 months

17 वर्ष 3 माह

Question 57. Gopi goes from place A to B to buy an article costing 15% less at B. although he spends Rs. 150 on travelling, still he gains Rs. 150 compared to buying it at A. His profit percent is :

गोपी किसी वस्तु को खरीदने के लिए स्थान A से स्थान B तक जाता है क्योंकि स्थान B पर वह वस्तु 15% कम मूल्य पर मिलती है। यद्यपि आने-जाने में उसके Rs. 150 खर्च हो जाते हैं फिर भी स्थान A से उसे खरीदने की तुलना में उसे Rs. 150 का लाभ होता है। उसका लाभ प्रतिशत क्या है ?

**Options:**

- 1) 4.5
- 2) 6
- 3) 7.5
- 4) 8

**Correct Answer:** 7.5**Candidate Answer:** [ NOT ANSWERED ]

Question 58. If the income of Mohan is 150% higher than Mahesh, then by what percent the income of Mahesh is less than Mohan ?

यदि मोहन की आयु महेश से 150% अधिक हो तो बताइये कि महेश की आयु मोहन से कितने प्रतिशत कम है ?

**Options:**

- 1) 40%
- 2) 50%
- 3) 60%
- 4) 45%

**Correct Answer:** 60%**Candidate Answer:** [ NOT ANSWERED ]

Question 59. The length of a train and that of a platform are equal. If with a speed of 90 km/hr the train crosses the platform in one minute, then the length of the train (in meters) is

एक ट्रेन और प्लेटफार्म की लंबाई बराबर है। यदि ट्रेन 90 कि.मी./घंटा की गति से प्लेटफार्म को 1 मिनट में पार करती है तो ट्रेन की लंबाई ( मीटर में ) कितनी है?

**Options:**

- 1) 500
- 2) 600
- 3) 750
- 4) 900

**Correct Answer:** 750**Candidate Answer:** 750

Question 60. The simple interest on a certain sum of money for 7 years at 5% is Rs. 1600. If the compound interest at the same rate after 3 years interest compound annually, is

Downloaded from [www.qmaths.in](http://www.qmaths.in)

किसी धनराशि पर 5% पर 2 वर्ष का साधारण ब्याज Rs. 1600 है। वार्षिक चक्रवृद्धि ब्याज पर उसी दर पर 3 वर्ष के बाद चक्रवृद्धि ब्याज कितना होगा ?

**Options:**

- 1) Rs.2520
- 2) Rs.2522
- 3) Rs.2555
- 4) Rs.2535

**Correct Answer:** Rs.2522

**Candidate Answer:** Rs.2522

Question 61.

If  $x + \frac{1}{x} = \sqrt{3}$ , then the value of  $x^3 + \frac{1}{x^3}$  is equal to

यदि  $x + \frac{1}{x} = \sqrt{3}$ , तो  $x^3 + \frac{1}{x^3}$  का मान क्या होगा?

**Options:**

- 1) 1
- 2)  $3\sqrt{3}$
- 3) 0
- 4) 3

**Correct Answer:** 0

**Candidate Answer:** 0

Question 62.

If  $\frac{a}{b} + \frac{b}{a} = 1$ , Then are value of  $a^3 + b^3$  is equal to

Qmaths.in  
SSC | IBPS | RAILWAYS | LIC | SIDBI

यदि  $\frac{a}{b} + \frac{b}{a} = 1$ , तो  $a^3 + b^3$  का एक मान क्या होगा?

**Options:**

- 1) 0
- 2) 1
- 3) 2
- 4) 3

**Correct Answer:** 0

**Candidate Answer:** 0

Question 63.

If  $p^2 + q^2 = 7pq$ , Then the value of  $\frac{p}{q} + \frac{q}{p}$  is equal to

यदि  $p^2 + q^2 = 7pq$  तो  $\frac{p}{q} + \frac{q}{p}$  का मान क्या होगा?

**Options:**

- 1) 9
- 2) 5
- 3) 7
- 4) 3

**Correct Answer:** 7

**Candidate Answer:** 7

Visit [www.qmaths.in](http://www.qmaths.in) for tons of free study materials and latest exam updates.

Question 64. If  $x = 99$ , then the value of  $2(x^2 + 3x + 3)$  is equal to

यदि  $x = 99$  हो, तो  $2(x^2 + 3x + 3)$  का मान क्या होगा ?

**Options:**

1) 1000001

2) 1000000

3) 999999

4) 9999999

**Correct Answer:** 999999

**Candidate Answer:** 1000001

Question 65. The centroid of a triangle  $\Delta ABC$  is G. If the area of  $\Delta ABC = 72$  sq. units, then the area of  $\Delta BGC$  is

$\Delta ABC$  का केन्द्रक G है। यदि  $\Delta ABC = 72$  वर्ग यूनिट हो, तो  $\Delta BGC$  का क्षेत्रफल कितना होगा ?

**Options:**

1) 16 sq units

16 वर्ग यूनिट

2) 24 sq units

24 वर्ग यूनिट

3) 36 sq units

36 वर्ग यूनिट

4) 48 sq units

48 वर्ग यूनिट

**Correct Answer:** 24 sq units

24 वर्ग यूनिट

**Candidate Answer:** 24 sq units

24 वर्ग यूनिट

Question 66. In case of an acute angled triangle, its orthocentre lies

न्यूनकोणीय त्रिभुज में उसका लंबकेन्द्र कहाँ होगा ?

**Options:**

1) inside the triangle

त्रिभुज के अन्दर

2) outside the triangle

त्रिभुज के बाहर

3) on the triangle

त्रिभुज पर

4) on one of the vertex of the triangle

त्रिभुज के किसी एक शीर्ष पर

**Correct Answer:** inside the triangle

त्रिभुज के अन्दर

**Candidate Answer:** inside the triangle

त्रिभुज के अन्दर

Question 67. If  $\Delta PQR$  and  $\Delta LMN$  are similar and  $3PQ = LM$  and  $MN = 9$  cm, then QR is equal to :

यदि  $\Delta PQR$  और  $\Delta LMN$  समान हैं और  $3PQ = LM$  और  $MN = 9$  से.मी. हो, तो QR किसके बराबर होगा ?

**Options:**

1) 12 cm

12 से.मी.

2) 6 cm

6 से.मी.

3) 9 cm

9 से.मी.

4) 3 cm

3 से.मी.

**Correct Answer:** 3 cm

3 से.मी.

**Candidate Answer:** 3 cm

3 से.मी.

Question 68.

Downloaded from [www.qmaths.in](http://www.qmaths.in)

$AB$  is a chord of a circle with  $O$  as centre.  $C$  is a point on the circle such that.  $OC \perp AB$  and  $OC$  intersects  $AB$  at  $P$ .  
If  $PC = 2$  cm and  $AB = 6$  cm then the diameter of the circle is

AB, O केन्द्र वाले वृत्त की जीवा है। वृत्त पर बिन्दु C इस प्रकार है कि  $OC \perp AB$  और त्रिज्या OC जीवा AB को P पर काटती है। यदि  $PC = 2$  से.मी. और  $AB = 6$  से.मी. हो तो वृत्त का व्यास कितना है ?

**Options:**

- 1) 6 cm  
6 से.मी.
- 2) 6.5 cm  
6.5 से.मी.
- 3) 13 cm  
13 से.मी.
- 4) 12 cm  
12 से.मी.

**Correct Answer:** 6.5 cm  
6.5 से.मी.

**Candidate Answer:** 13 cm  
13 से.मी.

Question 69. If  $x^2 = \sin^2 30^\circ + 4 \cot^2 45^\circ - \sec^2 60^\circ$ , then the value of  $x$  ( $x > 0$ ) is

यदि  $x^2 = \sin^2 30^\circ + 4 \cot^2 45^\circ - \sec^2 60^\circ$  हो, तो  $x$  ( $x > 0$ ) का मान क्या है ?

**Options:**

- 1)  $-\frac{1}{2}$
- 2) 1
- 3) 0
- 4)  $\frac{1}{2}$

**Correct Answer:**  $\frac{1}{2}$

**Candidate Answer:**  $\frac{1}{2}$

Question 70. If  $7\sin^2\theta + 3\cos^2\theta = 4$  then the value of  $\sec\theta + \operatorname{cosec}\theta$  is

यदि  $7\sin^2\theta + 3\cos^2\theta = 4$  हो तो  $\sec\theta + \operatorname{cosec}\theta$  का मान क्या होगा ?

**Options:**

- 1)  $\frac{2}{\sqrt{3}} - 2$
- 2)  $\frac{2}{\sqrt{3}} + 2$
- 3)  $\frac{2}{\sqrt{3}}$

4) none of these

इनमें से कोई नहीं

**Correct Answer:**

$$\frac{2}{\sqrt{3}} + 2$$

**Candidate Answer:**

$$\frac{2}{\sqrt{3}} + 2$$

Question 71. An observer on the top of a mountain, 500 m above the sea level, observes the angles of depression of the two boats in his same place of vision to be  $45^\circ$  and  $30^\circ$  respectively. Then the distance between the boats, if the boats are on the same side of the mountain, is

एक प्रेक्षक समुन्द्र तल से 500 मी. ऊपर एक पहाड़ी चोटी के शीर्ष से अपने समान दृष्टि क्षेत्र में दो नौकाओं का अवनति कोण क्रमशः  $45^\circ$  और  $30^\circ$  देखता है। यदि दोनों नौकाएँ पहाड़ी की एक ही साइड में

हैं, तो उनके बीच की दूरी कितनी होगी ?

Visit [www.qmaths.in](http://www.qmaths.in) for tons of free study materials and latest exam updates.

**Options:**

- 1) 456 m  
456 मी.
- 2) 584 m  
584 मी.
- 3) 366 m  
366 मी.
- 4) 699 m  
699 मी.

**Correct Answer:** 366 m

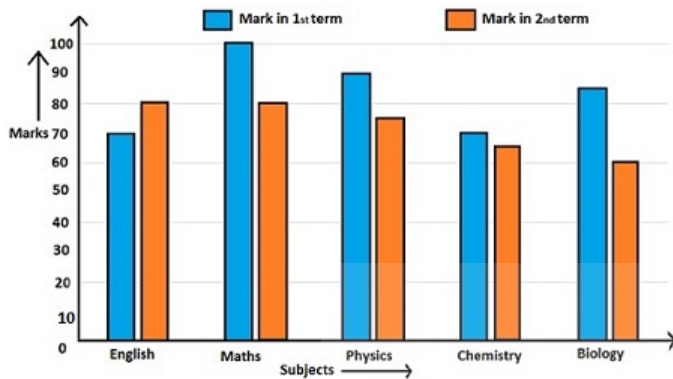
366 मी.

**Candidate Answer:** 366 m

366 मी.

Question 72. Study the bar diagram and answer the following questions.

बार रेखाचित्र का अध्ययन कीजिए और निम्नलिखित प्रश्नों के उत्तर दीजिए।



Average marks obtained in Physics for two terms is

दोनों क्षेत्रों में भौतिक शास्त्र में कितने प्रतिशत अंक प्राप्त हुए ?

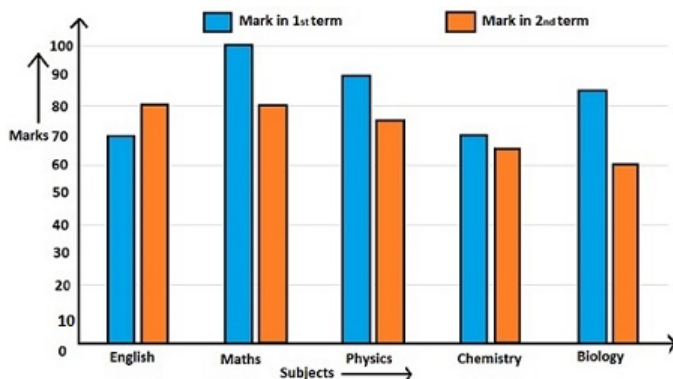
**Options:**

- 1) 80.5
- 2) 82.5
- 3) 72.5
- 4) 83.5

**Correct Answer:** 82.5**Candidate Answer:** 83.5

Question 73. Study the bar diagram and answer the following questions.

बार रेखाचित्र का अध्ययन कीजिए और निम्नलिखित प्रश्नों के उत्तर दीजिए।



Difference of marks obtained in both the terms by the students is maximum in

छात्रों द्वारा दोनों सत्रों में प्राप्त अंकों का अन्तर अधिकतम किस विषय में है ?

**Options:**

- 1) English  
अंग्रेजी
- 2) Physics  
भौतिक विज्ञान
- 3) Biology  
जीव विज्ञान
- 4) Mathematics  
गणित

**Correct Answer:** Biology

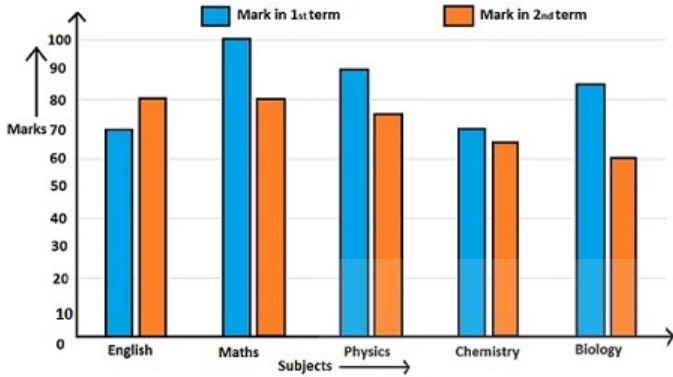
जीव विज्ञान

**Candidate Answer:** Biology

जीव विज्ञान

Question 74. Study the bar diagram and answer the following questions.

बार रेखाचित्र का अध्ययन कीजिए और निम्नलिखित प्रश्नों के उत्तर दीजिए।



What is the percentage of marks obtained in Chemistry for both the terms ?

दोनों सत्रों में रसायन विज्ञान में प्राप्तांकों का प्रतिशत कितना है ?

**Options:**

- 1) 76.5
- 2) 56.7
- 3) 75.6
- 4) 67.5

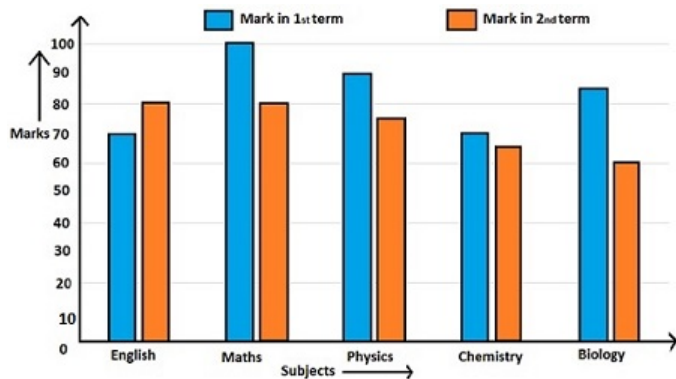
**Correct Answer:** 67.5**Candidate Answer:** 67.5



Question 75. Study the bar diagram and answer the following questions.

Downloaded from [www.qmaths.in](http://www.qmaths.in)

बार रेखाचित्र का अध्ययन कीजिए और निम्नलिखित प्रश्नों के उत्तर दीजिए।



The ratio of the average of the marks obtained in Biology for two terms to the average of the marks obtained in English and Mathematics for first term only is

दोनों सत्रों के जीव विज्ञान में प्राप्त औसत अंकों तथा केवल प्रथम सत्र में अंग्रेजी और गणित में प्राप्त औसत अंकों का अनुपात क्या है ?

**Options:**

- 1) 43:92
- 2) 39:42
- 3) 29:34
- 4) 23:94

**Correct Answer:** 29:34

**Candidate Answer:** 29:34

Question 76. In the following question, out of the four alternatives, choose the word which best expresses the meaning of the given word and click the button corresponding to it.

VENIAL

**Options:**

- 1) CORRUPT
- 2) SUPERFICIAL
- 3) RESPECTED
- 4) PARDONABLE

**Correct Answer:** PARDONABLE

**Candidate Answer:** PARDONABLE

Qmaths.in  
SSC | IBPS | RAILWAYS | LIC | SIDBI

Question 77. In the following question, out of the four alternatives, choose the word which is opposite in meaning to the given word and click the button corresponding to it.

DIFFIDENT

**Options:**

- 1) SHY
- 2) BRAVE
- 3) CONFIDENT
- 4) MEEK

**Correct Answer:** CONFIDENT

**Candidate Answer:** BRAVE

Question 78. Four words are given, out of which only one word is spelt correctly. Choose the correctly spelt word and click the button corresponding to it.

**Options:**

- 1) Monolouge
- 2) Monologue
- 3) Monologe
- 4) Monolouge

**Correct Answer:** Monologue

**Candidate Answer:** Monologue

Question 79. In the following questions, one part of the sentence may have an error. Find out which part of the sentence has an error and click the button corresponding to it. If the sentence is free from error, click the "No error" option.

We must go (A) / and congratulate him for (B) / his brilliant success (C) / No Error (D)

**Options:**

- 1) A
- 2) B
- 3) C
- 4) D

**Correct Answer:** B

Visit [www.qmaths.in](http://www.qmaths.in) for tons of free study materials and latest exam updates.

Candidate Answer: D

Downloaded from [www.qmaths.in](http://www.qmaths.in)

Question 80. In the following questions, one part of the sentence may have an error. Find out which part of the sentence has an error and click the button corresponding to it. If the sentence is free from error, click the "No error" option.

My brother (A) / along with his friends (B) / are going on a tour (C) / No error (D)

**Options:**

- 1) A
- 2) B
- 3) C
- 4) D

**Correct Answer:** C**Candidate Answer:** C

Question 81. In the following questions, one part of the sentence may have an error. Find out which part of the sentence has an error and click the button corresponding to it. If the sentence is free from error, click the "No error" option.

You have prepared well (A) / for the examination (B) / isn't it ? (C) / No error (D)

**Options:**

- 1) A
- 2) B
- 3) C
- 4) D

**Correct Answer:** C**Candidate Answer:** C

Question 82. The sentences given with blanks are to be filled with an appropriate word(s). Four alternatives are suggested for each question. For each question, choose the correct alternative and click the button corresponding to it.

What good fortune! I found the very thing I was \_\_\_\_\_!

**Options:**

- 1) looking in
- 2) looking to
- 3) looking besides
- 4) looking for

**Correct Answer:** looking for**Candidate Answer:** looking for

Question 83. The sentences given with blanks are to be filled with an appropriate word(s). Four alternatives are suggested for each question. For each question, choose the correct alternative and click the button corresponding to it.

The swimmer \_\_\_\_\_ his clothes and jumped into the river.

**Options:**

- 1) took off
- 2) took of
- 3) took out
- 4) took down

**Correct Answer:** took off**Candidate Answer:** took out

Question 84. The sentences given with blanks are to be filled with an appropriate word(s). Four alternatives are suggested for each question. For each question, choose the correct alternative and click the button corresponding to it.

I will \_\_\_\_\_ to Singapore next month.

**Options:**

- 1) be travelling
- 2) be travel
- 3) travels
- 4) am travelled

**Correct Answer:** be travelling**Candidate Answer:** be travelling

Question 85. In each of the questions, four alternatives are given for the Idiom/Phrase. Choose the alternative which best expresses the meaning of the Idiom/Phrase and click the button corresponding to it.

Made light of

**Options:**

- 1) Did not hear
- 2) Treated it lightly
- 3) Blew away
- 4) Carried with him

**Correct Answer:** Treated it lightly**Candidate Answer:** Did not hear

Visit [www.qmaths.in](http://www.qmaths.in) for tons of free study materials and latest exam updates.

Question 86. In each of the questions, four alternatives are given for the Idiom/Phrase. Choose the alternative which best expresses the meaning of the Idiom/Phrase and click the button corresponding to it.

Every inch a gentleman

**Options:**

- 1) Somewhat
- 2) Partly
- 3) Entirely
- 4) Calculatively

**Correct Answer:** Entirely

**Candidate Answer:** Entirely

Question 87. In each of the questions, four alternatives are given for the Idiom/Phrase. Choose the alternative which best expresses the meaning of the Idiom/Phrase and click the button corresponding to it.

Gall and wormwood

**Options:**

- 1) A problem
- 2) Hateful
- 3) Useless
- 4) Hard to digest

**Correct Answer:** Hateful

**Candidate Answer:** Hard to digest

Question 88. Out of the four alternatives, choose the one which can be substituted for the given words/sentences and click the button corresponding to it.

A rough, violent, troublesome person.

**Options:**

- 1) Tartar
- 2) Talker
- 3) Vagabond
- 4) Swindler

**Correct Answer:** Tartar

**Candidate Answer:** Vagabond

Question 89. Out of the four alternatives, choose the one which can be substituted for the given words/sentences and click the button corresponding to it.

A brave, noble-minded or chivalrous man

**Options:**

- 1) Handsome
- 2) Robust
- 3) Gallant
- 4) Reckless

**Correct Answer:** Gallant

**Candidate Answer:** Robust

Question 90. Out of the four alternatives, choose the one which can be substituted for the given words/sentences and click the button corresponding to it.

Obsession with books

**Options:**

- 1) Bibliomania
- 2) Megalomania
- 3) Xenophobia
- 4) Ego mania

**Correct Answer:** Bibliomania

**Candidate Answer:** Bibliomania

Question 91. A sentence/a part of the sentence is underlined. Four alternatives are given to the underlined part which will improve the sentence. Choose the correct alternative and click the button corresponding to it. In case no improvement is needed, click the button corresponding to "No improvement".

The farmers work at the fields

**Options:**

- 1) on the fields
- 2) through the fields
- 3) in the fields
- 4) No improvement

**Correct Answer:** in the fields

**Candidate Answer:** on the fields

Question 92. A sentence/a part of the sentence is underlined. Four alternatives are given to the underlined part which will improve the sentence. Choose the correct alternative and click the button corresponding to it. In case no improvement is needed, click the button corresponding to "No improvement".

The boss impatiently told him to get up with his work.

**Options:**

- 1) to get on
- 2) to get by
- 3) to get under
- 4) No improvement

**Correct Answer:** to get on

**Candidate Answer:** to get on

Question 93. A sentence/a part of the sentence is underlined. Four alternatives are given to the underlined part which will improve the sentence. Choose the correct alternative and click the button corresponding to it. In case no improvement is needed, click the button corresponding to "No improvement".

The judges remarked on the high standard of entries for the competition.

**Options:**

- 1) remarked of
- 2) remarked at
- 3) remarked over
- 4) No improvement

**Correct Answer:** No improvement

**Candidate Answer:** remarked at

Question 94. A sentence/a part of the sentence is underlined. Four alternatives are given to the underlined part which will improve the sentence. Choose the correct alternative and click the button corresponding to it. In case no improvement is needed, click the button corresponding to "No improvement".

He did not know how to solve the problem and I did not either.

**Options:**

- 1) neither do I
- 2) neither did I
- 3) either did I
- 4) No improvement

**Correct Answer:** neither did I

**Candidate Answer:** neither did I

Question 95. A sentence/a part of the sentence is underlined. Four alternatives are given to the underlined part which will improve the sentence. Choose the correct alternative and click the button corresponding to it. In case no improvement is needed, click the button corresponding to "No improvement".

It is a place far of here.

**Options:**

- 1) far by here
- 2) far from here
- 3) far away here
- 4) No improvement

**Correct Answer:** far from here

**Candidate Answer:** far from here

Question 96. A passage is given with 5 questions following it. Read the passage carefully and choose the best answer to each question out of the four alternatives and click the button corresponding to it.

Mary Garden, a noted opera singer, earned a great deal of money during her career, but was constantly bothered by the demands of her father for money - and always in large sums.

Miss Garden would always give it to him, though often she would often complain that his requests seemed somewhat unreasonable. To this the stock reply was that he needed the money for a very special project. She was not going to refuse her father, was she ?

During the depression Miss Garden, like many others, lost her money in the stock market crash. Shortly afterward, her father died, and, much to her surprise, she was notified that he had left a large bank account in her name. He had saved for her every cent she had given him.

The demands God makes on us may seem hard at times. But all the while He is actually helping us to store up an 'eternal bank account' in heaven - one which may balance the scales in our favour when we least expect it. Troubles are often the instruments by which God fashions us for better things.

Mary's father made demands for \_\_\_\_\_

**Options:**

- 1) a small sum of money
- 2) large sums of money
- 3) no money
- 4) a reasonable sum of money

**Correct Answer:** large sums of money

**Candidate Answer:** large sums of money

Question 97. A passage is given with 5 questions following it. Read the passage carefully and choose the best answer to each question out of the four alternatives and click the button corresponding to it.

Mary Garden, a noted opera singer, earned a great deal of money during her career, but was constantly bothered by the demands of her father for money - and always in large sums.

Miss Garden would always give it to him, though often she would often complain that his requests seemed somewhat unreasonable. To this the stock reply was that he needed the money for a very special project. She was not going to refuse her father, was she ?

During the depression Miss Garden, like many others, lost her money in the stock market crash. Shortly afterward, her father died, and, much to her surprise, she was notified that he had left a large bank account in her name. He had saved for her every cent she had given him.

The demands God makes on us may seem hard at times. But all the while He is actually helping us to store up an 'eternal bank account' in heaven - one which may balance the scales in our favour when we least expect it. Troubles are often the instruments by which God fashions us for better things.

Mary \_\_\_\_\_ to the demands of her father.

**Options:**

- 1) could not refuse to pay any attention
- 2) wanted to refuse to pay any attention
- 3) finally refused to pay any attention
- 4) initially refused to pay any attention

**Correct Answer:** could not refuse to pay any attention

**Candidate Answer:** could not refuse to pay any attention

Question 98. A passage is given with 5 questions following it. Read the passage carefully and choose the best answer to each question out of the four alternatives and click the button corresponding to it.

Mary Garden, a noted opera singer, earned a great deal of money during her career, but was constantly bothered by the demands of her father for money - and always in large sums.

Miss Garden would always give it to him, though often she would often complain that his requests seemed somewhat unreasonable. To this the stock reply was that he needed the money for a very special project. She was not going to refuse her father, was she ?

During the depression Miss Garden, like many others, lost her money in the stock market crash. Shortly afterward, her father died, and, much to her surprise, she was notified that he had left a large bank account in her name. He had saved for her every cent she had given him.

The demands God makes on us may seem hard at times. But all the while He is actually helping us to store up an 'eternal bank account' in heaven - one which may balance the scales in our favour when we least expect it. Troubles are often the instruments by which God fashions us for better things.

Mary's father had \_\_\_\_\_ all the money he took from her.

**Options:**

- 1) gambled
- 2) wasted
- 3) invested
- 4) saved

**Correct Answer:** saved

**Candidate Answer:** saved

Question 99. A passage is given with 5 questions following it. Read the passage carefully and choose the best answer to each question out of the four alternatives and click the button corresponding to it.

Mary Garden, a noted opera singer, earned a great deal of money during her career, but was constantly bothered by the demands of her father for money - and always in large sums.

Miss Garden would always give it to him, though often she would often complain that his requests seemed somewhat unreasonable. To this the stock reply was that he needed the money for a very special project. She was not going to refuse her father, was she ?

During the depression Miss Garden, like many others, lost her money in the stock market crash. Shortly afterward, her father died, and, much to her surprise, she was notified that he had left a large bank account in her name. He had saved for her every cent she had given him.

The demands God makes on us may seem hard at times. But all the while He is actually helping us to store up an 'eternal bank account' in heaven - one which may balance the scales in our favour when we least expect it. Troubles are often the instruments by which God fashions us for better things.

During the depression Mary \_\_\_\_\_ in the stock market.

**Options:**

- 1) lost no money at all
- 2) lost her money
- 3) lost some money
- 4) lost lot of money

**Correct Answer:** lost her money

**Candidate Answer:** lost her money

Question 100. A passage is given with 5 questions following it. Read the passage carefully and choose the best answer to each question out of the four alternatives and click the button corresponding to it.

Mary Garden, a noted opera singer, earned a great deal of money during her career, but was constantly bothered by the demands of her father for money - and always in large sums.

Miss Garden would always give it to him, though often she would often complain that his requests seemed somewhat unreasonable. To this the stock reply was that he needed the money for a very special project. She was not going to refuse her father, was she ?

During the depression Miss Garden, like many others, lost her money in the stock market crash. Shortly afterward, her father died, and, much to her surprise, she was notified that he had left a large bank account in her name. He had saved for her every cent she had given him.

The demands God makes on us may seem hard at times. But all the while He is actually helping us to store up an 'eternal bank account' in heaven - one which may balance the scales in our favour when we least expect it. Troubles are often the instruments by which God fashions us for better things.

God at times, makes hard demands so that He \_\_\_\_\_ when we least expect it.

**Options:**

- 1) can balance the scales against us
- 2) can balance the scales in our favour
- 3) can harm us
- 4) can refuse to assist us

**Correct Answer:** can balance the scales in our favour

**Candidate Answer:** can balance the scales in our favour

