



**Staff Selection Commission**  
(Government Of India)

**REGISTRATION NUMBER : qmaths.in**  
**EXAM DATE : 29-August-2016**  
**EXAM NAME : SSC Examination 2016**  
**TOTAL MARKS : 200**

**CANDIDATE NAME : qmaths.in**  
**EXAM START TIME : 10:00:00**  
**EXAM DURATION : 01:15 Hrs**  
**TOTAL NO OF QUESTIONS : 100**

Question 1. Select the related word/letters/number from the given alternatives.

दिये गये विकल्पों में से संबंधित शब्द/अक्षरों/संख्या को चुनिए।

Foot : Man :: Hoof : ?

एडी: आदमी :: खूर : ?

**Options:**

- 1) Leg  
पैर
- 2) Dog  
कुत्ता
- 3) Horse  
घोड़ा
- 4) Shoe  
जूता

**Correct Answer:** Horse

घोड़ा

**Candidate Answer:** Horse

घोड़ा

Question 2. Select the related word/letters/number from the given alternatives.

दिये गये विकल्पों में से संबंधित शब्द/अक्षरों/संख्या को चुनिए।

ACEG : ZXVT :: IKMO : ?

**Options:**

- 1) MNOP
- 2) PQRS
- 3) RPNL
- 4) LNPR

**Correct Answer:** RPNL

**Candidate Answer:** RPNL

Question 3. Select the related word/letters/number from the given alternatives.

दिये गये विकल्पों में से संबंधित शब्द/अक्षरों/संख्या को चुनिए।

68 : 130 :: 222 : ?

**Options:**

- 1) 345
- 2) 365
- 3) 355
- 4) 350

**Correct Answer:** 350

**Candidate Answer:** [ NOT ANSWERED ]

Question 4.

**For the following questions**

Find the odd word/letters/number pair from the given alternatives

दिए गए विकल्पों में से विषम शब्द/संख्या/अक्षर युग्म चुनिए।

**Options:**

1) MARCH

2) MAY

3) JUNE

4) DECEMBER

**Correct Answer:** JUNE

**Candidate Answer:** JUNE

Question 5.

**For the following questions**

Find the odd word/letters/number pair from the given alternatives

दिए गए विकल्पों में से विषम शब्द/ संख्या/ अक्षर युग्म चुनिए।

**Options:**

1) CZHK

2) SENO

3) XUBU

4) MLAG

**Correct Answer:** XUBU

**Candidate Answer:** XUBU

Question 6.

**For the following questions**

Find the odd word/letters/number pair from the given alternatives

दिए गए विकल्पों में से विषम शब्द/ संख्या/ अक्षर युग्म चुनिए।

**Options:**

1) 1 : 8

2) 27 : 64

3) 125 : 218

4) 323 : 512

**Correct Answer:** 125 : 218

**Candidate Answer:** 125 : 218

Question 7. Arrange the following words as per order in the dictionary

निम्नलिखित शब्दों को शब्दकोश में दिए गए क्रम के अनुसार लिखिए।

1. Follicle 2. Folk 3. Follow 4. Foliage

**Options:**

1) 4, 2, 1, 3

2) 3, 4, 2, 1

3) 4, 3, 1, 2

4) 2, 4, 3, 1

**Correct Answer:** 4, 2, 1, 3

**Candidate Answer:** 4, 2, 1, 3

Question 8. A series is given, with one term missing. Choose the correct alternative from the given ones that will complete the series.

नीचे एक श्रृंखला दी गई है, जिसमें एक पद लुप्त है। दिए गए विकल्पों में से वह सही विकल्प चुनिए जो अनुक्रम को पूरा करे।

8, 15, 28, 53, ?

Options:

1) 106

2) 100

3) 108

4) 102

Correct Answer: 102

Candidate Answer: 102

Question 9. A series is given, with one term missing. Choose the correct alternative from the given ones that will complete the series.

नीचे एक श्रृंखला दी गई है, जिसमें एक पद लुप्त है। दिए गए विकल्पों में से वह सही विकल्प चुनिए जो अनुक्रम को पूरा करे।

WFB, TGD, QHG, ?

Options:

1) NIL

2) NIK

3) NLK

4) NJL

Correct Answer: NIK

Candidate Answer: NIK

Question 10. The average age of 19 boys in a class is 21 years. If the teacher's age is included, the average increases to 22 years. What is the teacher's age?

एक कक्षा में 19 लड़कों की औसत आयु 21 वर्ष है। यदि अध्यापक की आयु भी शामिल की जाए तो वह बढ़कर 22 वर्ष हो जाती है। अध्यापक की आयु कितनी है ?

Options:

1) 39 years

39 वर्ष

2) 41 years

41 वर्ष

3) 40 years

40 वर्ष

4) 44 years

44 वर्ष

Correct Answer: 41 years

41 वर्ष

Candidate Answer: 41 years

41 वर्ष

Qmaths.in  
SSC | IBPS | RAILWAYS | LIC | SIDBI

Question 11. A man is 3 years older than his wife and four times as old as his son. If the son becomes 15 years old after 3 years. Then what is the present age of the wife?

एक आदमी अपनी पत्नी से 3 वर्ष बड़ा है और उसकी उम्र अपने बेटे की 4 गुना है। अगर बेटा 3 साल के बाद 15 वर्ष का हो जाता है, तो उसकी पत्नी की वर्तमान उम्र क्या है ?

Options:

1) 60 years

60 वर्ष

2) 51 years

51 वर्ष

3) 48 years

48 वर्ष

4) 45 years

45 वर्ष

Correct Answer: 45 years

45 वर्ष

Candidate Answer: 45 years

45 वर्ष

Question 12. From the given alternative words, select the word which can not be formed using the letter of the given word:

निम्नलिखित विकल्पों में से वह शब्द चुनिए जो दिए गए शब्द के अक्षरों का प्रयोग करके नहीं बनाया जा सकता है।

UNIVERSALISATION

Options:

1) NATION

2) CURTAIN

3) LIVER

4) AVIATION

Correct Answer: CURTAIN

Question 13.If FRIEND is coded as HTKGPf then REVEAL will be coded as:

यदि एक कोड में 'FRIEND' को 'HTKGPf' लिखा जाता है, तो उस कोड में 'REVEAL' को क्या लिखा जायेगा ?

**Options:**

- 1) TGXFCN
- 2) TGXNGC
- 3) TXGNCG
- 4) TGXGCN

**Correct Answer:** TGXGCN

**Candidate Answer:** TGXGCN

Question 14.Which of the following interchange of signs would make the equation correct?

निम्नलिखित में से किन चिन्हों को आपस में बदलने से समीकरण सही हो जाएगी ?

$$5 + 3 \times 8 - 12 \div 4 = 3$$

**Options:**

- 1) - and  $\div$
- 2) + and  $\times$
- 3) + and  $\div$
- 4) + and -

**Correct Answer:** - and  $\div$

**Candidate Answer:** - and  $\div$

Question 15.Select the correct combination of mathematical signs to replace \* signs and to balance the equation.

समीकरण को संतुलित करने के लिए \* को किस गणितीय चिन्हों के संयोजन से परिवर्तित किया जाएगा।

$$48 * 4 * 6 * 3 * 30$$

**Options:**

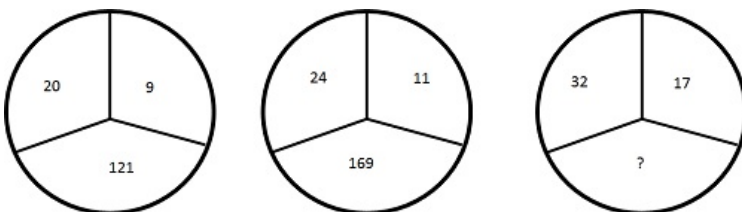
- 1) -, +, =,  $\times$
- 2)  $\div$ , =,  $\times$ , +
- 3)  $\div$ , +,  $\times$ , =
- 4) -, =,  $\times$ , +

**Correct Answer:**  $\div$ , +,  $\times$ , =

**Candidate Answer:**  $\div$ , +,  $\times$ , =

Question 16.Find the missing number from the alternatives

दिए गए विकल्पों में से लुप्त पद ज्ञात कीजिए ?



**Options:**

- 1) 125
- 2) 175
- 3) 225
- 4) 250

**Correct Answer:** 225

**Candidate Answer:** 225

Question 17.Starting from a point, a person travels 3 km towards east and turns left and travels 4 km. Then again he turns to left by  $45^\circ$  and moves straight. Which direction is he facing now?

किसी स्थान से चलना शुरू कर एक आदमी 3 कि.मी. पूर्व की ओर जाता है और बाएँ मुड़कर 4 कि.मी. जाता है। फिर वह बाएँ  $45^\circ$  मुड़कर सीधे चलता है। अब उसका मुँह किस दिशा की ओर है ?

**Options:**

- 1) North-East  
उत्तर-पूर्व
- 2) North-West  
उत्तर- पश्चिम
- 3) South-East  
दक्षिण- पश्चिम
- 4) South-West  
दक्षिण- पश्चिम

**Correct Answer:** North-West

उत्तर- पश्चिम

**Candidate Answer:** North-West

उत्तर- पश्चिम

Question 18. Consider the given statement/s to be true and decide which of the given conclusions/assumptions can definitely be drawn from the given statement.

Statement: If he works hard he will be successful in life.

Conclusions: I. He is a hard worker.

Conclusions: II. Hard work pays

निम्नलिखित प्रश्न में एक या दो वक्तव्य दिये गये हैं, जिसके आगे दो निष्कर्ष/मान्यताएं, I और II निकाले गये हैं। आपको विचार करना है कि वक्तव्य सत्य है चाहे वह सामान्यतः शर्त तथ्यों से भिन्न प्रतीत होता हो। आपको निर्णय करना है कि दिए गए वक्तव्य में से कोन-सा निश्चित रूप से सही निष्कर्ष/मान्यता निकाला जा सकता है ?

वक्तव्य : अगर वह कठोर परिश्रम करेगा तो वह जिन्दगी में सफल हो जायेगा।

निष्कर्ष 1 : वह कठोर परिश्रम करने वाला व्यक्ति है।

निष्कर्ष 2 : कठोर परिश्रम फल देता है

**Options:**

- 1) Both I and II follow  
दोनों I और II निष्कर्ष सही है
- 2) Only I follows  
केवल निष्कर्ष I सही है
- 3) Only II follows  
केवल निष्कर्ष II सही है
- 4) Neither I nor II follow  
ना तो निष्कर्ष I सही है और ना ही निष्कर्ष II

**Correct Answer:** Only II follows

केवल निष्कर्ष II सही है

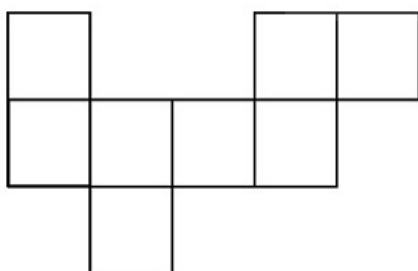
**Candidate Answer:** Only II follows

केवल निष्कर्ष II सही है

Qmaths.in

Question 19. How many rectangles can you see in the figure?

दिये गये चित्र में कितने आयत हैं?



**Options:**

- 1) 9
- 2) 8
- 3) 10
- 4) 7

**Correct Answer:** 9

**Candidate Answer:** 7

Question 20. Identify the diagram that best represents the relationship among classes given below

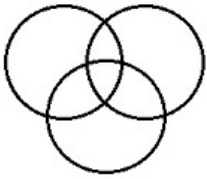
Tennis fans, Cricket players, Students

दिए गए विकल्पों में से वह सही विकल्प चुनिए जो अनुक्रम को पूरा करें --

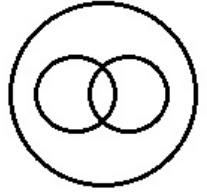
टेनिस प्रशंसक, क्रिकेट खिलाड़ी, विद्यार्थी

Options:

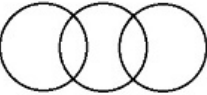
1)



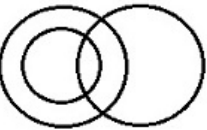
2)



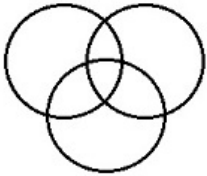
3)



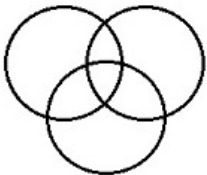
4)



Correct Answer:



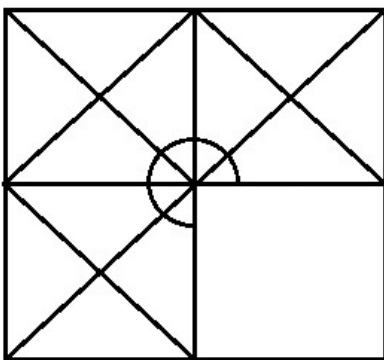
Candidate Answer:



Qmaths.in  
SSC | IBPS | RAILWAYS | LIC | SIDBI

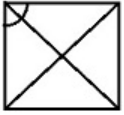
Question 21. Which answer figure will complete the pattern in the question figure?

कौन-सी उत्तर आकृति प्रश्न आकृति के प्रतिरूप को पूरा करेगी ?

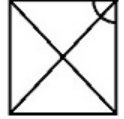


Options:

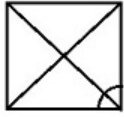
1)



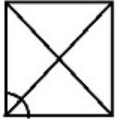
2)



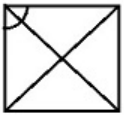
3)



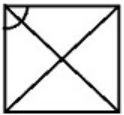
4)



Correct Answer:

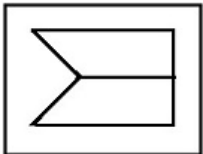


Candidate Answer:



Question 22. From the given answer figures, select the one in which the question figure is hidden/embedded.

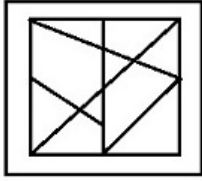
दी गई उत्तर आकृतियों में से उस आकृति को चुनिए जिसमें प्रश्न आकृति निहित है।



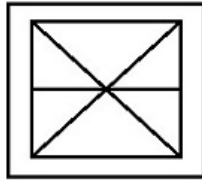
Qmaths.in  
RAILWAYS | LIC | SIDBI

Options:

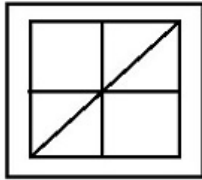
1)



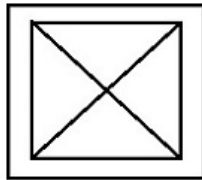
2)



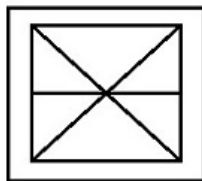
3)



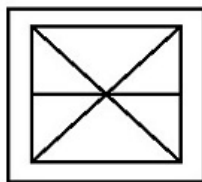
4)



Correct Answer:



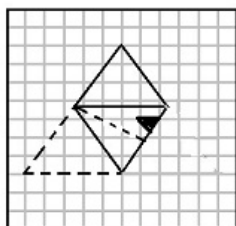
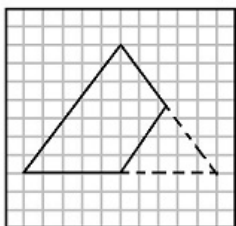
Candidate Answer:



Qmaths.in  
SSC | IBPS | RAILWAYS | LIC | SIDBI

Question 23. A piece of paper is folded and cut as shown below in the question figures. From the given answer figures, indicate how it will appear when opened.

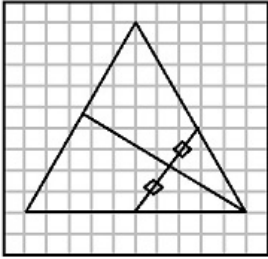
नीचे निचे दी गई आकृति के कागज को जैसे दिखाए गये हैं उस तरह मोड़कर, काटने तथा खोलने के बाद वह किस उत्तर आकृति जैसा दिखाई देगा?



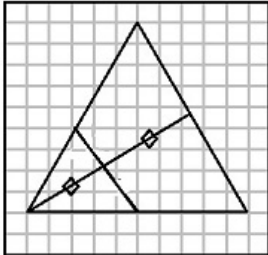


Options:

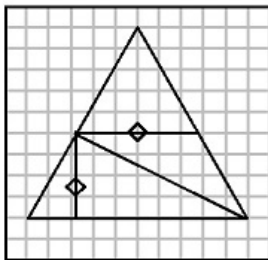
1)



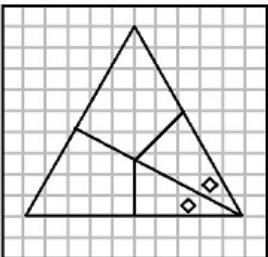
2)



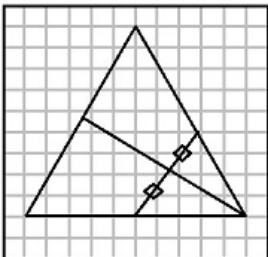
3)



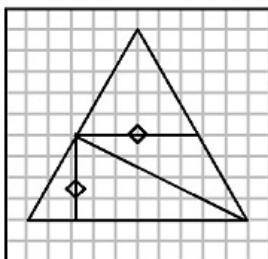
4)



Correct Answer:



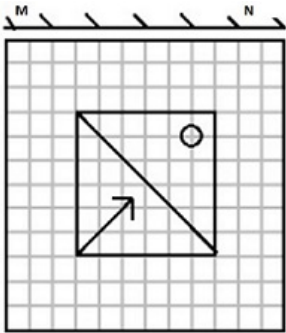
Candidate Answer:



Qmaths.in  
SSC | IBPS | RAILWAYS | LIC | SIDBI

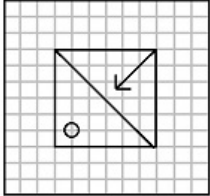
Question 24. If a mirror is placed on the line MN in the figure, how will the figure in the mirror appear?

यदि एक दर्पण को MN रेखा पर रखा जाए तो दी गई उत्तर आकृतियों में से कौनसी आकृति प्रश्न आकृति का सही प्रतिबिम्ब होगी ?

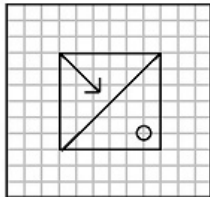


Options:

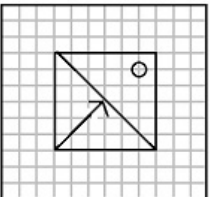
1)



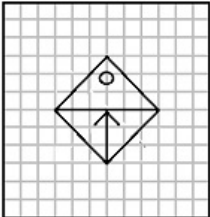
2)



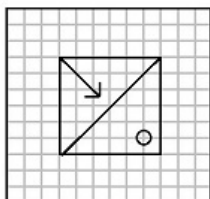
3)



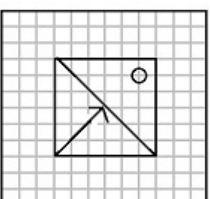
4)



Correct Answer:



Candidate Answer:



Qmaths.in  
SSC | IBPS | RAILWAYS | LIC | SIDBI

Question 25. In the question, a word is represented by two classes of alphabets as in two matrices given below. The columns and rows of Matrix I are numbered from 0 to 4 and that of Matrix II are numbered from 5 to 9. A letter from these matrices can be represented first by its row and next by its column, e.g., 'A' can be represented by 02, 31, etc., and 'K' can be represented by 33, 78, etc.

Similarly you have to identify the set for the word 'REST'

निम्नलिखित प्रश्न में विकल्पों में दिए गए संख्या-समूह, अक्षरों के दो वर्गों द्वारा दर्शाए गए हैं, जैसे कि नीचे दिए गए दो आव्यूहों में हैं। आव्यूह I के स्तम्भ और पंक्ति की संख्या 0 से 4 तक दी गई है, और आव्यूह II के 5 से 9 तक, इन आव्यूहों से एक अक्षर को पहले उसकी पंक्ति और बाद में स्तम्भ संख्या द्वारा दर्शाया जा सकता है। उदाहरण के लिए 'A' को 02, 31 आदि द्वारा दर्शाया जा सकता है तथा 'K' को 33, 78 आदि द्वारा दर्शाया जा सकता है। इसी तरह से आपको दिए हुए शब्द 'REST' के लिए समूह को पहचानना है।

MATRIX - I					MATRIX - II						
	0	1	2	3	4		5	6	7	8	9
0	T	R	A	F	E	5	E	S	A	F	R
1	O	C	M	P	O	6	A	R	O	S	C
2	E	S	R	T	A	7	T	O	E	P	S
3	M	A	N	P	C	8	S	M	T	A	N
4	E	T	F	N	R	9	R	C	T	F	E

**Options:**

1) 22, 20, 79, 99

2) 66, 77, 68, 23

3) 44, 77, 24, 87

4) 22, 77, 79, 76

**Correct Answer:** 66, 77, 68, 23

**Candidate Answer:** 66, 77, 68, 23

Question 26. In a Parliamentary form of Government \_\_\_\_\_

संसदीय स्वरूप की सरकार में \_\_\_\_\_

**Options:**

1) The Legislature is responsible to the Judiciary  
विधानमंडल न्यायपालिका के प्रति उत्तरदायी होता है।

2) The Executive is responsible to the Legislature.  
कार्यपालिका विधानमंडल के प्रति उत्तरदायी होती है।

3) The Legislature is responsible to the Executive  
विधानमंडल कार्यपालिका के प्रति उत्तरदायी होता है।

4) The Judiciary is responsible to the Legislature  
न्यायपालिका विधानमंडल के प्रति उत्तरदायी होती है।

**Correct Answer:** The Executive is responsible to the Legislature.

कार्यपालिका विधानमंडल के प्रति उत्तरदायी होती है।

**Candidate Answer:** [ NOT ANSWERED ]

Question 27. Which of the following statements is correct about the President of India ?

भारत के राष्ट्रपति के सम्बन्ध में निम्नलिखित में से कौन-सा कथन सही है ?

**Options:**

1) Addresses first session of Parliament after each General Election.  
प्रत्येक आम चुनावों के पश्चात वह संसद के प्रथम सत्र को संबोधित करते हैं।

2) Addresses first session of Parliament at the beginning of each year  
प्रत्येक वर्ष के आरम्भ में संसद के प्रथम सत्र को संबोधित करते हैं।

3) Addresses every session of Parliament  
संसद के प्रत्येक सत्र को संबोधित करते हैं।

4) Never addresses Parliament  
संसद को कभी संबोधित नहीं करते।

**Correct Answer:** Addresses first session of Parliament after each General Election.

प्रत्येक आम चुनावों के पश्चात वह संसद के प्रथम सत्र को संबोधित करते हैं।

**Candidate Answer:** [ NOT ANSWERED ]

Question 28. Which of the following periodicals is not correctly matched with its editor?

निम्नलिखित में से कौन-सी पत्रिका का उसके संपादक से सही मिलान नहीं हुआ है ?

**Options:**

- 1) Bande Mataram:Aurobindo Ghosh  
बंदे मातरम : अरबिन्दो घोष
- 2) New India:Bipin Chandra Pal  
न्यू इंडिया : बिपिन चन्द्र पाल
- 3) Yugantar:Bhupendranath Dutta  
युगांतर : भुपेन्द्रनाथ दत्ता
- 4) Sandhya:Barindra Ghosh  
संध्या : बरिन्द्र घोष

**Correct Answer:** Sandhya:Barindra Ghosh  
संध्या : बरिन्द्र घोष

**Candidate Answer:** New India:Bipin Chandra Pal  
न्यू इंडिया : बिपिन चन्द्र पाल

Question 29.Silk worms feed on

रेशम के कीड़े किन पर पलते हैं ?

**Options:**

- 1) Basil leaves  
तुलसी के पत्ते
- 2) Curry leaves  
करी के पत्ते
- 3) Rose leaves  
गुलाब के पत्ते
- 4) Mulberry leaves  
मलबरी (शहतूत) के पत्ते

**Correct Answer:** Mulberry leaves  
मलबरी (शहतूत) के पत्ते

**Candidate Answer:** Mulberry leaves  
मलबरी (शहतूत) के पत्ते

Question 30.Who among the following has been appointed the new Coach of the Indian Cricket team by the BCCI recently?

बी.सी.सी.आई. द्वारा हाल ही में निम्नलिखित में से किसे भारतीय क्रिकेट टीम का कोच नियुक्त किया गया है ?

**Options:**

- 1) Saurav Ganguly  
सौरव गांगुली
- 2) Anil Kumble  
अनिल कुम्बले
- 3) Rahul Dravid  
राहुल द्रविड
- 4) S. R. Kulkarni  
एस. आर. कुलकर्णी

**Correct Answer:** Anil Kumble  
अनिल कुम्बले

**Candidate Answer:** Anil Kumble  
अनिल कुम्बले

Question 31.What is the product formed when sodium bicarbonate is heated strongly?

जब सोडियम बाइकार्बोनेट को अत्यधिक गर्म किया जाता है तो क्या उत्पाद बनता है ?

**Options:**

- 1) Sodium Carbonate  
सोडियम कार्बोनेट
- 2) Sodium Hydroxide  
सोडियम हाइड्रॉक्साइड
- 3) Sodium Peroxide  
सोडियम पेरोक्साइड
- 4) Sodium Monoxide  
सोडियम मोनोक्साइड

**Correct Answer:** Sodium Carbonate  
सोडियम कार्बोनेट

**Candidate Answer:** [ NOT ANSWERED ]

Question 32.Mission Indradhanush - a programme introduced recently in the country by the NDA Government is related to:

देश में हाल ही में राजग (एनडीए) सरकार द्वारा शुरू किया गया प्रोग्राम "इन्द्रधनुष मिशन" किससे संबंधित है ?

**Options:**

- 1) Systematic immunization of children against disease  
कुछ रोगों के प्रति बच्चों का प्रणालीबद्ध प्रतिरक्षण
- 2) Providing insurance cover to farmers against crop failure  
फसल बर्बाद हो जाने की स्थिति में किसानों को बीमा सुरक्षा प्रदान करना
- 3) Development of fisheries in rural areas  
ग्रामीण क्षेत्रों में मत्स्य-पालन विकसित करना
- 4) Development of multiple cropping in hilly region  
पर्वतीय क्षेत्रों में फसल विकसित करना

**Correct Answer:** Systematic immunization of children against disease  
कुछ रोगों के प्रति बच्चों का प्रणालीबद्ध प्रतिरक्षण

**Candidate Answer:** Systematic immunization of children against disease  
कुछ रोगों के प्रति बच्चों का प्रणालीबद्ध प्रतिरक्षण

Question 33. Who among the following Indians has been honoured by a special Oscar?

निम्नलिखित में से किस भारतीय को विशेष ऑस्कर पुरस्कार दिया गया ?

**Options:**

- 1) Mahesh Bhatt  
महेश भट्ट
- 2) Satyajit Ray  
सत्यजीत रे
- 3) Mira Nair  
मीरा नायर
- 4) G.P. Sippy  
जी पी सिप्पी

**Correct Answer:** Satyajit Ray  
सत्यजीत रे

**Candidate Answer:** G.P. Sippy  
जी पी सिप्पी

Question 34. What situation would result if Government expenditure exceeds the Government revenue on Current Account?

यदि चालू खाता पर सरकारी खर्च सरकारी राजस्व से अधिक हो, तो क्या स्थिति होगी ?

**Options:**

- 1) Deficit budgeting  
घाटा बजट
- 2) Zero-based budgeting  
शून्य आधारित बजट
- 3) Performance-based budgeting  
निष्पादन आधारित बजट
- 4) Surplus budgeting  
अधिशेष बजट

**Correct Answer:** Deficit budgeting  
घाटा बजट

**Candidate Answer:** [ NOT ANSWERED ]

Question 35. Disguised unemployment in India is mainly related to

भारत में छुपी बेरोजगारी मुख्य रूप से किस क्षेत्र में है ?

**Options:**

- 1) Agricultural sector  
कृषि क्षेत्र
- 2) Rural Area  
ग्रामीण क्षेत्र
- 3) Factory sector  
फैक्टरी क्षेत्र
- 4) Urban Area  
शहरी क्षेत्र

**Correct Answer:** Agricultural sector  
कृषि क्षेत्र

**Candidate Answer:** Rural Area  
ग्रामीण क्षेत्र

Question 36. Which of the following is not guaranteed by Indian Constitution?

निम्नलिखित में से भारतीय संविधान किसकी गारंटी नहीं देता ?

**Options:**

- 1) Right to Equality  
समता का हक
- 2) Right of religious freedom  
धार्मिक आजादी
- 3) Right to Constitutional remedies  
संवैधानिक उपचारों का हक
- 4) Right to free education for all  
सभी को शिक्षा का हक

**Correct Answer:** Right to free education for all  
सभी को शिक्षा का हक

**Candidate Answer:** Right to free education for all  
सभी को शिक्षा का हक

Question 37. A wide inlet of the sea usually concave in shape, is termed as a:

समुद्र की एक चौड़ी उपखाड़ी (प्रवेश मार्ग) जो आकार में अवतल हो, क्या कहलाती है ?

**Options:**

- 1) strait  
जलसंयोजी
- 2) Sound  
जलडमरूमध्य
- 3) Bay  
खाड़ी
- 4) Fjord  
पहाड़ों के बीच में समुद्री रास्ता

**Correct Answer:** Bay  
खाड़ी

**Candidate Answer:** Sound  
जलडमरूमध्य

Question 38. Punjab has a large number of inundation canals drawing water from

पंजाब में बड़ी संख्या में आप्लावन नहर हैं, इनमें जल कहां से आता है ?

**Options:**

- 1) Jhelum river  
झेलम नदी
- 2) Chenab river  
चेनाब नदी
- 3) Beas river  
ब्यास नदी
- 4) Sutlej river  
सतलुज नदी

**Correct Answer:** Sutlej river  
सतलुज नदी

**Candidate Answer:** Sutlej river  
सतलुज नदी

Question 39. The sexual reproductive organs of aspergillus are :

एसपर्जिलस के लैंगिक जनन अंग कौन-से हैं ?

**Options:**

- 1) Spermatium and Oogonium  
स्पर्मेशियम और अंडधानी
- 2) Antheridium and Oogonium  
पुंधानी और अंडधानी
- 3) Spermatium and Ascogonium  
स्पर्मेशियम और ऐस्कोधानी
- 4) Antheridium and Ascogonium  
पुंधानी और ऐस्कोधानी

**Correct Answer:** Antheridium and Ascogonium  
पुंधानी और ऐस्कोधानी

**Candidate Answer:** [ NOT ANSWERED ]

Question 40. Stars twinkle but planets do not twinkle because

तारे चमकते हैं, किंतु ग्रह नहीं चमकते क्योंकि \_\_\_\_\_

**Options:**

1) they emit light of a constant intensity

वे स्थिर प्रबलता का प्रकाश उत्सर्जित करते हैं

2) their distance from the earth does not change with time

उनकी पृथ्वी से दूरी समय के साथ परिवर्तित नहीं होती

3) they are very far away from the earth resulting in decrease in intensity of light

वे पृथ्वी से अत्याधिक दूरी पर हैं और परिणाम स्वरूप प्रकाश की प्रबलता में कमी हो जाती है

4) they are nearer to the earth and hence we receive a greater amount of light and therefore minor variations in intensity are not noticeable

वे पृथ्वी के करीब हैं इसलिए उनसे अधिक प्रकाश मिलता है और प्रबलता में यदि छोटे मोटे परिवर्तन होते भी हैं तो वे नजर में नहीं आते

**Correct Answer:** they are nearer to the earth and hence we receive a greater amount of light and therefore minor variations in intensity are not noticeable

वे पृथ्वी के करीब हैं इसलिए उनसे अधिक प्रकाश मिलता है और प्रबलता में यदि छोटे मोटे परिवर्तन होते भी हैं तो वे नजर में नहीं आते

**Candidate Answer:** they emit light of a constant intensity

वे स्थिर प्रबलता का प्रकाश उत्सर्जित करते हैं

Question 41. Which of the following is not true about X-rays?

एक्स-रे के संबंध में निम्नलिखित विकल्पों में से कौन-सा विकल्प सही नहीं है ?

**Options:**

1) have low penetrating power

इसमें कम भेदन क्षमता होती है

2) travel with the speed of light

यह प्रकाश की गति से चलती है

3) Can be reflected or refracted

यह परावर्तित या अपवर्तित दोनों हो सकती है

4) can affect photographic plates

फोटोग्राफी की प्लेट को प्रभावित कर सकती है

**Correct Answer:** have low penetrating power

इसमें कम भेदन क्षमता होती है

**Candidate Answer:** have low penetrating power

इसमें कम भेदन क्षमता होती है

Question 42. \_\_\_\_\_ changes each time it is installed to avoid detection by antivirus software.

एन्टी वायरस सॉफ्टवेयर द्वारा पता लगाए जाने से बचने के लिए निम्नलिखित में से कौन जब भी स्थापित किया जाता है, परिवर्तित होता है?

**Options:**

1) Polymorphic virus

पॉलिमॉर्फिक वायरस

2) worm

वॉर्म

3) logic bomb

लॉजिक बॉम्ब

4) trojan horse

ट्रोजन हॉर्स

**Correct Answer:** Polymorphic virus

पॉलिमॉर्फिक वायरस

**Candidate Answer:** [ NOT ANSWERED ]

Question 43. Which one of the following weeds is effective in controlling water pollution caused by industrial effluents?

निम्नलिखित में से कौन-सी खरपतवार औद्योगिक बहिःसाव से होने वाले जल प्रदूषण को नियंत्रित कर सकती है ?

**Options:**

1) Parthenium

पार्थेनियम

2) Elephant grass

हाथी घास

3) Water hyacinth

जल कुंभी

4) Mogar grass

मोगर घास

**Correct Answer:** Parthenium

पार्थेनियम

**Candidate Answer:** Water hyacinth

जल कुंभी

Question 44. One of the following is also called as World Bank

निम्नलिखित में से किसको "विश्व बैंक" भी कहा जाता है ?

**Options:**

- 1) IMF  
अन्तर्राष्ट्रीय मुद्रा कोष
- 2) IBRD  
अन्तर्राष्ट्रीय पुनर्निर्माण एवं विकास बैंक
- 3) WTO  
विश्व व्यापार संघठन
- 4) IDA  
अन्तर्राष्ट्रीय विकास संघ

**Correct Answer:** IBRD

अन्तर्राष्ट्रीय पुनर्निर्माण एवं विकास बैंक

**Candidate Answer:** IBRD

अन्तर्राष्ट्रीय पुनर्निर्माण एवं विकास बैंक

Question 45. The book entitled, 'Playing it my way' has been authored by

" प्लेईंग इट माई वे " पुस्तक के लेखक का नाम बताएं

**Options:**

- 1) Sachin Tendulkar  
सचिन तेंदुलकर
- 2) V V S Laxman  
वी. वी.एस. लक्ष्मण
- 3) Saurav Ganguly  
सौरव गांगुली
- 4) Chetan Chauhan  
चेतन चौहान

**Correct Answer:** Sachin Tendulkar

सचिन तेंदुलकर

**Candidate Answer:** Sachin Tendulkar

सचिन तेंदुलकर

Question 46. Which of the following is an example of Cartel?

निम्नलिखित में से कौन-सा उत्पादक संघ (कार्टेल) का उदाहरण है ?

**Options:**

- 1) OPEC  
पेट्रोलियम निर्यातक देशों का संगठन(ओपेक)
- 2) IMF  
अन्तर्राष्ट्रीय मुद्रा कोष
- 3) WTO  
विश्व व्यापार संगठन
- 4) UNO  
संयुक्त राष्ट्र संघ

**Correct Answer:** OPEC

पेट्रोलियम निर्यातक देशों का संगठन(ओपेक)

**Candidate Answer:** OPEC

पेट्रोलियम निर्यातक देशों का संगठन(ओपेक)

Question 47. Sullage water is \_\_\_\_\_

अपशिष्ट (सलेज) जल \_\_\_\_\_

**Options:**

- 1) Waste water released from kitchen  
रसोई से निकलने वाला अपशिष्ट जल है
- 2) waste water released from toilets  
शौचघर से निकलने वाला अपशिष्ट जल है
- 3) waste water released from factories  
कारखानों से निकलने वाला अपशिष्ट जल है
- 4) waste water released from hospitals  
अस्पतालों से निकलने वाला अपशिष्ट जल है

**Correct Answer:** Waste water released from kitchen

रसोई से निकलने वाला अपशिष्ट जल है

**Candidate Answer:** waste water released from factories

कारखानों से निकलने वाला अपशिष्ट जल है

Question 48. Who was the first woman Chief Minister of Uttar Pradesh?

उत्तर प्रदेश की प्रथम महिला मुख्य मंत्री कौन थी ?



**Options:**

- 1) Annie Besant  
एनी बेसेन्ट
- 2) Mayawati  
मायावती
- 3) Vijayalakshmi Pandit  
विजयलक्ष्मी पंडित
- 4) Sucheta Kriplani  
सुचेता कृपलाणी

**Correct Answer:** Sucheta Kriplani  
सुचेता कृपलाणी

**Candidate Answer:** Sucheta Kriplani  
सुचेता कृपलाणी

Question 49. The most pure form of carbon among the options is

निम्नलिखित विकल्पों में से कार्बन का सबसे शुद्ध रूप क्या है ?

**Options:**

- 1) Anthracite  
एन्थ्रासाइट
- 2) Lampblack  
काजल
- 3) Graphite  
ग्रेफाइट
- 4) Wood Charcoal  
लकड़ी का कोयला

**Correct Answer:** Anthracite  
एन्थ्रासाइट

**Candidate Answer:** Anthracite  
एन्थ्रासाइट

Question 50. Chalukya temples (Jain temples) at Dilwara are situated in

दिलवाड़ा के चालुक्य मन्दिर (जैन मन्दिर) कहाँ स्थित हैं ?

**Options:**

- 1) Madhya Pradesh  
मध्य प्रदेश
- 2) Uttar Pradesh  
उत्तर प्रदेश
- 3) Rajasthan  
राजस्थान
- 4) Haryana  
हरियाणा

**Correct Answer:** Rajasthan  
राजस्थान

**Candidate Answer:** Rajasthan  
राजस्थान

Question 51. The difference between the greatest and least five-digit numbers formed by the digits 2,5,0,6,8 is (repetition of digits are not allowed)

2,5,0,6,8 अंकों से बनी पाँच अंकीय सबसे बड़ी संख्या और सबसे छोटी संख्या का अंतर कितना होगा ? (अंकों की पुनरावृत्ति अनुमत नहीं है)

**Options:**

- 1) 69552
- 2) 65925
- 3) 65952
- 4) 63952

**Correct Answer:** 65952

**Candidate Answer:** 65952

Question 52. The price of a shirt after 15% discount, is Rs.119. What was the marked price of the shirt before discount

किसी कमीज का मूल्य 15% की छूट देने के बाद Rs. 119 है। छूट के पहले कमीज का अंकीय मूल्य क्या था ?

**Options:**

- 1) Rs.129
- 2) Rs.140
- 3) Rs.150
- 4) Rs.160

**Correct Answer:** Rs.140

Question 53.

If  $\frac{a}{q-r} + \frac{b}{r-p} - \frac{c}{p-q}$ , find the value of  $pa + qb + rc$  is

यदि  $\frac{a}{q-r} + \frac{b}{r-p} - \frac{c}{p-q}$ , तो  $pa+qb+rc$  का मान क्या होगा?

**Options:**

- 1) 0
- 2) 1
- 3) 2
- 4) -1

**Correct Answer:** 0**Candidate Answer:** [ NOT ANSWERED ]

Question 54. The average of a,b,c is 20 and that of b,c,d is 25; if d=30, then the value of a is

a, b, c का औसत 20 है और b, c, d, का औसत 25 है। यदि d=30, तो a का मान क्या है ?

**Options:**

- 1) 25
- 2) 45
- 3) 30
- 4) 15

**Correct Answer:** 15**Candidate Answer:** 15

Question 55. A store sells a watch for a profit of 25% of the cost. Then the percentage of profit against selling price is

एक स्टोर में लागत मूल्य के 25% लाभ पर घड़ी बेची जाती है। विक्रय मूल्य पर लाभ का प्रतिशत कितना होगा ?

**Options:**

- 1) 22%
- 2) 20%
- 3) 18%
- 4) 15%

**Correct Answer:** 20%**Candidate Answer:** 20%

Question 56. If A is equal to 20% of B and B is equal to 25% of C; then what percent of C is equal to A?

यदि A, B के 20 % के बराबर है और B, C के 25% के बराबर है, तो C का कितना प्रतिशत A के बराबर होगा ?

**Options:**

- 1) 10
- 2) 15
- 3) 5
- 4) 20

**Correct Answer:** 5**Candidate Answer:** 5

Question 57. A gun is fired at a distance of 1.7 km from Ram and he hears the sound after 25 seconds. The speed of sound in meter per second is

राम से 1.7 कि.मी. दूरी से किसी बंदूक से गोली चलाई जाती है और वह उसकी आवाज 25 सेकंड बाद सुनता है। आवाज की गति कितने मीटर प्रति सेकंड है ?

**Options:**

- 1) 60
- 2) 62
- 3) 64
- 4) 68

**Correct Answer:** 68**Candidate Answer:** 68

Question 58. A sum of ₹ 3000 yields an interest of ₹ 1080 at 12% per annum simple interest in how many years ?

₹ 3000 की राशि पर 12% वार्षिक के साधारण ब्याज पर ₹ 1080 का ब्याज कितने सालों में मिलेगा ?

**Options:**

- 1) 4 Years  
4 साल
- 2) 3 Years  
3 साल
- 3) 5 years  
5 साल
- 4) 2½ Years  
2½ साल

**Correct Answer:** 3 Years

3 साल

**Candidate Answer:** 3 Years

3 साल

Question 59.

The simplest value of  $\frac{3\sqrt{8}-2\sqrt{12}+\sqrt{20}}{3\sqrt{18}-2\sqrt{27}+\sqrt{45}}$  is

$\frac{3\sqrt{8}-2\sqrt{12}+\sqrt{20}}{3\sqrt{18}-2\sqrt{27}+\sqrt{45}}$  का सरलतम मान क्या है?

**Options:**

- 1)  
 $\frac{3}{2}$
- 2)  $\frac{2}{3}$
- 3)  $\frac{1}{2}$
- 4) 2

**Correct Answer:**  $\frac{2}{3}$

**Candidate Answer:** [ NOT ANSWERED ]

Question 60.

If  $\left(a + \frac{1}{a}\right)^2 = 3$ , the value of  $a^3 + \frac{1}{a^3}$  is

यदि  $\left(a + \frac{1}{a}\right)^2 = 3$ , तो  $a^3 + \frac{1}{a^3}$  का मान बताएं?

**Options:**

- 1) 0
- 2)  
 $3\left(a + \frac{1}{a}\right)$
- 3)  
 $3\left(a^2 + \frac{1}{a^2}\right)$
- 4) 1

**Correct Answer:** 0

**Candidate Answer:** 1

Question 61.

If  $\frac{a^2+b^2}{c^2} = \frac{b^2+c^2}{a^2} = \frac{c^2+a^2}{b^2} = \frac{1}{k}$ , ( $k \neq 0$ ) then  $k =$

यदि  $\frac{a^2+b^2}{c^2} = \frac{b^2+c^2}{a^2} = \frac{c^2+a^2}{b^2} = \frac{1}{k}$ , ( $k \neq 0$ ), तो  $k =$

Options:

1) 2

2) 1

3) 0

4)  $\frac{1}{2}$

Correct Answer:  $\frac{1}{2}$

Candidate Answer: [ NOT ANSWERED ]

Question 62. The area of the largest triangle that can be inscribed in a semicircle of radius 6m is

6 मी. त्रिज्या वाले अर्धवृत्त में बनाए जा सकने वाले सबसे बड़े त्रिभुज का क्षेत्रफल कितना होगा ?

Options:

1)  $36 \text{ m}^2$

36 मी.<sup>2</sup>

2)  $72 \text{ m}^2$

72 मी.<sup>2</sup>

3)  $18 \text{ m}^2$

18 मी.<sup>2</sup>

4)  $12 \text{ m}^2$

12 मी.<sup>2</sup>

Correct Answer:  $36 \text{ m}^2$

36 मी.<sup>2</sup>

Candidate Answer:  $18 \text{ m}^2$

18 मी.<sup>2</sup>

Question 63.

The value of  $\frac{\sin \theta}{1+\cos \theta} + \frac{\sin \theta}{1-\cos \theta}$  is

$\frac{\sin \theta}{1+\cos \theta} + \frac{\sin \theta}{1-\cos \theta}$  का मान क्या है ?

Options:

1)  $2\sin \theta$

2)  $2\cos \theta$

3)  $2\sec \theta$

4)  $2\operatorname{cosec} \theta$

Correct Answer:  $2\operatorname{cosec} \theta$

Candidate Answer:  $2\operatorname{cosec} \theta$

Question 64. Twenty women can do a work in sixteen days. Sixteen men can complete the same work in fifteen days. The ratio between the capacity of a man and a woman is

20 महिलाएँ किसी काम को सोलह दिन में कर सकती हैं। सोलह पुरुष उसी काम को 15 दिन में कर सकते हैं। एक पुरुष और एक महिला की क्षमता के बीच अनुपात कितना है ?

Options:

1) 3:4

2) 4:3

3) 5:3

4) 5:7

Correct Answer: 4:3

Candidate Answer: 3:4

Question 65.

If  $2x + \frac{2}{9x} = 4$ , then the value of  $27x^3 + \frac{1}{27x^3}$  is

यदि  $2x + \frac{2}{9x} = 4$ , तो  $27x^3 + \frac{1}{27x^3}$  का मान क्या है?

Options:

- 1) 180
- 2) 198
- 3) 234
- 4) 252

Correct Answer: 198

Candidate Answer: [ NOT ANSWERED ]

Question 66. In a cyclic quadrilateral ABCD  $\angle BCD = 120^\circ$  and passes through the centre of the circle. Then  $\angle ABD = ?$

एक चक्रीय चतुर्भुज ABCD में  $\angle BCD = 120^\circ$  और AB वृत्त के केन्द्र से होकर गुजरती है तो  $\angle ABD = ?$

Options:

- 1)  $30^\circ$
- 2)  $40^\circ$
- 3)  $50^\circ$
- 4)  $60^\circ$

Correct Answer:  $30^\circ$

Candidate Answer:  $60^\circ$

Question 67. The midpoints of AB and AC of a triangle ABC are X and Y respectively. If  $BC + XY = 12$  units, then  $BC - XY$  is

एक त्रिभुज ABC के AB और AC के मध्य बिन्दु क्रमशः X और Y हैं। यदि  $BC + XY = 12$  यूनिट, तो  $BC - XY$  का मान क्या होगा ?

Options:

- 1) 10 units  
10 यूनिट
- 2) 8 units  
8 यूनिट
- 3) 6 units  
6 यूनिट
- 4) 4 units  
4 यूनिट

Correct Answer: 4 units

4 यूनिट

Candidate Answer: 4 units

4 यूनिट

Qmaths.in  
SSC | IBPS | RAILWAYS | LIC | SIDBI

Question 68. In an isosceles  $\triangle ABC$ , AD is the median to the unequal side meeting BC at D. DP is the angle bisector of  $\angle ADB$  and PQ is drawn parallel to BC meeting AC at Q. Then the measure of  $\angle PDQ$  is

यदि एक समद्विभुज  $\triangle ABC$  में, AD, BC के D पर मिलनेवाली विषमभुजा का माध्यक है। DP,  $\angle ADB$  का कोण-द्विभाजक है और PQ, AC के Q पर मिलनेवाली BC के समांतर खींची जाती है तो  $\angle PDQ$  का माप क्या होगा ?

Options:

- 1)  $130^\circ$
- 2)  $90^\circ$
- 3)  $180^\circ$
- 4)  $45^\circ$

Correct Answer:  $90^\circ$

Candidate Answer: [ NOT ANSWERED ]

Question 69. 129 meter from the foot of a cliff on level of ground, the angle of elevation of the top of a cliff is  $30^\circ$ . The height of this cliff is

जमीनी तल पर खड़ी चट्टान के पाद से 129 मीटर पर खड़ी चट्टान के शीर्ष का उन्नयन कोण  $30^\circ$  है, तो उस चट्टान की ऊँचाई कितनी है ?

Options:

- 1)  $50\sqrt{3}$  metre  
 $50\sqrt{3}$  मीटर
- 2)  $45\sqrt{3}$  metre  
 $45\sqrt{3}$  मीटर
- 3)  $43\sqrt{3}$  metre  
 $43\sqrt{3}$  मीटर
- 4)  $47\sqrt{3}$  metre  
 $47\sqrt{3}$  मीटर

Correct Answer:  $43\sqrt{3}$  metre

$43\sqrt{3}$  मीटर

Candidate Answer:  $43\sqrt{3}$  metre

$43\sqrt{3}$  मीटर

Question 70. The volume of metallic cylindrical pipe is 748 cm<sup>3</sup>. Its length is 14 cm and its external radius is 9 cm. The thickness of the pipe is

समान मोटाई वाले धातु के बेलनाकार पाईप का आयतन 748 से.से. है। उसकी लंबाई 14 से.मी. है और बाहरी त्रिज्या 9 से.मी. है। पाईप की मोटाई कितनी है ?

**Options:**

- 1) 0.5 cm  
0.5 से.मी.
- 2) 1.5 cm  
1.5 से.मी.
- 3) 1 cm  
1 से.मी.
- 4) 2 cm  
2 से.मी.

**Correct Answer:** 1 cm

1 से.मी.

**Candidate Answer:** 1 cm

1 से.मी.

Question 71.

If  $\tan \theta = \frac{8}{15}$ , the value of  $\frac{\sqrt{1-\sin \theta}}{\sqrt{1+\sin \theta}}$  is

यदि  $\tan \theta = \frac{8}{15}$  हो, तो  $\frac{\sqrt{1-\sin \theta}}{\sqrt{1+\sin \theta}}$  का

मान ज्ञात कीजिए ?

**Options:**

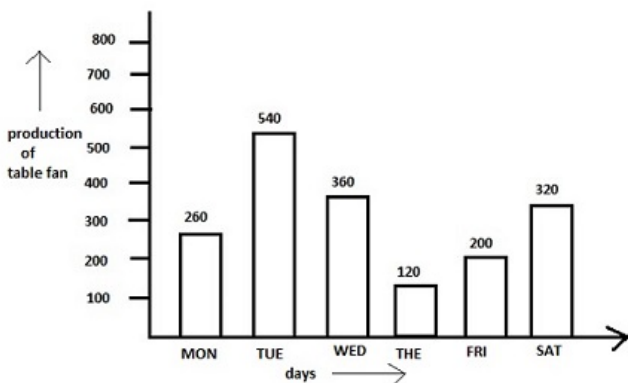
- 1)  $\frac{1}{5}$
- 2)  $\frac{2}{5}$
- 3)  $\frac{3}{5}$
- 4) 0

**Correct Answer:**  $\frac{3}{5}$

**Candidate Answer:**  $\frac{3}{5}$

Question 72. The bar graph shows the production of table fans in a factory during one week. Study the bar graph and answer the question.

इस बार ग्राफ में किसी फैक्ट्री में एक सप्ताह के दौरान टेबल पंखों के उत्पादन को दर्शाया गया है। बार ग्राफ का अध्ययन कीजिए और निम्नलिखित प्रश्नों के उत्तर दीजिए।



The maximum production exceeds the minimum production by:

अधिकतम उत्पादन न्यूनतम उत्पादन से कितना अधिक है ?

**Options:**

- 1) 400
- 2) 420
- 3) 500
- 4) 540

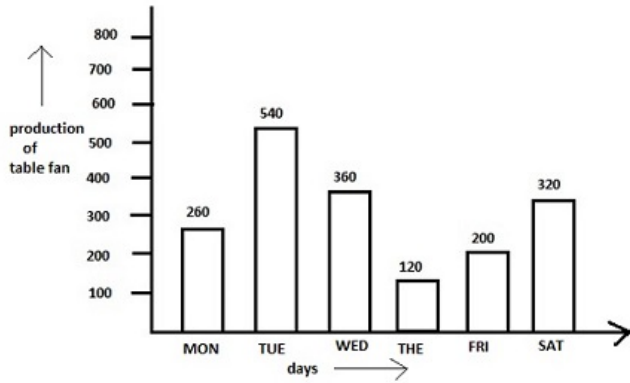
**Correct Answer:** 420

**Candidate Answer:** 420

Question 73. The bar graph shows the production of table fans in a factory during one week. Study the bar graph and answer the question.

Downloaded from [www.qmaths.in](http://www.qmaths.in)

इस बार ग्राफ में किसी फैक्ट्री में एक सप्ताह के दौरान टेबल पंखों के उत्पादन को दर्शाया गया है। बार ग्राफ का अध्ययन कीजिए और निम्नलिखित प्रश्नों के उत्तर दीजिए।



The average production of table fan in that week is

उस सप्ताह में टेबल पंखों का औसत उत्पादन कितना है ?

**Options:**

1) 370

2) 280

3) 300

4) 250

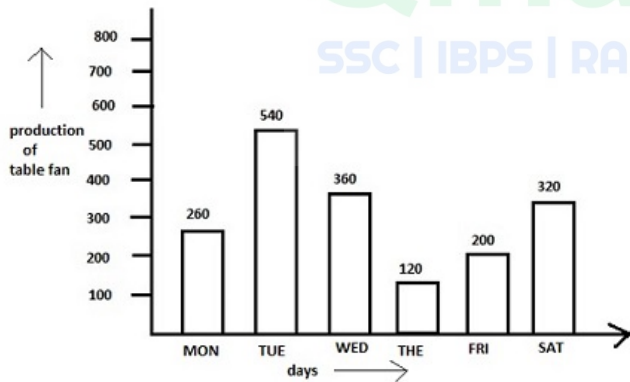
**Correct Answer:** 300

**Candidate Answer:** 250

Question 74. The bar graph shows the production of table fans in a factory during one week. Study the bar graph and answer the question.

इस बार ग्राफ में किसी फैक्ट्री में एक सप्ताह के दौरान टेबल पंखों के उत्पादन को दर्शाया गया है। बार ग्राफ का अध्ययन कीजिए और निम्नलिखित प्रश्नों के उत्तर दीजिए।

Qmaths.in  
SSC | IBPS | RAILWAYS | LIC | SIDBI



Ratio of the total production of table fans in the factory from Monday to Wednesday to that from Thursday to Saturday is

फैक्टरी में सोमवार से बुधवार तक टेबल पंखों के कुल उत्पादन और गुरुवार से शनिवार तक के कुल उत्पादन का अनुपात कितना है ?

**Options:**

1) 19:26

2) 26:19

3) 29:16

4) 16:29

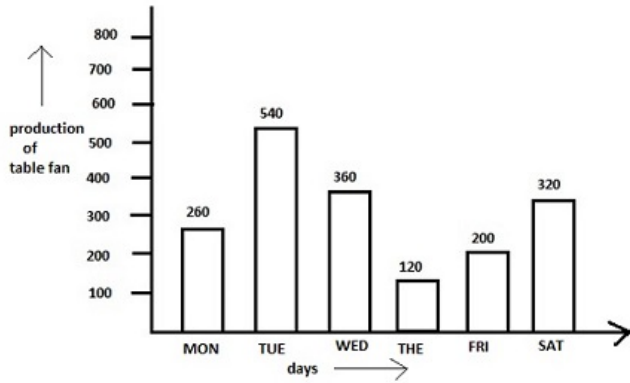
**Correct Answer:** 29:16

**Candidate Answer:** 29:16

Question 75. The bar graph shows the production of table fans in a factory during one week. Study the bar graph and answer the question.

Downloaded from [www.qmaths.in](http://www.qmaths.in)

इस बार ग्राफ में किसी फैक्ट्री में एक सप्ताह के दौरान टेबल पंखों के उत्पादन को दर्शाया गया है। बार ग्राफ का अध्ययन कीजिए और निम्नलिखित प्रश्नों के उत्तर दीजिए।



The average production of table fans on Monday & Tuesdays exceeds the average production of table fans during the week by

सोमवार और मंगलवार को टेबल पंखों का औसत उत्पादन उस सप्ताह के टेबल पंखों के औसत उत्पादन से कितना अधिक होता है ?

**Options:**

- 1) 150 fans  
150 पंखे
- 2) 100 fans  
100 पंखे
- 3) 140 fans  
140 पंखे
- 4) 200 fans  
200 पंखे

**Correct Answer:** 100 fans

100 पंखे

**Candidate Answer:** 150 fans

150 पंखे

Question 76. In the following question, out of the four alternatives, choose the word which best expresses the meaning of the given word and click the button corresponding to it.

DECIMATED

**Options:**

- 1) CAPTURED
- 2) DESTROYED
- 3) DAMAGED
- 4) WORRIED

**Correct Answer:** DESTROYED

**Candidate Answer:** [ NOT ANSWERED ]

Question 77. In the following question, out of the four alternatives, choose the word which is opposite in meaning to the given word and click the button corresponding to it.

INVINCIBLE

**Options:**

- 1) IMPREGNABLE
- 2) OMNIPRESENT
- 3) POWERLESS
- 4) POTENT

**Correct Answer:** POWERLESS

**Candidate Answer:** POWERLESS

Question 78. Four words are given, out of which only one word is spelt correctly. Choose the correctly spelt word and click the button corresponding to it.

**Options:**

- 1) Diarrhoea
- 2) Diarhea
- 3) Diarrhea
- 4) Diarrohea

**Correct Answer:** Diarrhoea

**Candidate Answer:** Diarhea

Question 79. In the following questions, one part of the sentence may have an error. Find out which part of the sentence has an error and click the button corresponding to it. If the sentence is free from error, click the "No error" option.

It took her a long time(A)/to get off (B)/the death of her husband.(C)/No Error(D)

Visit [www.qmaths.in](http://www.qmaths.in) for tons of free study materials and latest exam updates.



**Options:**

- 1) A
- 2) B
- 3) C
- 4) D

**Correct Answer:** B

**Candidate Answer:** A

Question 80. In the following questions, one part of the sentence may have an error. Find out which part of the sentence has an error and click the button corresponding to it. If the sentence is free from error, click the "No error" option.

It is best(A)/ to be silent(B)/ than to speak in anger.(C)/No Error(D)

**Options:**

- 1) A
- 2) B
- 3) C
- 4) D

**Correct Answer:** A

**Candidate Answer:** D

Question 81. In the following questions, one part of the sentence may have an error. Find out which part of the sentence has an error and click the button corresponding to it. If the sentence is free from error, click the "No error" option.

His father is disgusted(A)/against him for his(B)/addiction to drink.(C)/No Error(D)

**Options:**

- 1) A
- 2) B
- 3) C
- 4) D

**Correct Answer:** B

**Candidate Answer:** A

Question 82. The sentences given with blanks are to be filled with an appropriate word(s). Four alternatives are suggested for each question. For each question, choose the correct alternative and click the button corresponding to it.

The aim of a Peace Council is \_\_\_\_\_ rather than cure.

**Options:**

- 1) salvation
- 2) preservation
- 3) maintenance
- 4) cultivation

**Correct Answer:** preservation

**Candidate Answer:** preservation

Question 83. The sentences given with blanks are to be filled with an appropriate word(s). Four alternatives are suggested for each question. For each question, choose the correct alternative and click the button corresponding to it.

He gives everyone \_\_\_\_\_ the class opportunities for practice.

**Options:**

- 1) at
- 2) in
- 3) of
- 4) on

**Correct Answer:** in

**Candidate Answer:** in

Question 84. The sentences given with blanks are to be filled with an appropriate word(s). Four alternatives are suggested for each question. For each question, choose the correct alternative and click the button corresponding to it.

Harish soon gained \_\_\_\_\_ in English.

**Options:**

- 1) provincialism
- 2) proficiency
- 3) efficiency
- 4) eminency

**Correct Answer:** proficiency

**Candidate Answer:** proficiency

Question 85. In each of the questions, four alternatives are given for the Idiom/Phrase. Choose the alternative which best expresses the meaning of the Idiom/Phrase and click the button corresponding to it.

Beggar description

**Options:**

- 1) Cannot be described
- 2) Something described by a beggar
- 3) A poor account of something
- 4) A description of a beggar

**Correct Answer:** Cannot be described

**Candidate Answer:** Cannot be described

Question 86. In each of the questions, four alternatives are given for the Idiom/Phrase. Choose the alternative which best expresses the meaning of the Idiom/Phrase and click the button corresponding to it.

Drag one's feet

**Options:**

- 1) Make something more complicated
- 2) Expedite
- 3) Be reluctant to act
- 4) Stop working

**Correct Answer:** Be reluctant to act

**Candidate Answer:** Make something more complicated

Question 87. In each of the questions, four alternatives are given for the Idiom/Phrase. Choose the alternative which best expresses the meaning of the Idiom/Phrase and click the button corresponding to it.

Hope against hope

**Options:**

- 1) Think wishfully from time to time
- 2) Hoped with good reason
- 3) Nurture an impossible hope
- 4) Pretend to hope

**Correct Answer:** Nurture an impossible hope

**Candidate Answer:** Hoped with good reason

Question 88. Out of the four alternatives, choose the one which can be substituted for the given words/sentences and click the button corresponding to it.

Lack of skill

**Options:**

- 1) Inertness
- 2) Insistence
- 3) Ineptness
- 4) Insolence

**Correct Answer:** Ineptness

**Candidate Answer:** Insolence

Question 89. Out of the four alternatives, choose the one which can be substituted for the given words/sentences and click the button corresponding to it.

Stick with a thick end used in a mortar for pounding

**Options:**

- 1) Thistle
- 2) Stifle
- 3) Sceptre
- 4) Pestle

**Correct Answer:** Pestle

**Candidate Answer:** [ NOT ANSWERED ]

Question 90. Out of the four alternatives, choose the one which can be substituted for the given words/sentences and click the button corresponding to it.

An act when people vote in order to make a decision about a particular subject or policy rather than voting for a person

**Options:**

- 1) Election
- 2) Exit-poll
- 3) By-election
- 4) Referendum

**Correct Answer:** Referendum

**Candidate Answer:** Referendum

Question 91. A sentence/a part of the sentence is underlined. Four alternatives are given to the underlined part which will improve the sentence. Choose the correct alternative and click the button corresponding to it. In case no improvement is needed, click the button corresponding to "No improvement".

Jane had told me that she hasn't done her homework.

**Options:**

- 1) told
- 2) tells
- 3) was telling
- 4) no improvement

**Correct Answer:** tells

**Candidate Answer:** told

Question 92. A sentence/a part of the sentence is underlined. Four alternatives are given to the underlined part which will improve the sentence. Choose the correct alternative and click the button corresponding to it. In case no improvement is needed, click the button corresponding to "No improvement".

This survey is concerning your health as well as that of your family.

**Options:**

- 1) concerns with
- 2) is concerned with
- 3) concerns to
- 4) no improvement

**Correct Answer:** is concerned with

Downloaded from [www.qmaths.in](http://www.qmaths.in)

**Candidate Answer:** concerns to

Question 93. A sentence/a part of the sentence is underlined. Four alternatives are given to the underlined part which will improve the sentence. Choose the correct alternative and click the button corresponding to it. In case no improvement is needed, click the button corresponding to "No improvement".

A city that is set on a hill cannot be hidden.

**Options:**

- 1) be hid
- 2) hide
- 3) be hiding
- 4) no improvement

**Correct Answer:** no improvement

**Candidate Answer:** no improvement

Question 94. A sentence/a part of the sentence is underlined. Four alternatives are given to the underlined part which will improve the sentence. Choose the correct alternative and click the button corresponding to it. In case no improvement is needed, click the button corresponding to "No improvement".

A black and white goat were grazing.

**Options:**

- 1) The white and the black goat
- 2) A black and a white goat
- 3) A black and a white goat
- 4) no improvement

**Correct Answer:** A black and a white goat

**Candidate Answer:** The white and the black goat

Question 95. A sentence/a part of the sentence is underlined. Four alternatives are given to the underlined part which will improve the sentence. Choose the correct alternative and click the button corresponding to it. In case no improvement is needed, click the button corresponding to "No improvement".

I had took the papers to John's office.

**Options:**

- 1) will took the papers
- 2) taken the papers
- 3) took the papers
- 4) no improvement

**Correct Answer:** took the papers

**Candidate Answer:** took the papers

Question 96. A passage is given with 5 questions following it. Read the passage carefully and choose the best answer to each question out of the four alternatives and click the button corresponding to it.

"Tryst with Destiny" was a speech delivered by Jawaharlal Nehru, the first Prime Minister of independent India, to the Indian Constituent Assembly in Parliament, on 14th August 1947. It is considered to be one of the greatest speeches of all times and to be a landmark oration that captures the essence of the triumphant culmination of the largely non-violent Indian independence struggle against the British Empire in India.

"Long years ago we made a tryst with destiny, and now the time comes when we shall redeem our pledge, not wholly or in full measure, but very substantially. Freedom and power bring responsibility. The responsibility rests upon the assembly, a sovereign body representing the sovereign people of India. The service of India means the service of the millions who suffer. It means the ending of poverty and ignorance and disease and inequality of opportunity. We cannot encourage communalism or narrow-mindedness, for no nation can be great whose people are narrow in thought or in action.

To the people of India, whose representatives we are, this is no time for petty and destructive criticism, no time for ill will or blaming others. We have to build the noble mansion of free India where all her children may dwell".

To whom did Nehru deliver this famous speech?

**Options:**

- 1) Nehru delivered this speech to a massive Indian crowd in attendance.
- 2) Nehru delivered this speech to the members of the Constituent Assembly.
- 3) Nehru delivered this speech to the members of the Lok Sabha
- 4) Nehru delivered this speech to the members of the Rajya Sabha.

**Correct Answer:** Nehru delivered this speech to the members of the Constituent Assembly.

**Candidate Answer:** Nehru delivered this speech to the members of the Constituent Assembly.

Question 97. A passage is given with 5 questions following it. Read the passage carefully and choose the best answer to each question out of the four alternatives and click the button corresponding to it.

"Tryst with Destiny" was a speech delivered by Jawaharlal Nehru, the first Prime Minister of independent India, to the Indian Constituent Assembly in Parliament, on 14th August 1947. It is considered to be one of the greatest speeches of all times and to be a landmark oration that captures the essence of the triumphant culmination of the largely non-violent Indian independence struggle against the British Empire in India.

"Long years ago we made a tryst with destiny, and now the time comes when we shall redeem our pledge, not wholly or in full measure, but very substantially. Freedom and power bring responsibility. The responsibility rests upon the assembly, a sovereign body representing the sovereign people of India. The service of India means the service of the millions who suffer. It means the ending of poverty and ignorance and disease and inequality of opportunity. We cannot encourage communalism or narrow-mindedness, for no nation can be great whose people are narrow in thought or in action.

To the people of India, whose representatives we are, this is no time for petty and destructive criticism, no time for ill will or blaming others. We have to build the noble mansion of free India where all her children may dwell".

Choose the answer which captures Nehru's belief.

Visit [www.qmaths.in](http://www.qmaths.in) for tons of free study materials and latest exam updates.

**Options:**

- 1) Nehru believed that India could achieve perfection immediately.
- 2) Nehru said the India's struggle for freedom was new and sudden.
- 3) Nehru believed that India could take huge steps towards realising its dreams.
- 4) Nehru believed that India's dreams were too unrealistic.

**Correct Answer:** Nehru believed that India could take huge steps towards realising its dreams.

**Candidate Answer:** Nehru believed that India could take huge steps towards realising its dreams.

Question 98.A passage is given with 5 questions following it. Read the passage carefully and choose the best answer to each question out of the four alternatives and click the button corresponding to it.

"Tryst with Destiny" was a speech delivered by Jawaharlal Nehru, the first Prime Minister of independent India, to the Indian Constituent Assembly in Parliament, on 14th August 1947. It is considered to be one of the greatest speeches of all times and to be a landmark oration that captures the essence of the triumphant culmination of the largely non-violent Indian independence struggle against the British Empire in India.

"Long years ago we made a tryst with destiny, and now the time comes when we shall redeem our pledge, not wholly or in full measure, but very substantially. Freedom and power bring responsibility. The responsibility rests upon the assembly, a sovereign body representing the sovereign people of India. The service of India means the service of the millions who suffer. It means the ending of poverty and ignorance and disease and inequality of opportunity. We cannot encourage communalism or narrow-mindedness, for no nation can be great whose people are narrow in thought or in action.

To the people of India, whose representatives we are, this is no time for petty and destructive criticism, no time for ill will or blaming others. We have to build the noble mansion of free India where all her children may dwell".

The most dominant voice in the speech is

**Options:**

- 1) the voice of optimism
- 2) the voice of surrender
- 3) the voice of negligence
- 4) the voice of weakness

**Correct Answer:** the voice of optimism

**Candidate Answer:** the voice of optimism

Question 99.A passage is given with 5 questions following it. Read the passage carefully and choose the best answer to each question out of the four alternatives and click the button corresponding to it.

"Tryst with Destiny" was a speech delivered by Jawaharlal Nehru, the first Prime Minister of independent India, to the Indian Constituent Assembly in Parliament, on 14th August 1947. It is considered to be one of the greatest speeches of all times and to be a landmark oration that captures the essence of the triumphant culmination of the largely non-violent Indian independence struggle against the British Empire in India.

"Long years ago we made a tryst with destiny, and now the time comes when we shall redeem our pledge, not wholly or in full measure, but very substantially. Freedom and power bring responsibility. The responsibility rests upon the assembly, a sovereign body representing the sovereign people of India. The service of India means the service of the millions who suffer. It means the ending of poverty and ignorance and disease and inequality of opportunity. We cannot encourage communalism or narrow-mindedness, for no nation can be great whose people are narrow in thought or in action.

To the people of India, whose representatives we are, this is no time for petty and destructive criticism, no time for ill will or blaming others. We have to build the noble mansion of free India where all her children may dwell".

Select the answer which best reflects Nehru's point of view.

**Options:**

- 1) Nehru believed that Communalism would not be a problem.
- 2) Nehru believed that Communalism would be a positive force.
- 3) Nehru believed that Communalism would be dangerous for India.
- 4) Nehru believed that Communalism would make any nation great.

**Correct Answer:** Nehru believed that Communalism would be dangerous for India.

**Candidate Answer:** Nehru believed that Communalism would be dangerous for India.

Question 100.A passage is given with 5 questions following it. Read the passage carefully and choose the best answer to each question out of the four alternatives and click the button corresponding to it.

"Tryst with Destiny" was a speech delivered by Jawaharlal Nehru, the first Prime Minister of independent India, to the Indian Constituent Assembly in Parliament, on 14th August 1947. It is considered to be one of the greatest speeches of all times and to be a landmark oration that captures the essence of the triumphant culmination of the largely non-violent Indian independence struggle against the British Empire in India.

"Long years ago we made a tryst with destiny, and now the time comes when we shall redeem our pledge, not wholly or in full measure, but very substantially. Freedom and power bring responsibility. The responsibility rests upon the assembly, a sovereign body representing the sovereign people of India. The service of India means the service of the millions who suffer. It means the ending of poverty and ignorance and disease and inequality of opportunity. We cannot encourage communalism or narrow-mindedness, for no nation can be great whose people are narrow in thought or in action.

To the people of India, whose representatives we are, this is no time for petty and destructive criticism, no time for ill will or blaming others. We have to build the noble mansion of free India where all her children may dwell".

What mansion did Nehru want to see built?

**Options:**

- 1) Nehru believed that the expensive mansion of India should be built.
- 2) Nehru believed that the honorable mansion of India should be built.
- 3) Nehru believed that the simple mansion of India should be built.
- 4) Nehru believed that the huge mansion of India should be built.

**Correct Answer:** Nehru believed that the honorable mansion of India should be built.

**Candidate Answer:** Nehru believed that the honorable mansion of India should be built.

Downloaded from [www.qmaths.in](http://www.qmaths.in)

**Qmaths.in**  
SSC | IBPS | RAILWAYS | LIC | SIDBI

Visit [www.qmaths.in](http://www.qmaths.in) for tons of free study materials and latest exam updates.